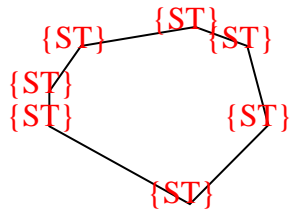




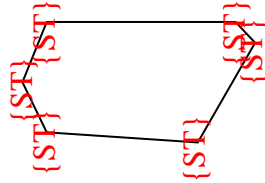


Zähle die Anzahl von spitzwinkligen, stumpfwinkligen und rechten Winkeln in jeder Form.

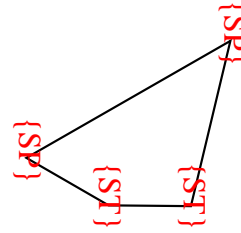
Bsp)



1)



2)



Bsp. 0 7 0

1. 0 6 0

2. 2 2 0

3. 3 0 0

4. 0 0 4

5. 2 2 0

6. 0 0 4

7. 1 3 1

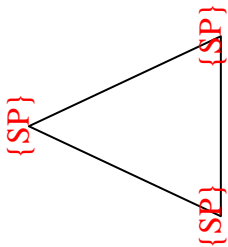
8. 0 6 0

9. 2 0 1

10. 1 2 1

11. 0 4 2

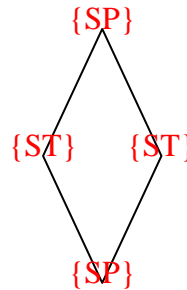
3)



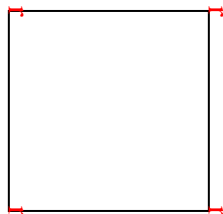
4)



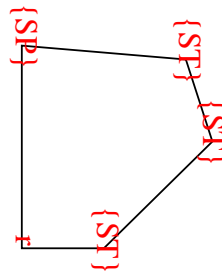
5)



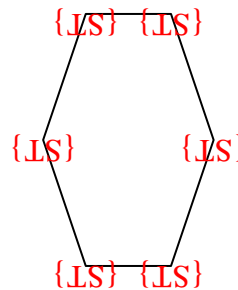
6)



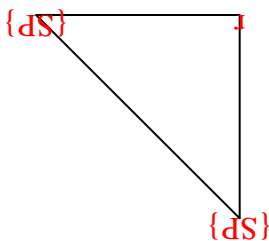
7)



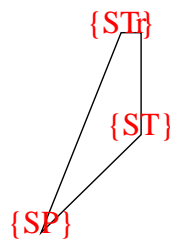
8)



9)



10)



11)

