



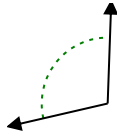
Stelle fest, ob der gezeigte Winkel spitzwinklig, stumpfwinklig, rechtwinklig oder geradwinklig ist.

**Antworten**

Bsp)



1)



2)

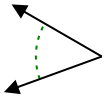


Bsp. rechtwinklig

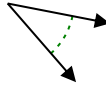
1. \_\_\_\_\_

2. \_\_\_\_\_

3)



4)



5)

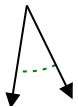


3. \_\_\_\_\_

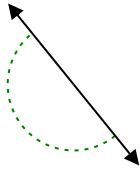
4. \_\_\_\_\_

5. \_\_\_\_\_

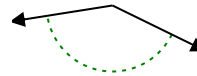
6)



7)



8)

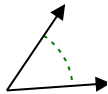


6. \_\_\_\_\_

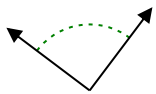
7. \_\_\_\_\_

8. \_\_\_\_\_

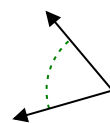
9)



10)



11)



9. \_\_\_\_\_

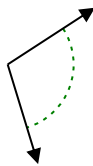
10. \_\_\_\_\_

11. \_\_\_\_\_

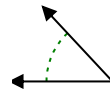
12)



13)



14)



12. \_\_\_\_\_

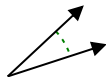
13. \_\_\_\_\_

14. \_\_\_\_\_

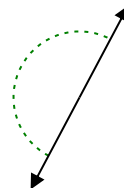
15)



16)



17)

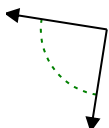


15. \_\_\_\_\_

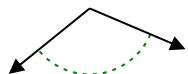
16. \_\_\_\_\_

17. \_\_\_\_\_

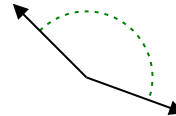
18)



19)



20)



18. \_\_\_\_\_

19. \_\_\_\_\_

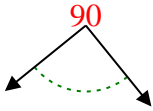
20. \_\_\_\_\_

1-10	95	90	85	80	75	70	65	60	55	50
11-20	45	40	35	30	25	20	15	10	5	0

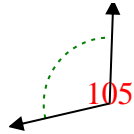


Stelle fest, ob der gezeigte Winkel spitzwinklig, stumpfwinklig, rechtwinklig oder geradwinklig ist.

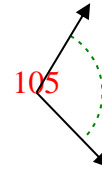
Bsp)



1)



2)

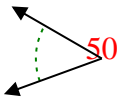


Bsp. rechtwinklig

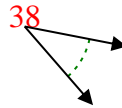
1. stumpfwinklig

2. stumpfwinklig

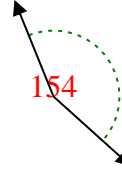
3)



4)



5)

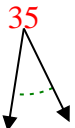


3. spitzwinklig

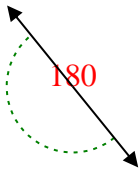
4. spitzwinklig

5. stumpfwinklig

6)



7)



8)



6. spitzwinklig

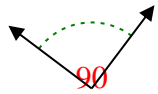
7. gestreckt

8. stumpfwinklig

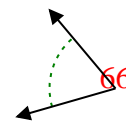
9)



10)



11)

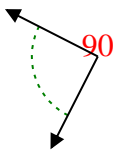


9. spitzwinklig

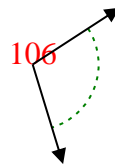
10. rechtwinklig

11. spitzwinklig

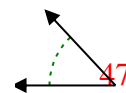
12)



13)



14)

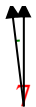


12. rechtwinklig

13. stumpfwinklig

14. spitzwinklig

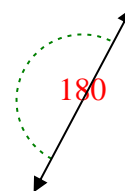
15)



16)



17)

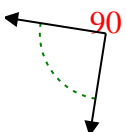


15. spitzwinklig

16. spitzwinklig

17. gestreckt

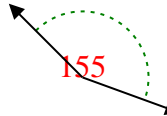
18)



19)



20)



18. rechtwinklig

19. stumpfwinklig

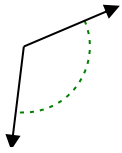
20. stumpfwinklig



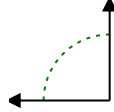
Stelle fest, ob der gezeigte Winkel spitzwinklig, stumpfwinklig oder geradwinklig ist.

**Antworten**

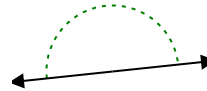
Bsp)



1)



2)



Bsp. stumpfwinklig

1. \_\_\_\_\_

2. \_\_\_\_\_

3. \_\_\_\_\_

4. \_\_\_\_\_

5. \_\_\_\_\_

6. \_\_\_\_\_

7. \_\_\_\_\_

8. \_\_\_\_\_

9. \_\_\_\_\_

10. \_\_\_\_\_

11. \_\_\_\_\_

12. \_\_\_\_\_

13. \_\_\_\_\_

14. \_\_\_\_\_

15. \_\_\_\_\_

16. \_\_\_\_\_

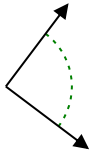
17. \_\_\_\_\_

18. \_\_\_\_\_

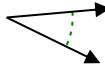
19. \_\_\_\_\_

20. \_\_\_\_\_

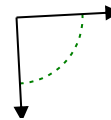
3)



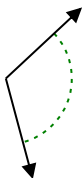
4)



5)



6)



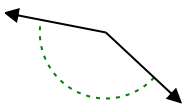
7)



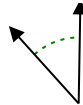
8)



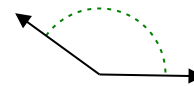
9)



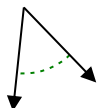
10)



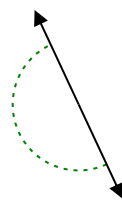
11)



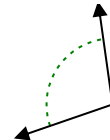
12)



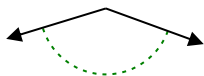
13)



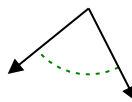
14)



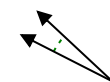
15)



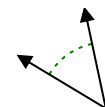
16)



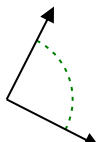
17)



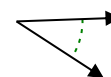
18)



19)



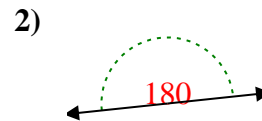
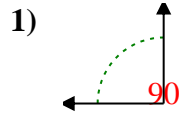
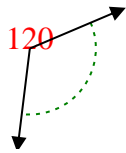
20)



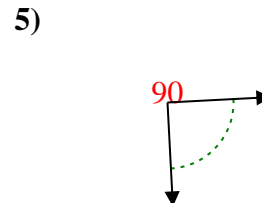
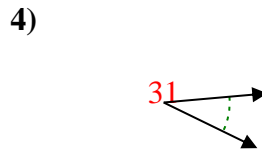
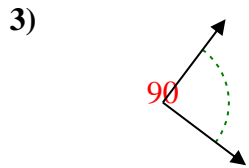


Stelle fest, ob der gezeigte Winkel spitzwinklig, stumpfwinklig, rechtwinklig oder geradwinklig ist.

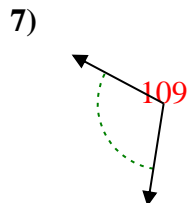
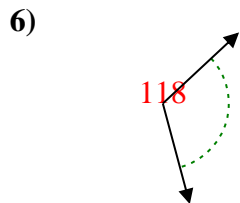
Bsp)



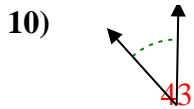
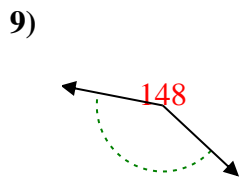
Bsp. stumpfwinklig



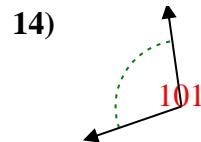
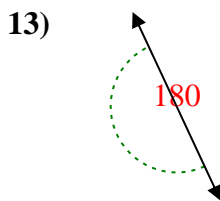
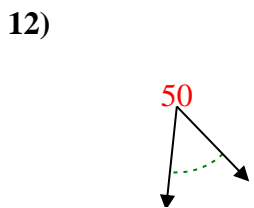
1. rechtwinklig



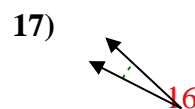
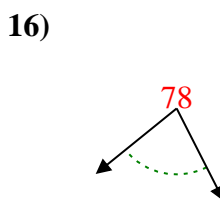
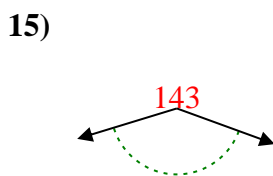
2. gestreckt



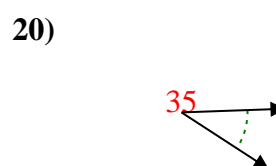
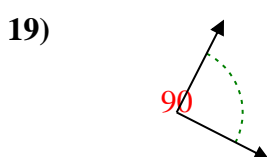
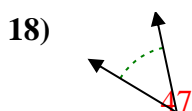
3. rechtwinklig



4. spitzwinklig



5. rechtwinklig



6. stumpfwinklig

7. stumpfwinklig

8. spitzwinklig

9. stumpfwinklig

10. spitzwinklig

11. stumpfwinklig

12. spitzwinklig

13. gestreckt

14. stumpfwinklig

15. stumpfwinklig

16. spitzwinklig

17. spitzwinklig

18. spitzwinklig

19. rechtwinklig

20. spitzwinklig



Stelle fest, ob der gezeigte Winkel spitzwinklig, stumpfwinklig, rechtwinklig oder geradwinklig ist.

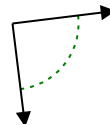
Bsp)



1)



2)

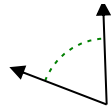


Bsp. stumpfwinklig

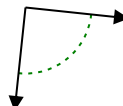
3)



4)



5)



1. \_\_\_\_\_

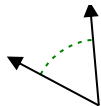
2. \_\_\_\_\_

3. \_\_\_\_\_

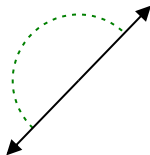
4. \_\_\_\_\_

5. \_\_\_\_\_

6)



7)



8)

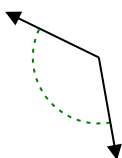


6. \_\_\_\_\_

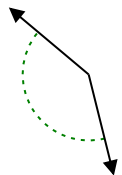
7. \_\_\_\_\_

8. \_\_\_\_\_

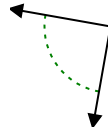
9)



10)



11)

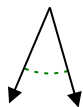


9. \_\_\_\_\_

10. \_\_\_\_\_

11. \_\_\_\_\_

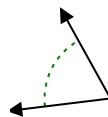
12)



13)



14)

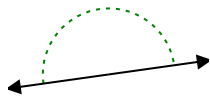


12. \_\_\_\_\_

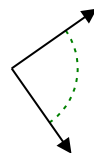
13. \_\_\_\_\_

14. \_\_\_\_\_

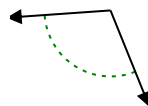
15)



16)



17)



15. \_\_\_\_\_

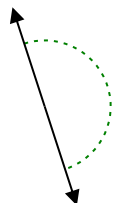
16. \_\_\_\_\_

17. \_\_\_\_\_

18)



19)



20)



18. \_\_\_\_\_

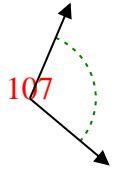
19. \_\_\_\_\_

20. \_\_\_\_\_

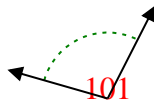


Stelle fest, ob der gezeigte Winkel spitzwinklig, stumpfwinklig, rechtwinklig oder geradwinklig ist.

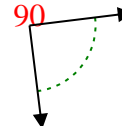
Bsp)



1)



2)



Bsp. stumpfwinklig

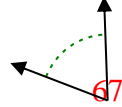
1. stumpfwinklig

2. rechtwinklig

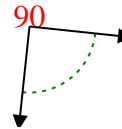
3)



4)



5)

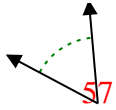


3. spitzwinklig

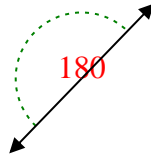
4. spitzwinklig

5. rechtwinklig

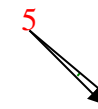
6)



7)



8)

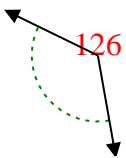


6. spitzwinklig

7. gestreckt

8. spitzwinklig

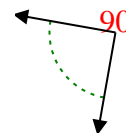
9)



10)



11)

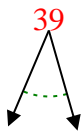


9. stumpfwinklig

10. stumpfwinklig

11. rechtwinklig

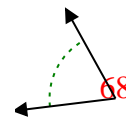
12)



13)



14)

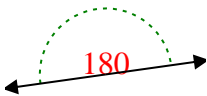


12. spitzwinklig

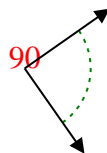
13. spitzwinklig

14. spitzwinklig

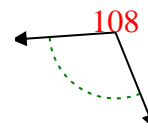
15)



16)



17)

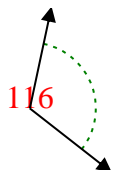


15. gestreckt

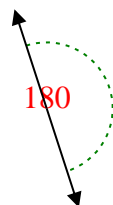
16. rechtwinklig

17. stumpfwinklig

18)



19)



20)



18. stumpfwinklig

19. gestreckt

20. stumpfwinklig



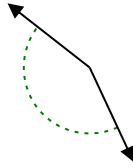
Stelle fest, ob der gezeigte Winkel spitzwinklig, stumpfwinklig, rechtwinklig oder geradwinklig ist.

**Antworten**

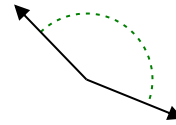
Bsp)



1)



2)

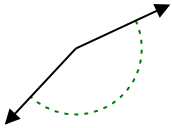


Bsp. gestreckt

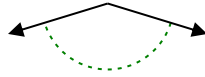
1. \_\_\_\_\_

2. \_\_\_\_\_

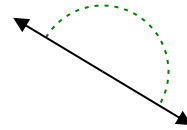
3)



4)



5)



3. \_\_\_\_\_

4. \_\_\_\_\_

5. \_\_\_\_\_

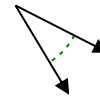
6)



7)



8)

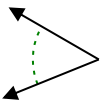


6. \_\_\_\_\_

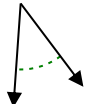
7. \_\_\_\_\_

8. \_\_\_\_\_

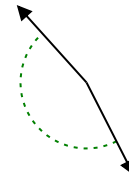
9)



10)



11)

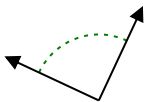


9. \_\_\_\_\_


10. \_\_\_\_\_

11. \_\_\_\_\_

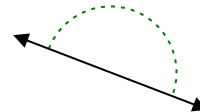
12)



13)



14)

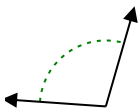


12. \_\_\_\_\_

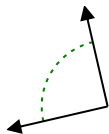
13. \_\_\_\_\_

14. \_\_\_\_\_

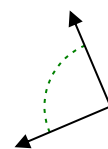
15)



16)



17)



15. \_\_\_\_\_

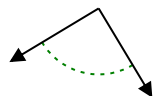
16. \_\_\_\_\_

17. \_\_\_\_\_

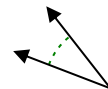
18)



19)



20)



18. \_\_\_\_\_

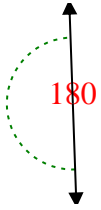
19. \_\_\_\_\_

20. \_\_\_\_\_

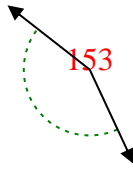


Stelle fest, ob der gezeigte Winkel spitzwinklig, stumpfwinklig, rechtwinklig oder geradwinklig ist.

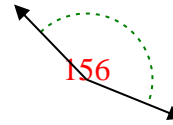
Bsp)



1)



2)



Bsp. gestreckt

1. stumpfwinklig

2. stumpfwinklig

3. stumpfwinklig

4. stumpfwinklig

5. gestreckt

6. spitzwinklig

7. spitzwinklig

8. spitzwinklig

9. spitzwinklig

10. spitzwinklig

11. stumpfwinklig

12. rechtwinklig

13. spitzwinklig

14. gestreckt

15. stumpfwinklig

16. rechtwinklig

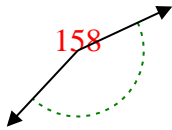
17. rechtwinklig

18. stumpfwinklig

19. rechtwinklig

20. spitzwinklig

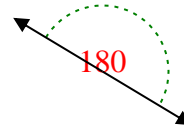
3)



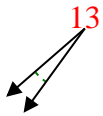
4)



5)



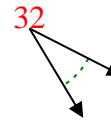
6)



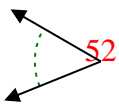
7)



8)



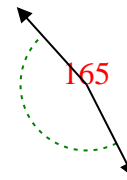
9)



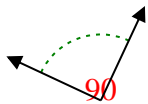
10)



11)



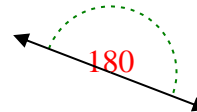
12)



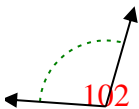
13)



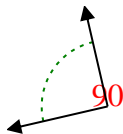
14)



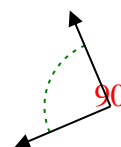
15)



16)



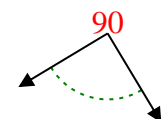
17)



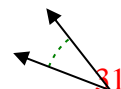
18)



19)



20)



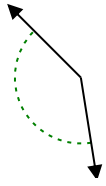




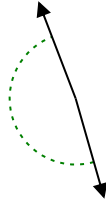
Stelle fest, ob der gezeigte Winkel spitzwinklig, stumpfwinklig oder geradwinklig ist.

**Antworten**

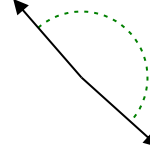
Bsp)



1)



2)

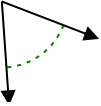


Bsp. stumpfwinklig

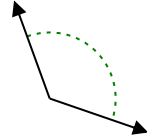
1. \_\_\_\_\_

2. \_\_\_\_\_

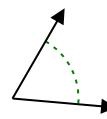
3)



4)



5)

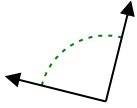


3. \_\_\_\_\_

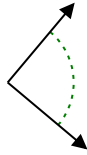
4. \_\_\_\_\_

5. \_\_\_\_\_

6)



7)



8)

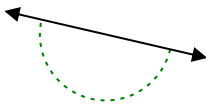


6. \_\_\_\_\_

7. \_\_\_\_\_

8. \_\_\_\_\_

9)



10)



11)

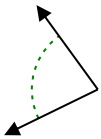


9. \_\_\_\_\_

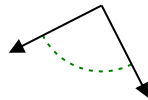
10. \_\_\_\_\_

11. \_\_\_\_\_

12)



13)



14)

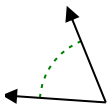


12. \_\_\_\_\_

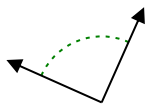
13. \_\_\_\_\_

14. \_\_\_\_\_

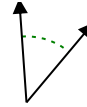
15)



16)



17)

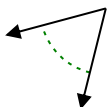


15. \_\_\_\_\_

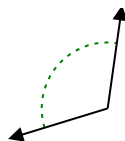
16. \_\_\_\_\_

17. \_\_\_\_\_

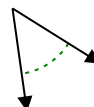
18)



19)



20)



18. \_\_\_\_\_

19. \_\_\_\_\_

20. \_\_\_\_\_



Stelle fest, ob der gezeigte Winkel spitzwinklig, stumpfwinklig, rechtwinklig oder geradwinklig ist.

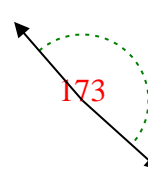
Bsp)



1)

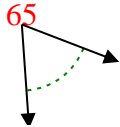


2)

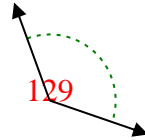


Bsp. stumpfwinklig

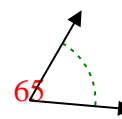
3)



4)



5)



1. stumpfwinklig

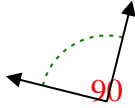
2. stumpfwinklig

3. spitzwinklig

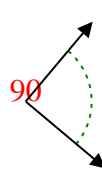
4. stumpfwinklig

5. spitzwinklig

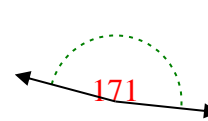
6)



7)



8)

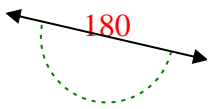


6. rechtwinklig

7. rechtwinklig

8. stumpfwinklig

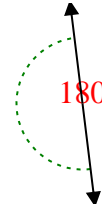
9)



10)



11)

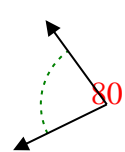


9. gestreckt

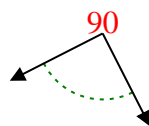
10. spitzwinklig

11. gestreckt

12)



13)



14)

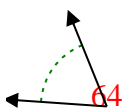


12. spitzwinklig

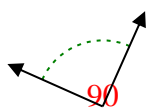
13. rechtwinklig

14. stumpfwinklig

15)



16)



17)

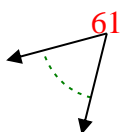


15. spitzwinklig

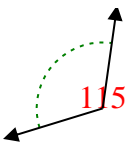
16. rechtwinklig

17. spitzwinklig

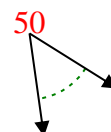
18)



19)



20)



18. spitzwinklig

19. stumpfwinklig

20. spitzwinklig



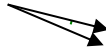
Stelle fest, ob der gezeigte Winkel spitzwinklig, stumpfwinklig, rechtwinklig oder geradwinklig ist.

**Antworten**

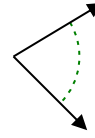
Bsp)



1)



2)

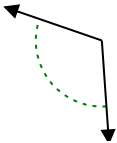


Bsp. spitzwinklig

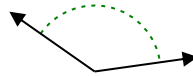
1. \_\_\_\_\_

2. \_\_\_\_\_

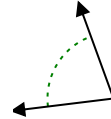
3)



4)



5)

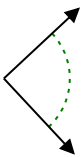


3. \_\_\_\_\_

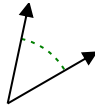
4. \_\_\_\_\_

5. \_\_\_\_\_

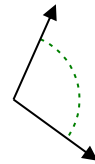
6)



7)



8)

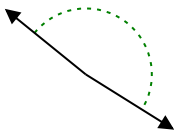


6. \_\_\_\_\_

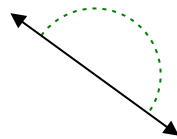
7. \_\_\_\_\_

8. \_\_\_\_\_

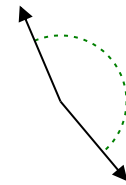
9)



10)



11)

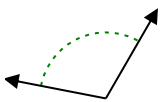


9. \_\_\_\_\_

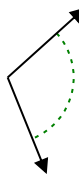
10. \_\_\_\_\_

11. \_\_\_\_\_

12)



13)



14)

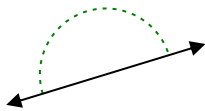


12. \_\_\_\_\_

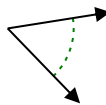
13. \_\_\_\_\_

14. \_\_\_\_\_

15)



16)



17)

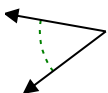


15. \_\_\_\_\_

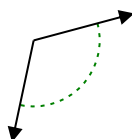
16. \_\_\_\_\_

17. \_\_\_\_\_

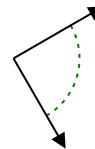
18)



19)



20)



18. \_\_\_\_\_

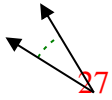
19. \_\_\_\_\_

20. \_\_\_\_\_



Stelle fest, ob der gezeigte Winkel spitzwinklig, stumpfwinklig, rechtwinklig oder geradwinklig ist.

Bsp)



1)



2)

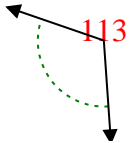


Bsp. spitzwinklig

1. spitzwinklig

2. spitzwinklig

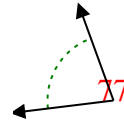
3)



4)



5)

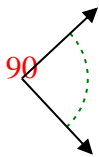


3. stumpfwinklig

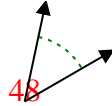
4. stumpfwinklig

5. spitzwinklig

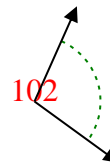
6)



7)



8)

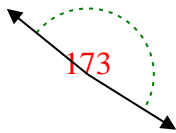


6. rechtwinklig

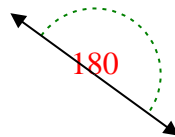
7. spitzwinklig

8. stumpfwinklig

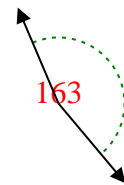
9)



10)



11)

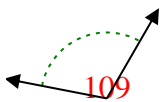


9. stumpfwinklig

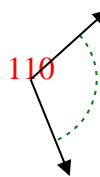
10. gestreckt

11. stumpfwinklig

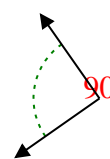
12)



13)



14)

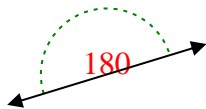


12. stumpfwinklig

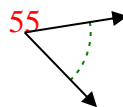
13. stumpfwinklig

14. rechtwinklig

15)



16)



17)

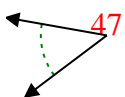


15. gestreckt

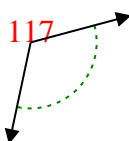
16. spitzwinklig

17. rechtwinklig

18)



19)



20)



18. spitzwinklig

19. stumpfwinklig

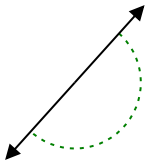
20. rechtwinklig



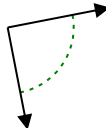
Stelle fest, ob der gezeigte Winkel spitzwinklig, stumpfwinklig, rechtwinklig oder geradwinklig ist.

**Antworten**

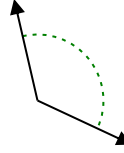
Bsp)



1)



2)

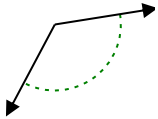


Bsp. gestreckt

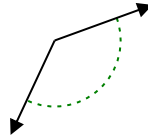
1. \_\_\_\_\_

2. \_\_\_\_\_

3)



4)



5)



3. \_\_\_\_\_

4. \_\_\_\_\_

5. \_\_\_\_\_

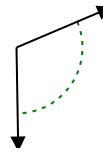
6)



7)



8)

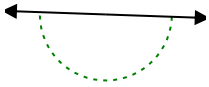


6. \_\_\_\_\_

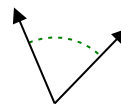
7. \_\_\_\_\_

8. \_\_\_\_\_

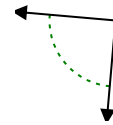
9)



10)



11)

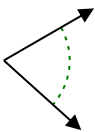


9. \_\_\_\_\_

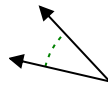
10. \_\_\_\_\_

11. \_\_\_\_\_

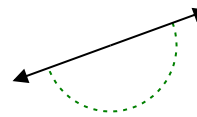
12)



13)



14)

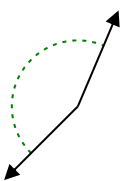


12. \_\_\_\_\_

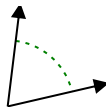
13. \_\_\_\_\_

14. \_\_\_\_\_

15)



16)



17)

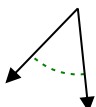


15. \_\_\_\_\_

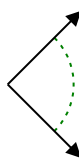
16. \_\_\_\_\_

17. \_\_\_\_\_

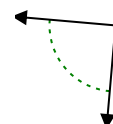
18)



19)



20)



18. \_\_\_\_\_

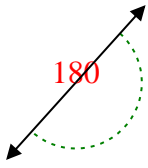
19. \_\_\_\_\_

20. \_\_\_\_\_

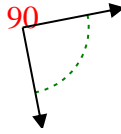


Stelle fest, ob der gezeigte Winkel spitzwinklig, stumpfwinklig, rechtwinklig oder geradwinklig ist.

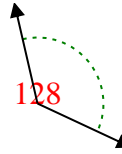
Bsp)



1)

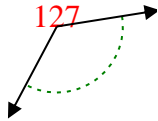


2)

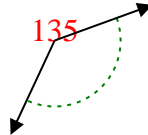


Bsp. gestreckt

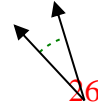
3)



4)



5)



1. rechtwinklig

2. stumpfwinklig

3. stumpfwinklig

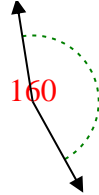
4. stumpfwinklig

5. spitzwinklig

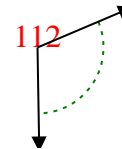
6)



7)



8)

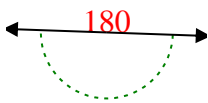


6. stumpfwinklig

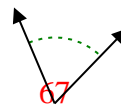
7. stumpfwinklig

8. stumpfwinklig

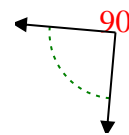
9)



10)



11)

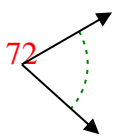


9. gestreckt

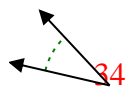
10. spitzwinklig

11. rechtwinklig

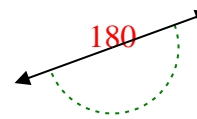
12)



13)



14)

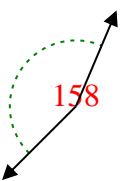


12. spitzwinklig

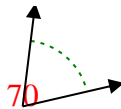
13. spitzwinklig

14. gestreckt

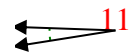
15)



16)



17)



15. stumpfwinklig

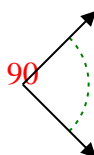
16. spitzwinklig

17. spitzwinklig

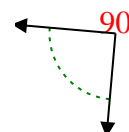
18)



19)



20)



18. spitzwinklig

19. rechtwinklig

20. rechtwinklig



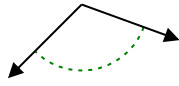
Stelle fest, ob der gezeigte Winkel spitzwinklig, stumpfwinklig, rechtwinklig oder geradwinklig ist.

**Antworten**

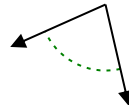
Bsp)



1)



2)

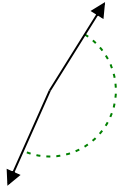


Bsp. spitzwinklig

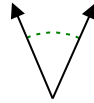
1. \_\_\_\_\_

2. \_\_\_\_\_

3)



4)



5)

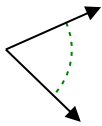


3. \_\_\_\_\_

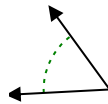
4. \_\_\_\_\_

5. \_\_\_\_\_

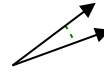
6)



7)



8)

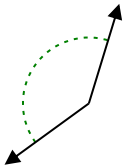


6. \_\_\_\_\_

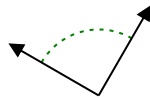
7. \_\_\_\_\_

8. \_\_\_\_\_

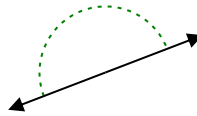
9)



10)



11)

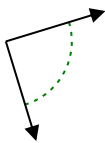


9. \_\_\_\_\_

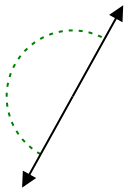
10. \_\_\_\_\_

11. \_\_\_\_\_

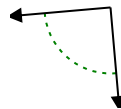
12)



13)



14)

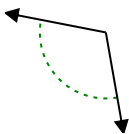


12. \_\_\_\_\_

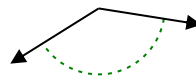
13. \_\_\_\_\_

14. \_\_\_\_\_

15)



16)



17)

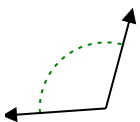


15. \_\_\_\_\_

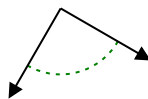
16. \_\_\_\_\_

17. \_\_\_\_\_

18)



19)



20)



18. \_\_\_\_\_

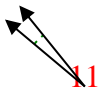
19. \_\_\_\_\_

20. \_\_\_\_\_

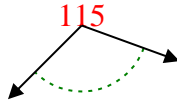


Stelle fest, ob der gezeigte Winkel spitzwinklig, stumpfwinklig, rechtwinklig oder geradwinklig ist.

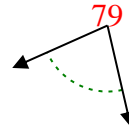
Bsp)



1)



2)

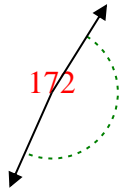


Bsp. spitzwinklig

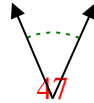
1. stumpfwinklig

2. spitzwinklig

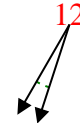
3)



4)



5)

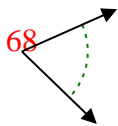


3. stumpfwinklig

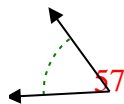
4. spitzwinklig

5. spitzwinklig

6)



7)



8)

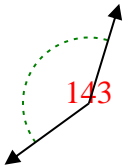


6. spitzwinklig

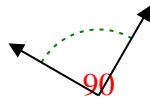
7. spitzwinklig

8. spitzwinklig

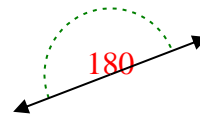
9)



10)



11)

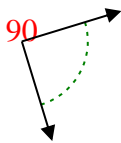


9. stumpfwinklig

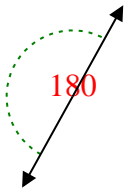
10. rechtwinklig

11. gestreckt

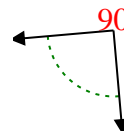
12)



13)



14)

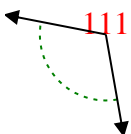


12. rechtwinklig

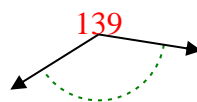
13. gestreckt

14. rechtwinklig

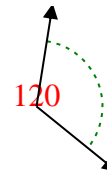
15)



16)



17)

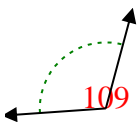


15. stumpfwinklig

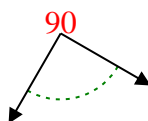
16. stumpfwinklig

17. stumpfwinklig

18)



19)



20)



18. stumpfwinklig

19. rechtwinklig

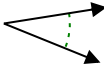
20. stumpfwinklig



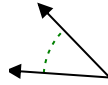


Stelle fest, ob der gezeigte Winkel spitzwinklig, stumpfwinklig, rechtwinklig oder geradwinklig ist.

Bsp)



1)



2)

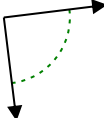


Bsp. spitzwinklig

1. \_\_\_\_\_

2. \_\_\_\_\_

3)



4)



5)



3. \_\_\_\_\_

4. \_\_\_\_\_

5. \_\_\_\_\_

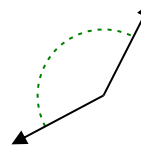
6)



7)



8)

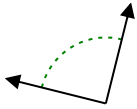


6. \_\_\_\_\_

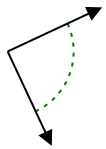
7. \_\_\_\_\_

8. \_\_\_\_\_

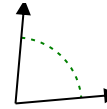
9)



10)



11)

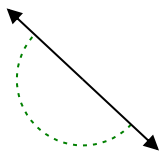


9. \_\_\_\_\_

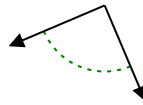
10. \_\_\_\_\_

11. \_\_\_\_\_

12)



13)



14)

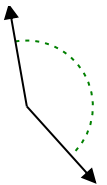


12. \_\_\_\_\_

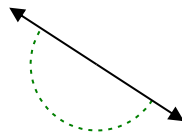
13. \_\_\_\_\_

14. \_\_\_\_\_

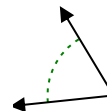
15)



16)



17)

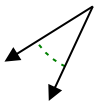


15. \_\_\_\_\_

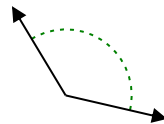
16. \_\_\_\_\_

17. \_\_\_\_\_

18)



19)



20)



18. \_\_\_\_\_

19. \_\_\_\_\_

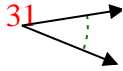
20. \_\_\_\_\_

1-10	95	90	85	80	75	70	65	60	55	50
11-20	45	40	35	30	25	20	15	10	5	0

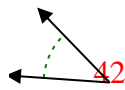


Stelle fest, ob der gezeigte Winkel spitzwinklig, stumpfwinklig, rechtwinklig oder geradwinklig ist.

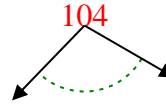
Bsp)



1)



2)

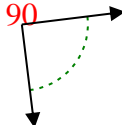


Bsp. spitzwinklig

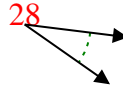
1. spitzwinklig

2. stumpfwinklig

3)



4)



5)



3. rechtwinklig

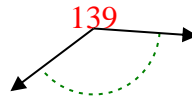
4. spitzwinklig

5. stumpfwinklig

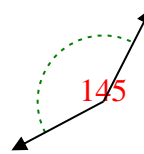
6)



7)



8)

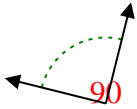


6. spitzwinklig

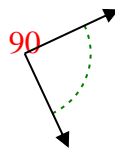
7. stumpfwinklig

8. stumpfwinklig

9)



10)



11)

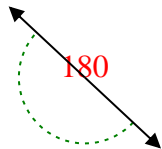


9. rechtwinklig

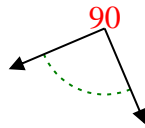
10. rechtwinklig

11. spitzwinklig

12)



13)



14)



12. gestreckt

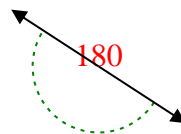
13. rechtwinklig

14. stumpfwinklig

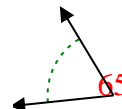
15)



16)



17)

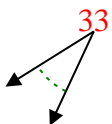


15. stumpfwinklig

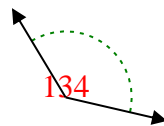
16. gestreckt

17. spitzwinklig

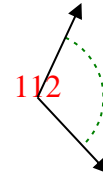
18)



19)



20)



18. spitzwinklig

19. stumpfwinklig

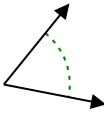
20. stumpfwinklig



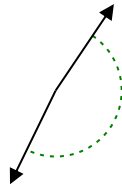
Stelle fest, ob der gezeigte Winkel spitzwinklig, stumpfwinklig, rechtwinklig oder geradwinklig ist.

**Antworten**

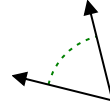
Bsp)



1)



2)

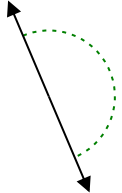


Bsp. spitzwinklig

1. \_\_\_\_\_

2. \_\_\_\_\_

3)



4)



5)

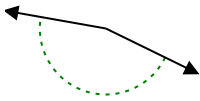


3. \_\_\_\_\_

4. \_\_\_\_\_

5. \_\_\_\_\_

6)



7)



8)

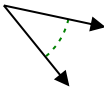


6. \_\_\_\_\_

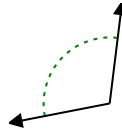
7. \_\_\_\_\_

8. \_\_\_\_\_

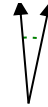
9)



10)



11)



9. \_\_\_\_\_

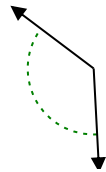
10. \_\_\_\_\_

11. \_\_\_\_\_

12)



13)



14)

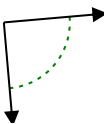


12. \_\_\_\_\_

13. \_\_\_\_\_

14. \_\_\_\_\_

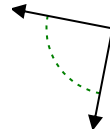
15)



16)



17)



15. \_\_\_\_\_

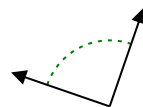
16. \_\_\_\_\_

17. \_\_\_\_\_

18)



19)



20)



18. \_\_\_\_\_

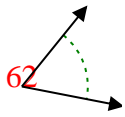
19. \_\_\_\_\_

20. \_\_\_\_\_

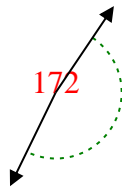


Stelle fest, ob der gezeigte Winkel spitzwinklig, stumpfwinklig, rechtwinklig oder geradwinklig ist.

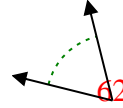
Bsp)



1)



2)



Bsp. spitzwinklig

1. stumpfwinklig

2. spitzwinklig

3. gestreckt

4. spitzwinklig

5. stumpfwinklig

6. stumpfwinklig

7. stumpfwinklig

8. stumpfwinklig

9. spitzwinklig

10. stumpfwinklig

11. spitzwinklig

12. spitzwinklig

13. stumpfwinklig

14. gestreckt

15. rechtwinklig

16. rechtwinklig

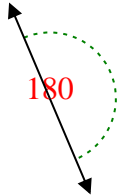
17. rechtwinklig

18. rechtwinklig

19. rechtwinklig

20. spitzwinklig

3)



4)



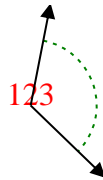
5)



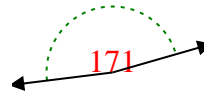
6)



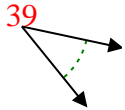
7)



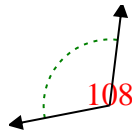
8)



9)



10)



11)



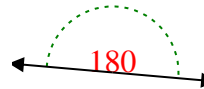
12)



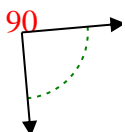
13)



14)



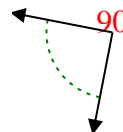
15)



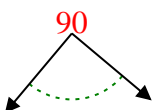
16)



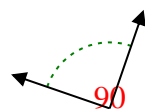
17)



18)



19)



20)

