



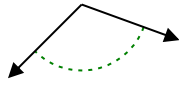
Stelle fest, ob der gezeigte Winkel spitzwinklig, stumpfwinklig, rechtwinklig oder geradwinklig ist.

**Antworten**

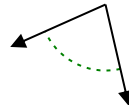
Bsp)



1)



2)

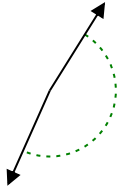


Bsp. spitzwinklig

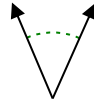
1. \_\_\_\_\_

2. \_\_\_\_\_

3)



4)



5)

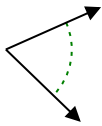


3. \_\_\_\_\_

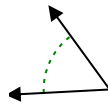
4. \_\_\_\_\_

5. \_\_\_\_\_

6)



7)



8)

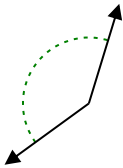


6. \_\_\_\_\_

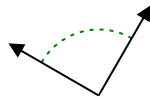
7. \_\_\_\_\_

8. \_\_\_\_\_

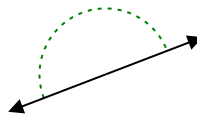
9)



10)



11)

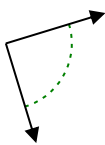


9. \_\_\_\_\_

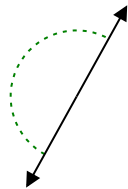
10. \_\_\_\_\_

11. \_\_\_\_\_

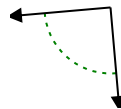
12)



13)



14)

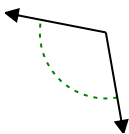


12. \_\_\_\_\_

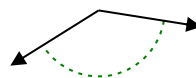
13. \_\_\_\_\_

14. \_\_\_\_\_

15)



16)



17)

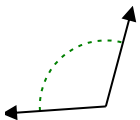


15. \_\_\_\_\_

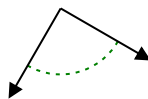
16. \_\_\_\_\_

17. \_\_\_\_\_

18)



19)



20)



18. \_\_\_\_\_

19. \_\_\_\_\_

20. \_\_\_\_\_

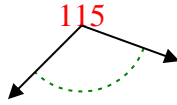


Stelle fest, ob der gezeigte Winkel spitzwinklig, stumpfwinklig, rechtwinklig oder geradwinklig ist.

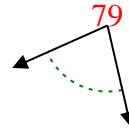
Bsp)



1)



2)

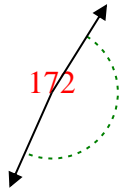


Bsp. spitzwinklig

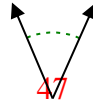
1. stumpfwinklig

2. spitzwinklig

3)



4)



5)

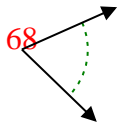


3. stumpfwinklig

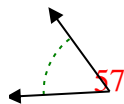
4. spitzwinklig

5. spitzwinklig

6)



7)



8)

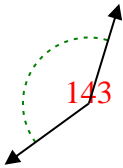


6. spitzwinklig

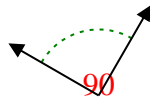
7. spitzwinklig

8. spitzwinklig

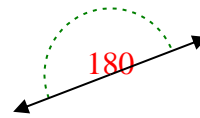
9)



10)



11)

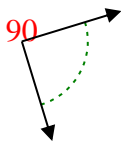


9. stumpfwinklig

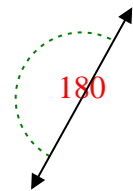
10. rechtwinklig

11. gestreckt

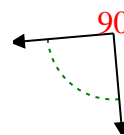
12)



13)



14)

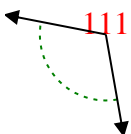


12. rechtwinklig

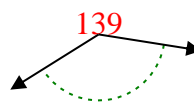
13. gestreckt

14. rechtwinklig

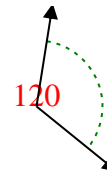
15)



16)



17)

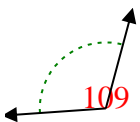


15. stumpfwinklig

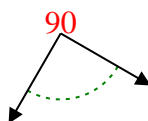
16. stumpfwinklig

17. stumpfwinklig

18)



19)



20)



18. stumpfwinklig

19. rechtwinklig

20. stumpfwinklig