



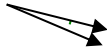
Stelle fest, ob der gezeigte Winkel spitzwinklig, stumpfwinklig, rechtwinklig oder geradwinklig ist.

**Antworten**

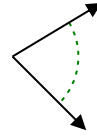
Bsp)



1)



2)

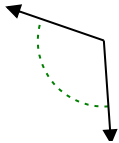


Bsp. spitzwinklig

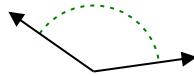
1. \_\_\_\_\_

2. \_\_\_\_\_

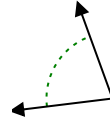
3)



4)



5)

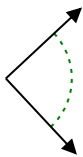


3. \_\_\_\_\_

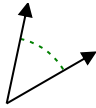
4. \_\_\_\_\_

5. \_\_\_\_\_

6)



7)



8)

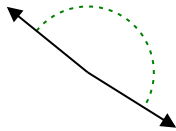


6. \_\_\_\_\_

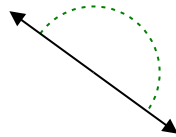
7. \_\_\_\_\_

8. \_\_\_\_\_

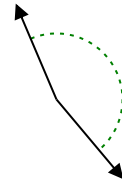
9)



10)



11)

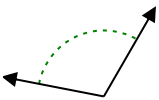


9. \_\_\_\_\_

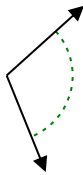
10. \_\_\_\_\_

11. \_\_\_\_\_

12)



13)



14)

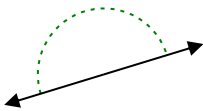


12. \_\_\_\_\_

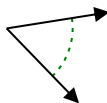
13. \_\_\_\_\_

14. \_\_\_\_\_

15)



16)



17)

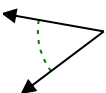


15. \_\_\_\_\_

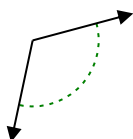
16. \_\_\_\_\_

17. \_\_\_\_\_

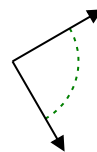
18)



19)



20)



18. \_\_\_\_\_

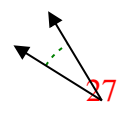
19. \_\_\_\_\_

20. \_\_\_\_\_

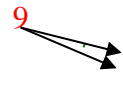


Stelle fest, ob der gezeigte Winkel spitzwinklig, stumpfwinklig, rechtwinklig oder geradwinklig ist.

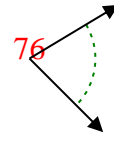
Bsp)



1)



2)

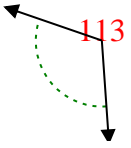


Bsp. spitzwinklig

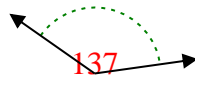
1. spitzwinklig

2. spitzwinklig

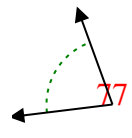
3)



4)



5)

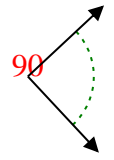


3. stumpfwinklig

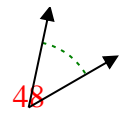
4. stumpfwinklig

5. spitzwinklig

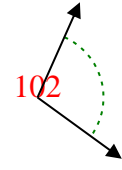
6)



7)



8)

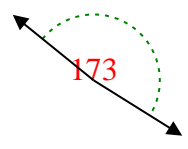


6. rechtwinklig

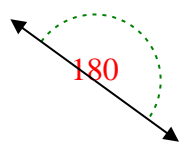
7. spitzwinklig

8. stumpfwinklig

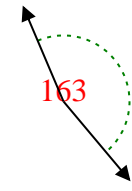
9)



10)



11)

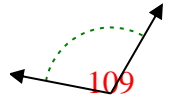


9. stumpfwinklig

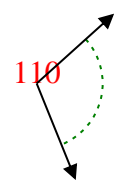
10. gestreckt

11. stumpfwinklig

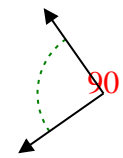
12)



13)



14)

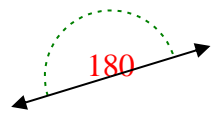


12. stumpfwinklig

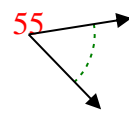
13. stumpfwinklig

14. rechtwinklig

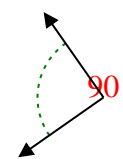
15)



16)



17)

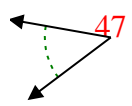


15. gestreckt

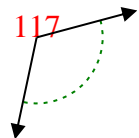
16. spitzwinklig

17. rechtwinklig

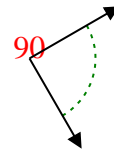
18)



19)



20)



18. spitzwinklig

19. stumpfwinklig

20. rechtwinklig