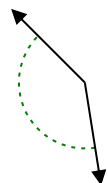




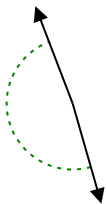
Stelle fest, ob der gezeigte Winkel spitzwinklig, stumpfwinklig oder geradwinklig ist.

Antworten

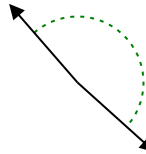
Bsp)



1)



2)

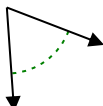


Bsp. stumpfwinklig

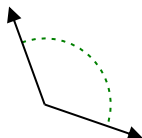
1. _____

2. _____

3)



4)



5)

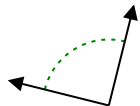


3. _____

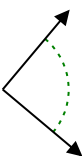
4. _____

5. _____

6)



7)



8)

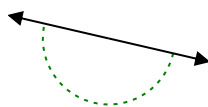


6. _____

7. _____

8. _____

9)



10)



11)

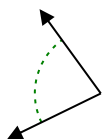


9. _____

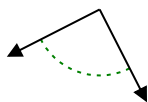
10. _____

11. _____

12)



13)



14)

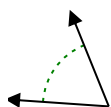


12. _____

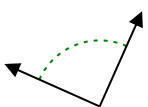
13. _____

14. _____

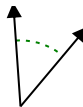
15)



16)



17)

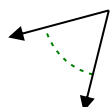


15. _____

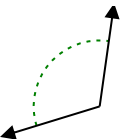
16. _____

17. _____

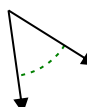
18)



19)



20)



18. _____

19. _____

20. _____

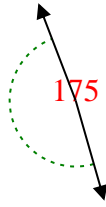


Stelle fest, ob der gezeigte Winkel spitzwinklig, stumpfwinklig, rechtwinklig oder geradwinklig ist.

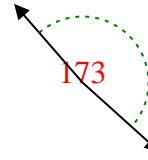
Bsp)



1)

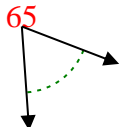


2)

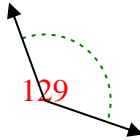


Bsp. stumpfwinklig

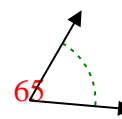
3)



4)



5)



1. stumpfwinklig

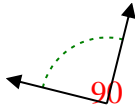
2. stumpfwinklig

3. spitzwinklig

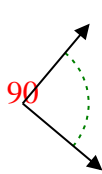
4. stumpfwinklig

5. spitzwinklig

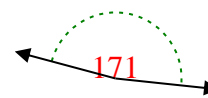
6)



7)



8)

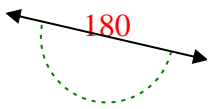


6. rechtwinklig

7. rechtwinklig

8. stumpfwinklig

9)



10)



11)

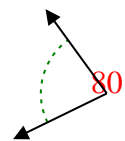


9. gestreckt

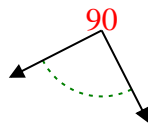
10. spitzwinklig

11. gestreckt

12)



13)



14)

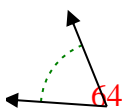


12. spitzwinklig

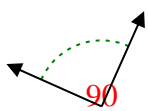
13. rechtwinklig

14. stumpfwinklig

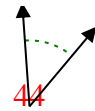
15)



16)



17)

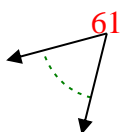


15. spitzwinklig

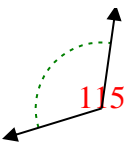
16. rechtwinklig

17. spitzwinklig

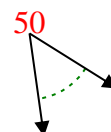
18)



19)



20)



18. spitzwinklig

19. stumpfwinklig

20. spitzwinklig

1-10	95	90	85	80	75	70	65	60	55	50
11-20	45	40	35	30	25	20	15	10	5	0