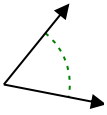




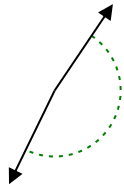
Stelle fest, ob der gezeigte Winkel spitzwinklig, stumpfwinklig, rechtwinklig oder geradwinklig ist.

**Antworten**

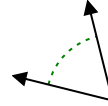
Bsp)



1)



2)

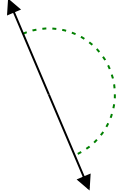


Bsp. spitzwinklig

1. \_\_\_\_\_

2. \_\_\_\_\_

3)



4)



5)

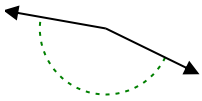


3. \_\_\_\_\_

4. \_\_\_\_\_

5. \_\_\_\_\_

6)



7)



8)

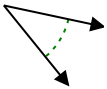


6. \_\_\_\_\_

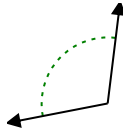
7. \_\_\_\_\_

8. \_\_\_\_\_

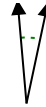
9)



10)



11)



9. \_\_\_\_\_

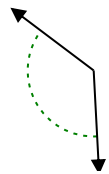
10. \_\_\_\_\_

11. \_\_\_\_\_

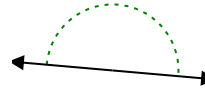
12)



13)



14)

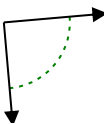


12. \_\_\_\_\_

13. \_\_\_\_\_

14. \_\_\_\_\_

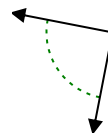
15)



16)



17)



15. \_\_\_\_\_

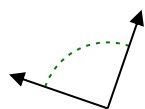
16. \_\_\_\_\_

17. \_\_\_\_\_

18)



19)



20)



18. \_\_\_\_\_

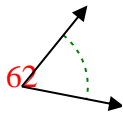
19. \_\_\_\_\_

20. \_\_\_\_\_

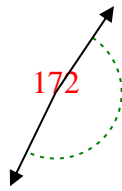


Stelle fest, ob der gezeigte Winkel spitzwinklig, stumpfwinklig, rechtwinklig oder geradwinklig ist.

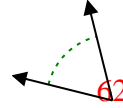
Bsp)



1)



2)



Bsp. spitzwinklig

1. stumpfwinklig

2. spitzwinklig

3. gestreckt

4. spitzwinklig

5. stumpfwinklig

6. stumpfwinklig

7. stumpfwinklig

8. stumpfwinklig

9. spitzwinklig

10. stumpfwinklig

11. spitzwinklig

12. spitzwinklig

13. stumpfwinklig

14. gestreckt

15. rechtwinklig

16. rechtwinklig

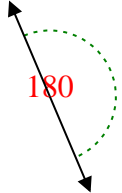
17. rechtwinklig

18. rechtwinklig

19. rechtwinklig

20. spitzwinklig

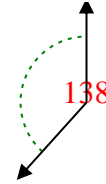
3)



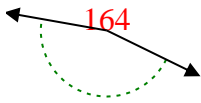
4)



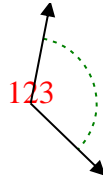
5)



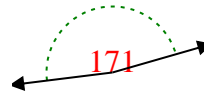
6)



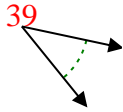
7)



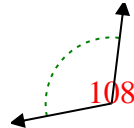
8)



9)



10)



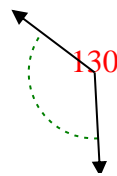
11)



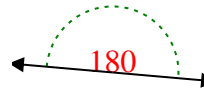
12)



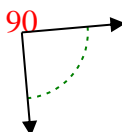
13)



14)



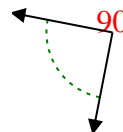
15)



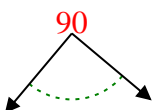
16)



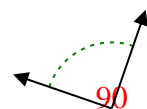
17)



18)



19)



20)

