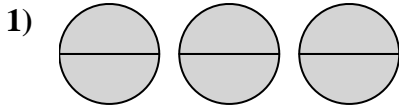


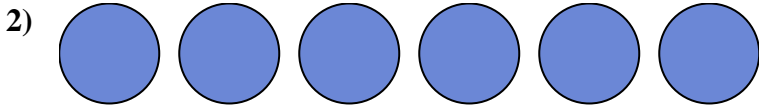


Schreiben Sie den schattierten Betrag als Bruch.

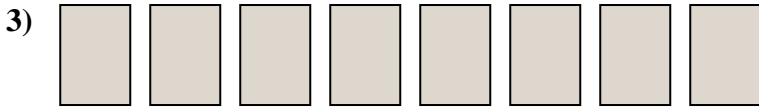
**Antworten**




1. \_\_\_\_\_



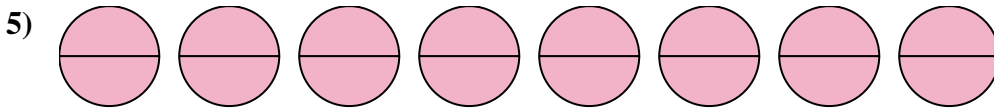
2. \_\_\_\_\_



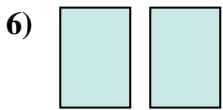
3. \_\_\_\_\_



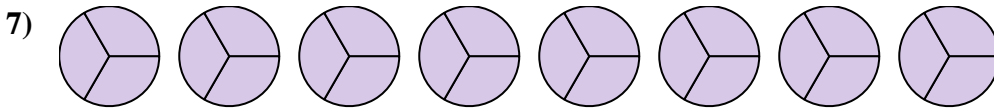
4. \_\_\_\_\_



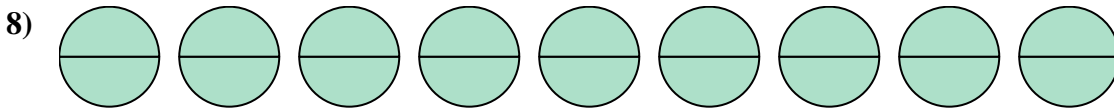
5. \_\_\_\_\_



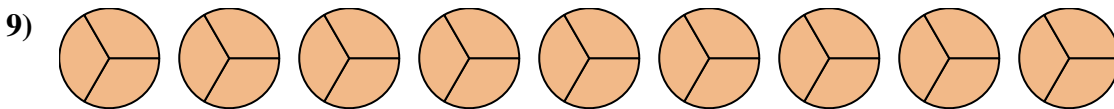
6. \_\_\_\_\_



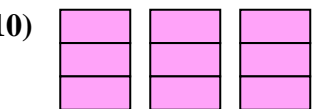
7. \_\_\_\_\_



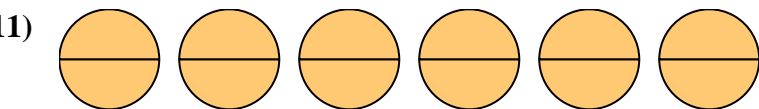
8. \_\_\_\_\_



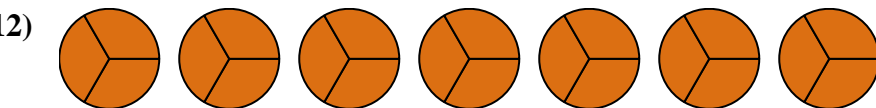
9. \_\_\_\_\_



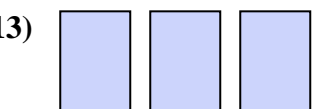
10. \_\_\_\_\_



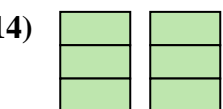
11. \_\_\_\_\_



12. \_\_\_\_\_



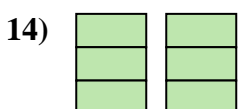
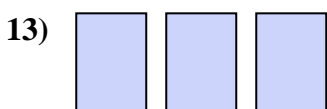
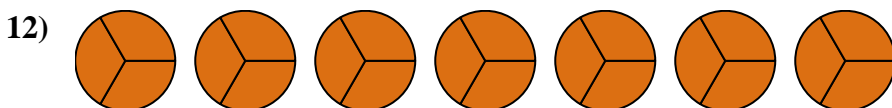
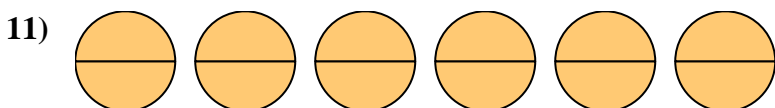
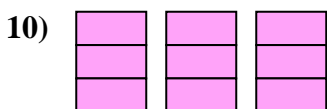
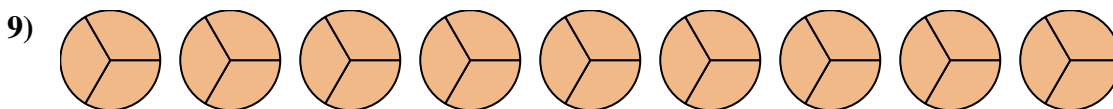
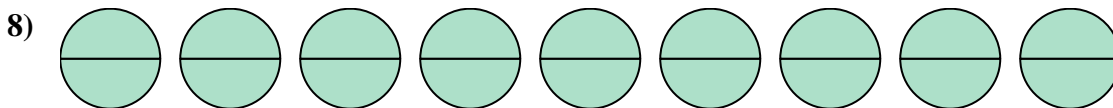
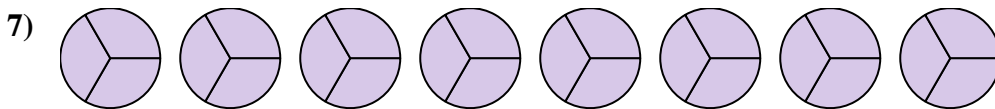
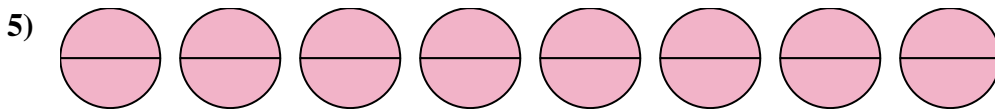

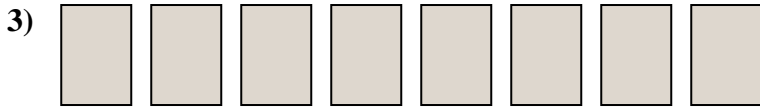
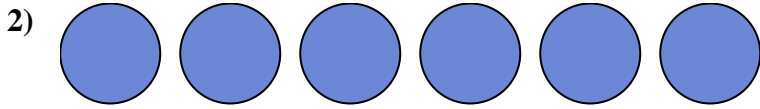
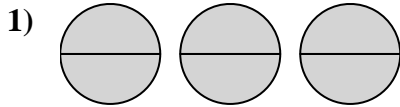
13. \_\_\_\_\_



14. \_\_\_\_\_



Schreiben Sie den schattierten Betrag als Bruch.

**Antworten**

1.  $\frac{6}{2}$

2.  $\frac{6}{1}$

3.  $\frac{8}{1}$

4.  $\frac{4}{1}$

5.  $\frac{16}{2}$

6.  $\frac{2}{1}$

7.  $\frac{24}{3}$

8.  $\frac{18}{2}$

9.  $\frac{27}{3}$

10.  $\frac{9}{3}$

11.  $\frac{12}{2}$

12.  $\frac{21}{3}$

13.  $\frac{3}{1}$

14.  $\frac{6}{3}$