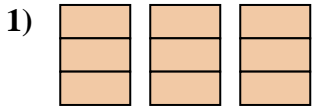


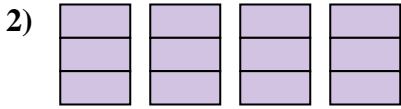


Schreiben Sie den schattierten Betrag als Bruch.

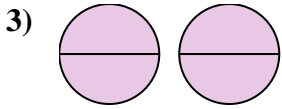
Antworten



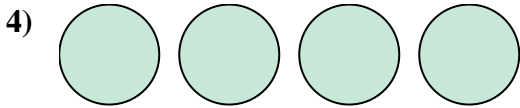
1. _____



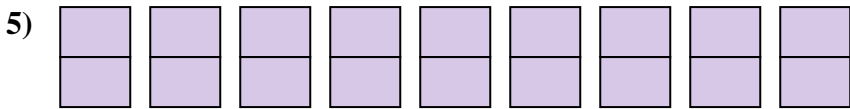
2. _____




3. _____



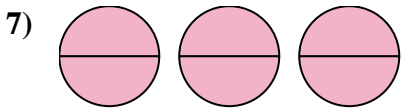
4. _____



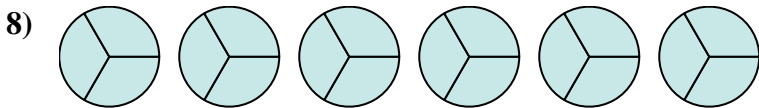
5. _____



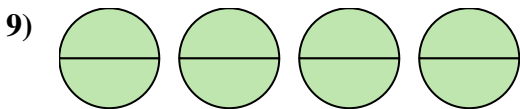
6. _____




7. _____



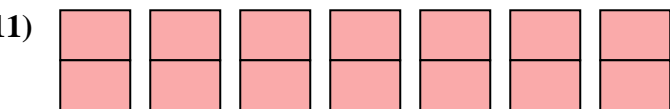
8. _____



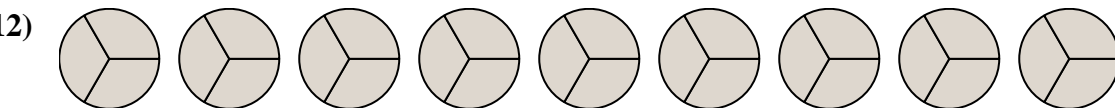
9. _____



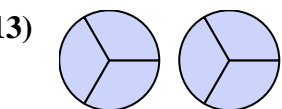
10. _____



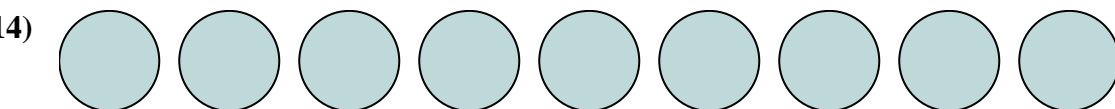
11. _____



12. _____



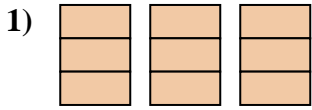
13. _____



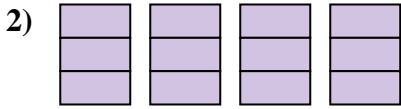
14. _____



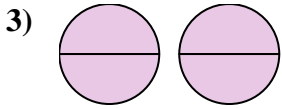
Schreiben Sie den schattierten Betrag als Bruch.

Antworten

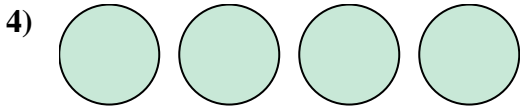
1. $\frac{9}{3}$



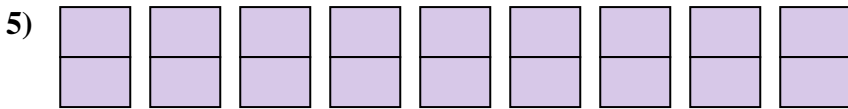
2. $\frac{12}{3}$




3. $\frac{4}{2}$



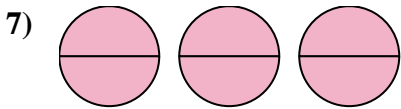
4. $\frac{4}{1}$



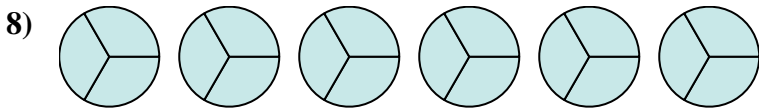
5. $\frac{18}{2}$



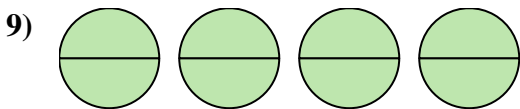
6. $\frac{6}{1}$



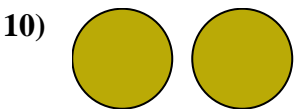
7. $\frac{6}{2}$



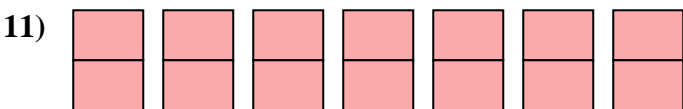
8. $\frac{18}{3}$



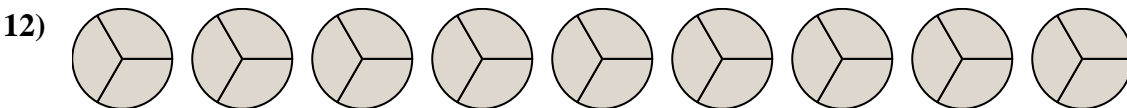
9. $\frac{8}{2}$



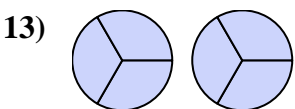
10. $\frac{2}{1}$



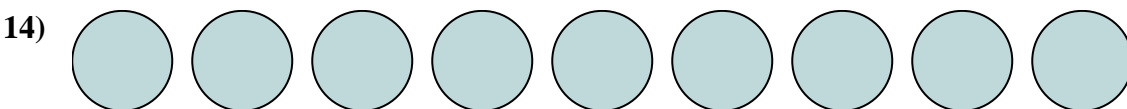
11. $\frac{14}{2}$



12. $\frac{27}{3}$



13. $\frac{6}{3}$



14. $\frac{9}{1}$