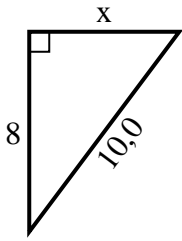


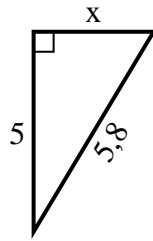


Finden Sie den Wert von X.

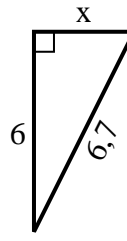
1) Umfang = 24 u



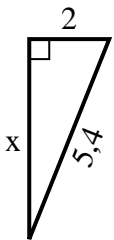
2) Umfang = 13,8 u



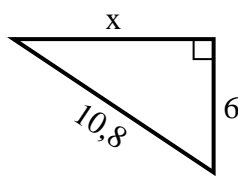
3) Umfang = 15,7 u



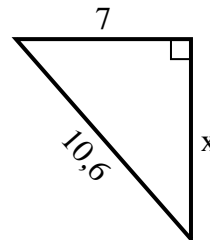
4) Umfang = 12,4 u



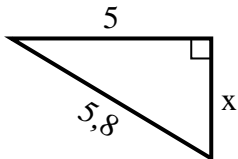
5) Umfang = 25,8 u



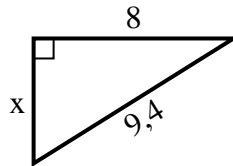
6) Umfang = 25,6 u



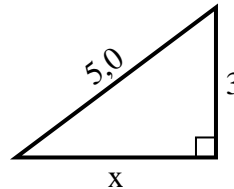
7) Umfang = 13,8 u



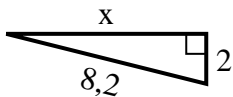
8) Umfang = 22,4 u



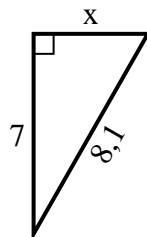
9) Umfang = 12 u



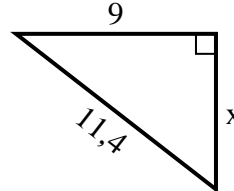
10) Umfang = 18,2 u



11) Umfang = 19,1 u



12) Umfang = 27,4 u

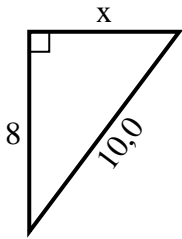


Antworten

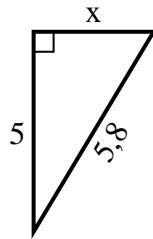
1. _____
2. _____
3. _____
4. _____
5. _____
6. _____
7. _____
8. _____
9. _____
10. _____
11. _____
12. _____

**Finden Sie den Wert von X.**

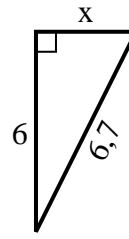
1) Umfang = 24 u



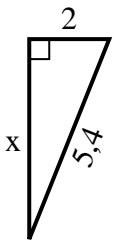
2) Umfang = 13,8 u



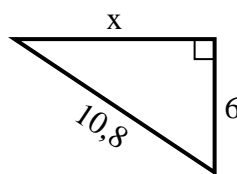
3) Umfang = 15,7 u



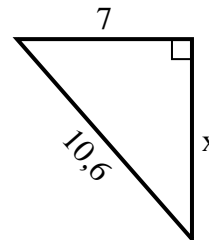
4) Umfang = 12,4 u



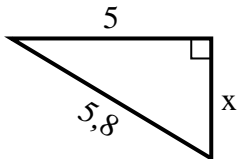
5) Umfang = 25,8 u



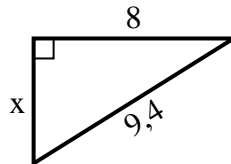
6) Umfang = 25,6 u



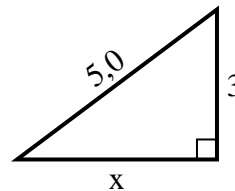
7) Umfang = 13,8 u



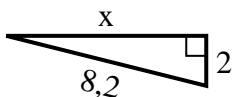
8) Umfang = 22,4 u



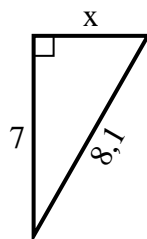
9) Umfang = 12 u



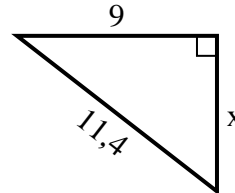
10) Umfang = 18,2 u



11) Umfang = 19,1 u



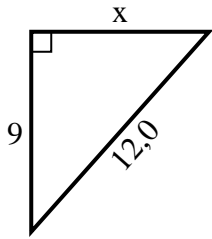
12) Umfang = 27,4 u

**Antworten**1. 62. 33. 34. 55. 96. 87. 38. 59. 410. 811. 412. 7

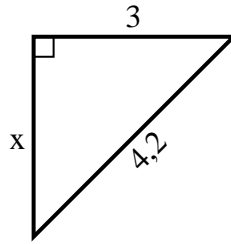


Finden Sie den Wert von X.

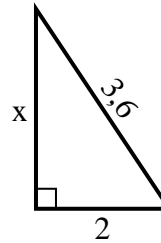
1) Umfang = 29 u



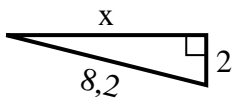
2) Umfang = 10,2 u



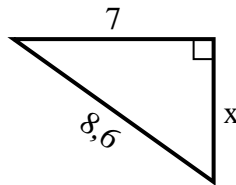
3) Umfang = 8,6 u



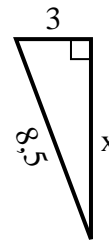
4) Umfang = 18,2 u



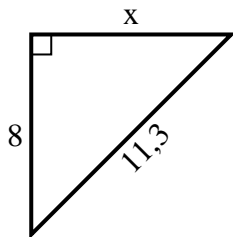
5) Umfang = 20,6 u



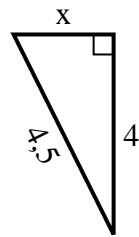
6) Umfang = 19,5 u



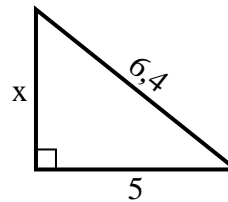
7) Umfang = 27,3 u



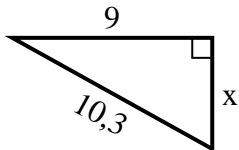
8) Umfang = 10,5 u



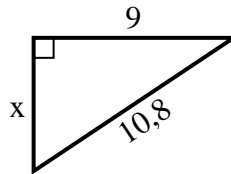
9) Umfang = 15,4 u



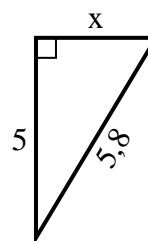
10) Umfang = 24,3 u



11) Umfang = 25,8 u



12) Umfang = 13,8 u

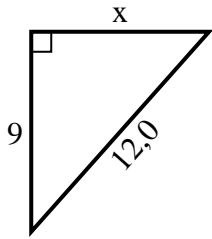


Antworten

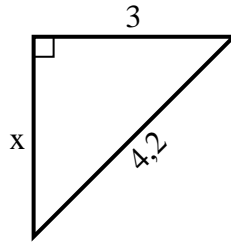
1. _____
2. _____
3. _____
4. _____
5. _____
6. _____
7. _____
8. _____
9. _____
10. _____
11. _____
12. _____

**Finden Sie den Wert von X.****Antworten**

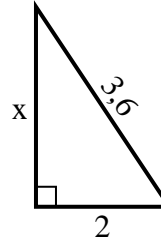
1) Umfang = 29 u



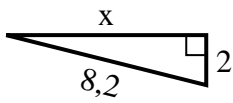
2) Umfang = 10,2 u



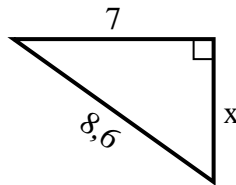
3) Umfang = 8,6 u



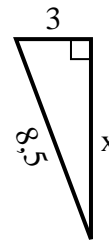
4) Umfang = 18,2 u



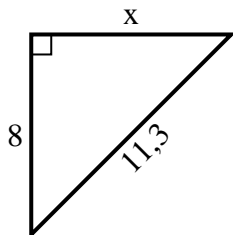
5) Umfang = 20,6 u



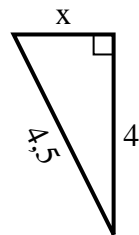
6) Umfang = 19,5 u



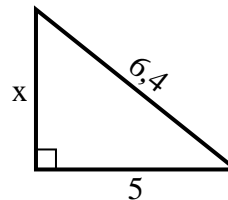
7) Umfang = 27,3 u



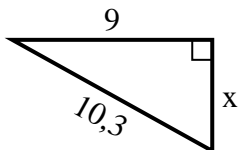
8) Umfang = 10,5 u



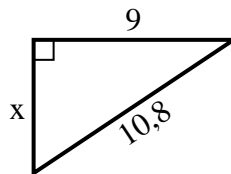
9) Umfang = 15,4 u



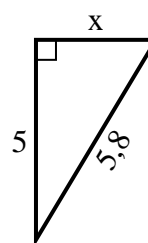
10) Umfang = 24,3 u



11) Umfang = 25,8 u



12) Umfang = 13,8 u

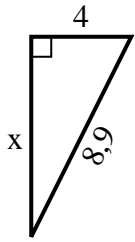


1. 8
2. 3
3. 3
4. 8
5. 5
6. 8
7. 8
8. 2
9. 4
10. 5
11. 6
12. 3

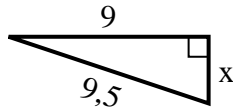


Finden Sie den Wert von X.

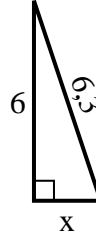
1) Umfang = 20,9 u



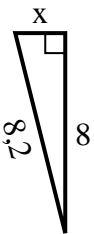
2) Umfang = 21,5 u



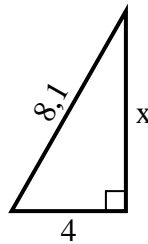
3) Umfang = 14,3 u



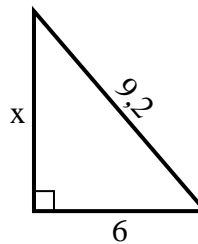
4) Umfang = 18,2 u



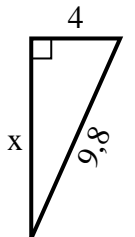
5) Umfang = 19,1 u



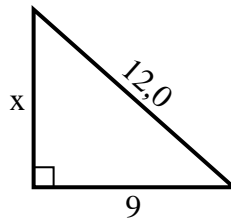
6) Umfang = 22,2 u



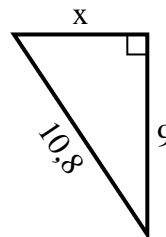
7) Umfang = 22,8 u



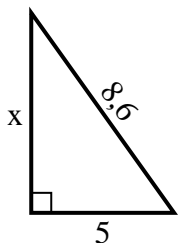
8) Umfang = 29 u



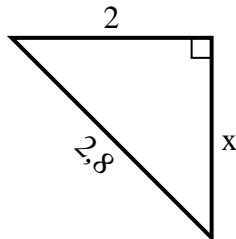
9) Umfang = 25,8 u



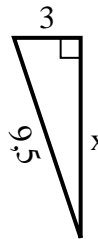
10) Umfang = 20,6 u



11) Umfang = 6,8 u



12) Umfang = 21,5 u

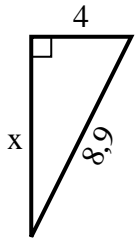


Antworten

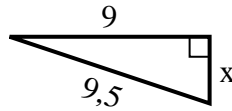
1. _____
2. _____
3. _____
4. _____
5. _____
6. _____
7. _____
8. _____
9. _____
10. _____
11. _____
12. _____

**Finden Sie den Wert von X.****Antworten**

1) Umfang = 20,9 u



2) Umfang = 21,5 u



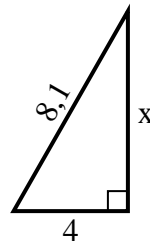
3) Umfang = 14,3 u



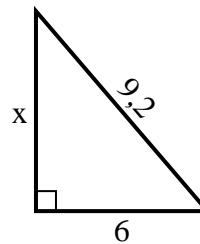
4) Umfang = 18,2 u



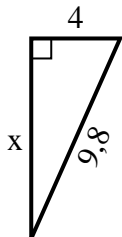
5) Umfang = 19,1 u



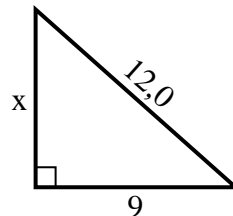
6) Umfang = 22,2 u



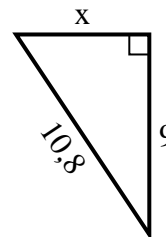
7) Umfang = 22,8 u



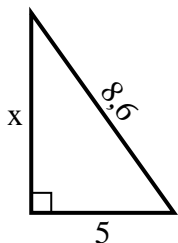
8) Umfang = 29 u



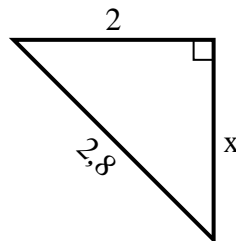
9) Umfang = 25,8 u



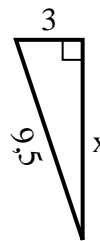
10) Umfang = 20,6 u



11) Umfang = 6,8 u



12) Umfang = 21,5 u

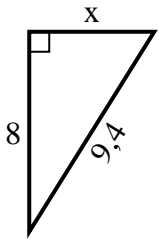


1. 8
2. 3
3. 2
4. 2
5. 7
6. 7
7. 9
8. 8
9. 6
10. 7
11. 2
12. 9

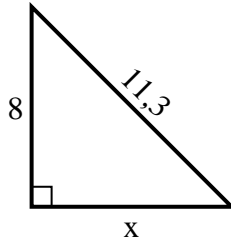


Finden Sie den Wert von X.

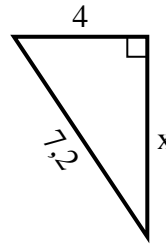
1) Umfang = 22,4 u



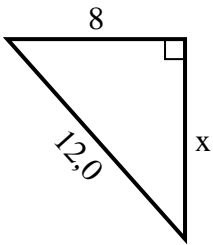
2) Umfang = 27,3 u



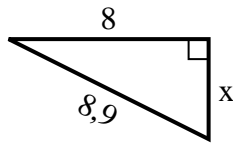
3) Umfang = 17,2 u



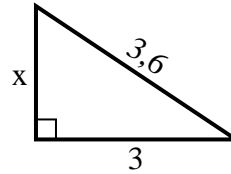
4) Umfang = 29 u



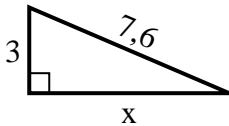
5) Umfang = 20,9 u



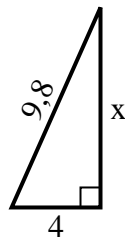
6) Umfang = 8,6 u



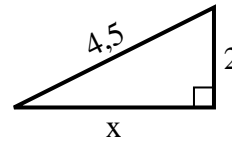
7) Umfang = 17,6 u



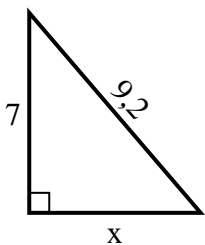
8) Umfang = 22,8 u



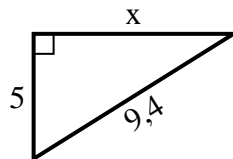
9) Umfang = 10,5 u



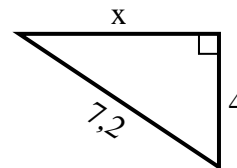
10) Umfang = 22,2 u



11) Umfang = 22,4 u



12) Umfang = 17,2 u

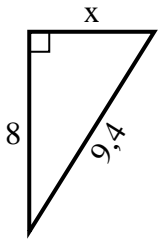


Antworten

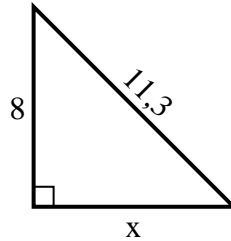
1. _____
2. _____
3. _____
4. _____
5. _____
6. _____
7. _____
8. _____
9. _____
10. _____
11. _____
12. _____

**Finden Sie den Wert von X.**

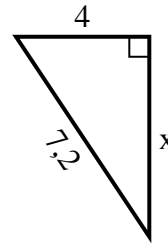
1) Umfang = 22,4 u



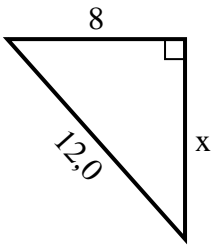
2) Umfang = 27,3 u



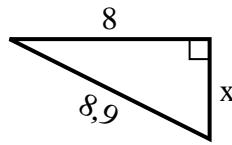
3) Umfang = 17,2 u



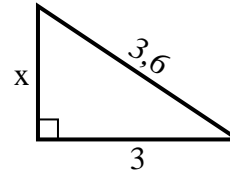
4) Umfang = 29 u



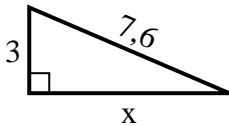
5) Umfang = 20,9 u



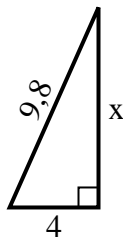
6) Umfang = 8,6 u



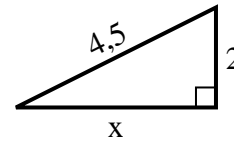
7) Umfang = 17,6 u



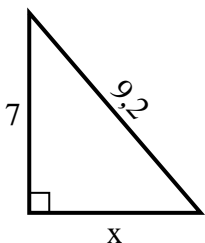
8) Umfang = 22,8 u



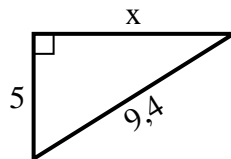
9) Umfang = 10,5 u



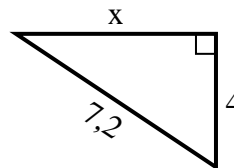
10) Umfang = 22,2 u



11) Umfang = 22,4 u



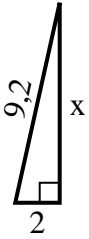
12) Umfang = 17,2 u

**Antworten**1. **5**2. **8**3. **6**4. **9**5. **4**6. **2**7. **7**8. **9**9. **4**10. **6**11. **8**12. **6**

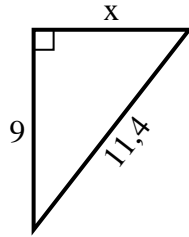


Finden Sie den Wert von X.

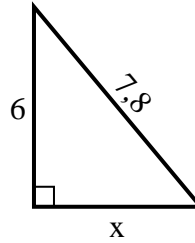
1) Umfang = 20,2 u



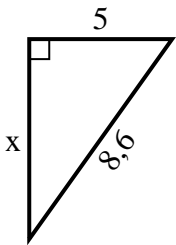
2) Umfang = 27,4 u



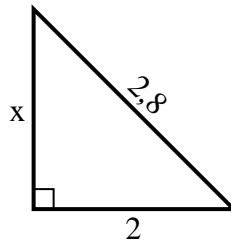
3) Umfang = 18,8 u



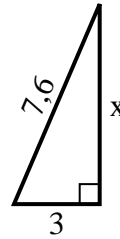
4) Umfang = 20,6 u



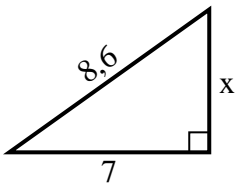
5) Umfang = 6,8 u



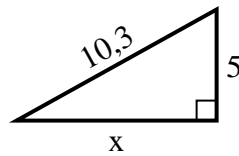
6) Umfang = 17,6 u



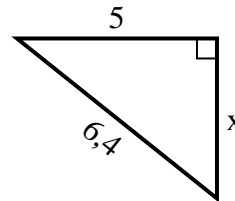
7) Umfang = 20,6 u



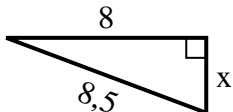
8) Umfang = 24,3 u



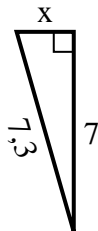
9) Umfang = 15,4 u



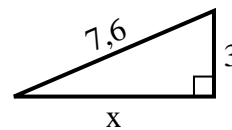
10) Umfang = 19,5 u



11) Umfang = 16,3 u



12) Umfang = 17,6 u

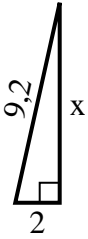


Antworten

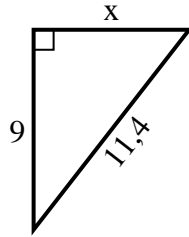
1. _____
2. _____
3. _____
4. _____
5. _____
6. _____
7. _____
8. _____
9. _____
10. _____
11. _____
12. _____

**Finden Sie den Wert von X.**

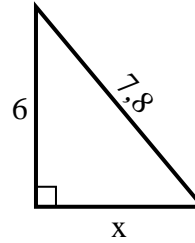
1) Umfang = 20,2 u



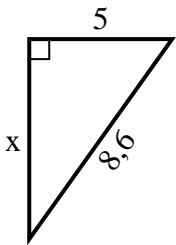
2) Umfang = 27,4 u



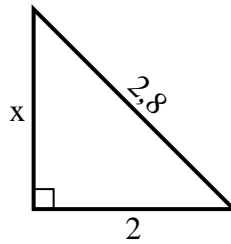
3) Umfang = 18,8 u



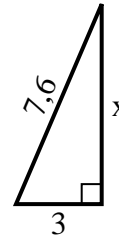
4) Umfang = 20,6 u



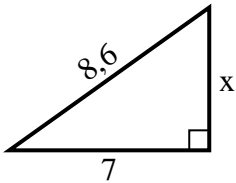
5) Umfang = 6,8 u



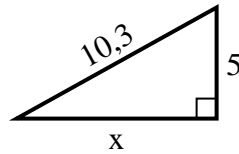
6) Umfang = 17,6 u



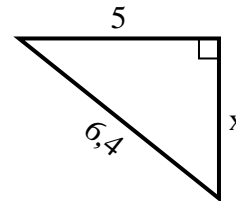
7) Umfang = 20,6 u



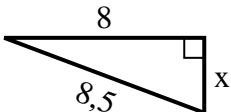
8) Umfang = 24,3 u



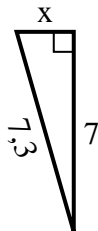
9) Umfang = 15,4 u



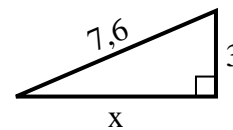
10) Umfang = 19,5 u



11) Umfang = 16,3 u



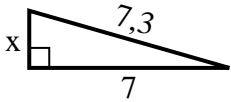
12) Umfang = 17,6 u

**Antworten**1. **9**2. **7**3. **5**4. **7**5. **2**6. **7**7. **5**8. **9**9. **4**10. **3**11. **2**12. **7**

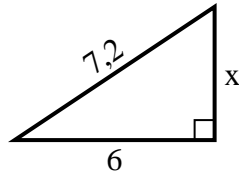


Finden Sie den Wert von X.

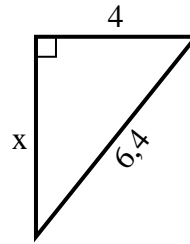
1) Umfang = 16,3 u



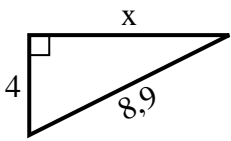
2) Umfang = 17,2 u



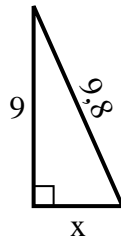
3) Umfang = 15,4 u



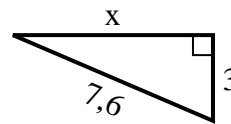
4) Umfang = 20,9 u



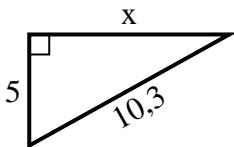
5) Umfang = 22,8 u



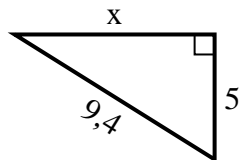
6) Umfang = 17,6 u



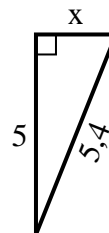
7) Umfang = 24,3 u



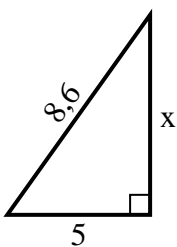
8) Umfang = 22,4 u



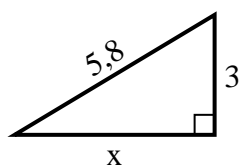
9) Umfang = 12,4 u



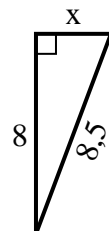
10) Umfang = 20,6 u



11) Umfang = 13,8 u



12) Umfang = 19,5 u

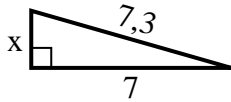


Antworten

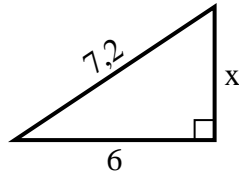
1. _____
2. _____
3. _____
4. _____
5. _____
6. _____
7. _____
8. _____
9. _____
10. _____
11. _____
12. _____

**Finden Sie den Wert von X.**

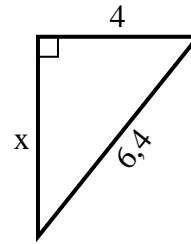
1) Umfang = 16,3 u



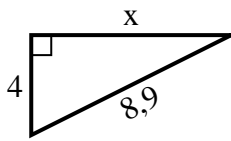
2) Umfang = 17,2 u



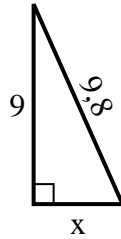
3) Umfang = 15,4 u



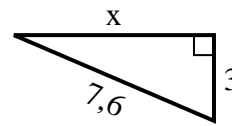
4) Umfang = 20,9 u



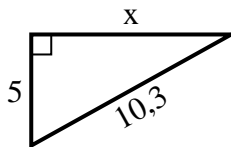
5) Umfang = 22,8 u



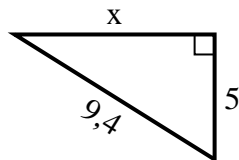
6) Umfang = 17,6 u



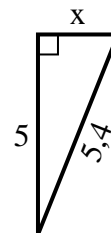
7) Umfang = 24,3 u



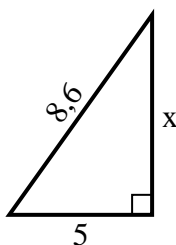
8) Umfang = 22,4 u



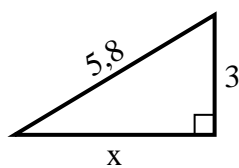
9) Umfang = 12,4 u



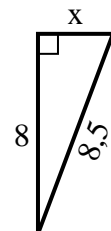
10) Umfang = 20,6 u



11) Umfang = 13,8 u



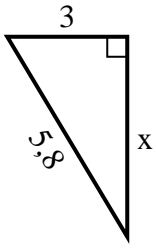
12) Umfang = 19,5 u

**Antworten**1. 22. 43. 54. 85. 46. 77. 98. 89. 210. 711. 512. 3

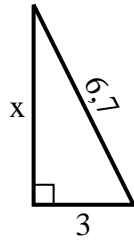


Finden Sie den Wert von X.

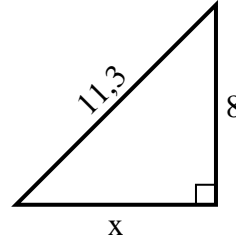
1) Umfang = 13,8 u



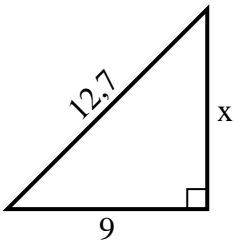
2) Umfang = 15,7 u



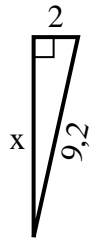
3) Umfang = 27,3 u



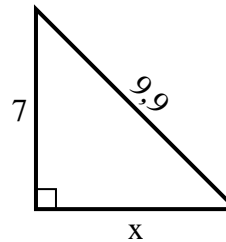
4) Umfang = 30,7 u



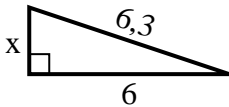
5) Umfang = 20,2 u



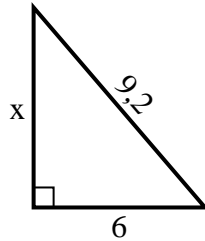
6) Umfang = 23,9 u



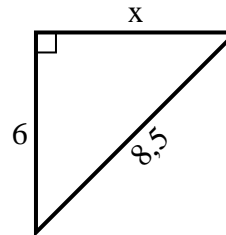
7) Umfang = 14,3 u



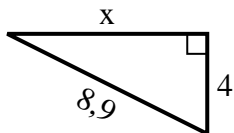
8) Umfang = 22,2 u



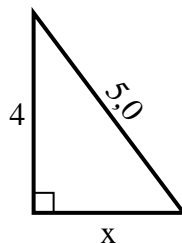
9) Umfang = 20,5 u



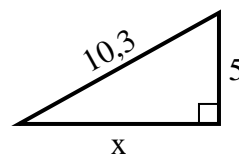
10) Umfang = 20,9 u



11) Umfang = 12 u



12) Umfang = 24,3 u

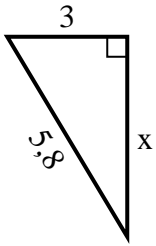


Antworten

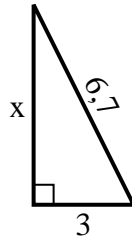
1. _____
2. _____
3. _____
4. _____
5. _____
6. _____
7. _____
8. _____
9. _____
10. _____
11. _____
12. _____

**Finden Sie den Wert von X.**

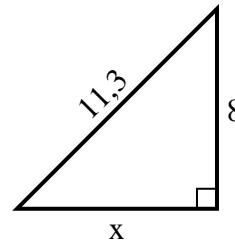
1) Umfang = 13,8 u



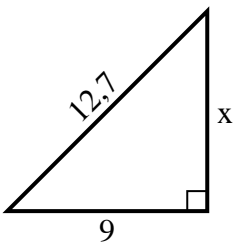
2) Umfang = 15,7 u



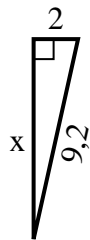
3) Umfang = 27,3 u



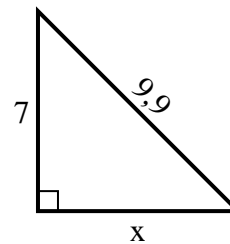
4) Umfang = 30,7 u



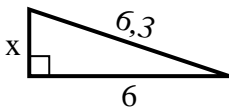
5) Umfang = 20,2 u



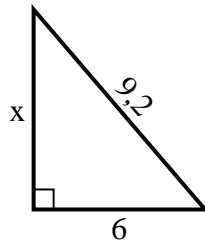
6) Umfang = 23,9 u



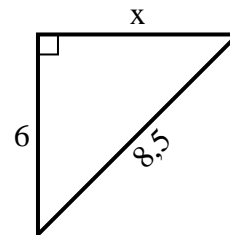
7) Umfang = 14,3 u



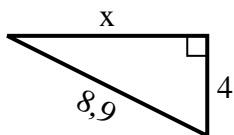
8) Umfang = 22,2 u



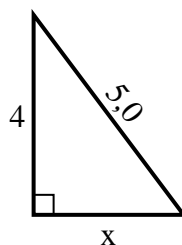
9) Umfang = 20,5 u



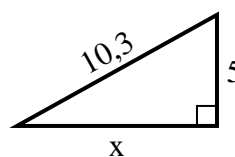
10) Umfang = 20,9 u



11) Umfang = 12 u



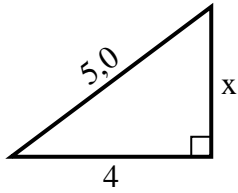
12) Umfang = 24,3 u

**Antworten**1. 52. 63. 84. 95. 96. 77. 28. 79. 610. 811. 312. 9

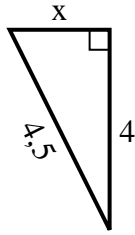


Finden Sie den Wert von X.

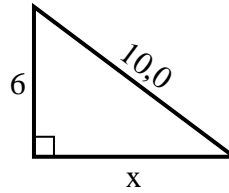
1) Umfang = 12 u



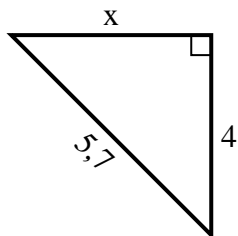
2) Umfang = 10,5 u



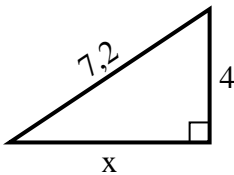
3) Umfang = 24 u



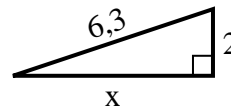
4) Umfang = 13,7 u



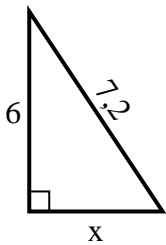
5) Umfang = 17,2 u



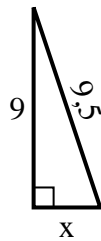
6) Umfang = 14,3 u



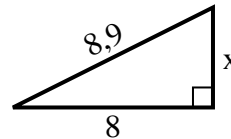
7) Umfang = 17,2 u



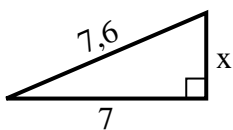
8) Umfang = 21,5 u



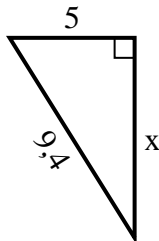
9) Umfang = 20,9 u



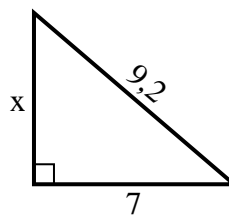
10) Umfang = 17,6 u



11) Umfang = 22,4 u



12) Umfang = 22,2 u



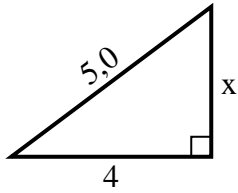
Antworten

1. _____
2. _____
3. _____
4. _____
5. _____
6. _____
7. _____
8. _____
9. _____
10. _____
11. _____
12. _____

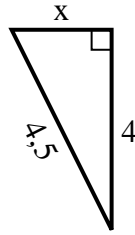


Finden Sie den Wert von X.

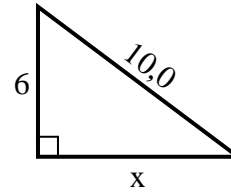
1) Umfang = 12 u



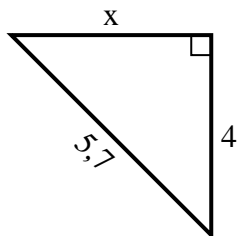
2) Umfang = 10,5 u



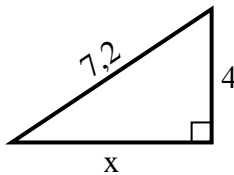
3) Umfang = 24 u



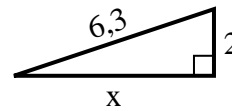
4) Umfang = 13,7 u



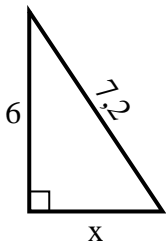
5) Umfang = 17,2 u



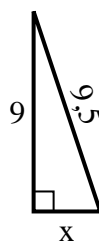
6) Umfang = 14,3 u



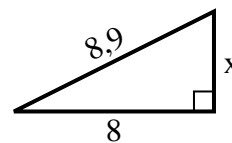
7) Umfang = 17,2 u



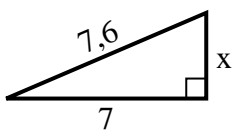
8) Umfang = 21,5 u



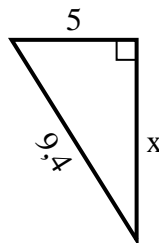
9) Umfang = 20,9 u



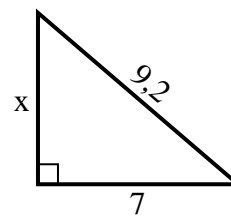
10) Umfang = 17,6 u



11) Umfang = 22,4 u



12) Umfang = 22,2 u



Antworten

1. 3

2. 2

3. 8

4. 4

5. 6

6. 6

7. 4

8. 3

9. 4

10. 3

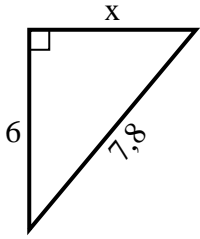
11. 8

12. 6

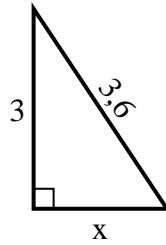


Finden Sie den Wert von X.

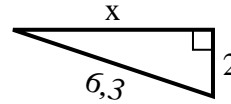
1) Umfang = 18,8 u



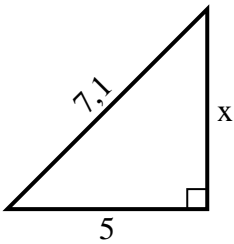
2) Umfang = 8,6 u



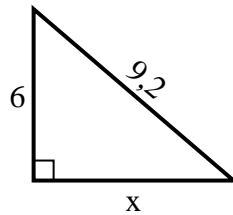
3) Umfang = 14,3 u



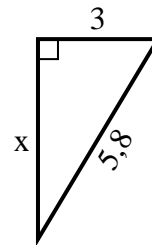
4) Umfang = 17,1 u



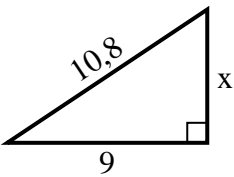
5) Umfang = 22,2 u



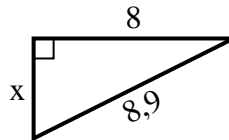
6) Umfang = 13,8 u



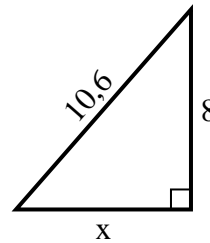
7) Umfang = 25,8 u



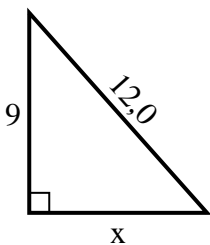
8) Umfang = 20,9 u



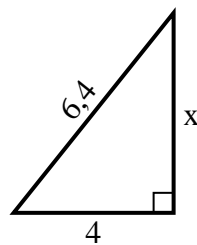
9) Umfang = 25,6 u



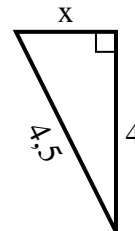
10) Umfang = 29 u



11) Umfang = 15,4 u



12) Umfang = 10,5 u

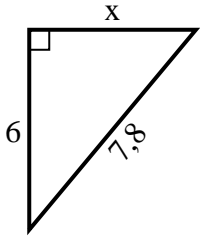


Antworten

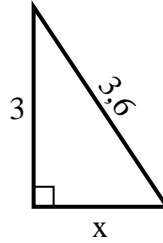
1. _____
2. _____
3. _____
4. _____
5. _____
6. _____
7. _____
8. _____
9. _____
10. _____
11. _____
12. _____

**Finden Sie den Wert von X.**

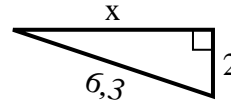
1) Umfang = 18,8 u



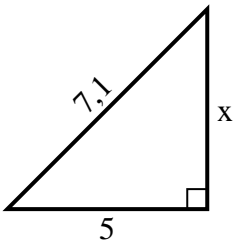
2) Umfang = 8,6 u



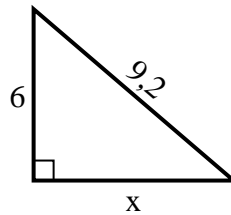
3) Umfang = 14,3 u



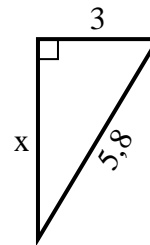
4) Umfang = 17,1 u



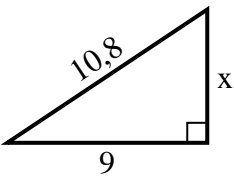
5) Umfang = 22,2 u



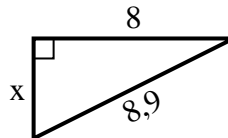
6) Umfang = 13,8 u



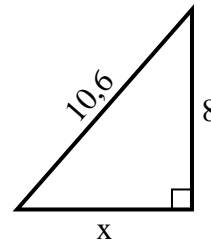
7) Umfang = 25,8 u



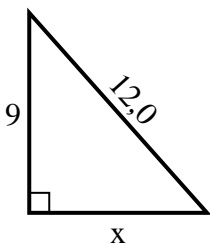
8) Umfang = 20,9 u



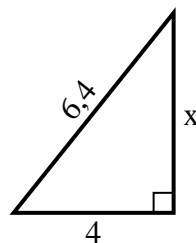
9) Umfang = 25,6 u



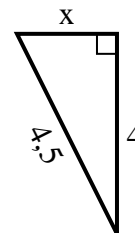
10) Umfang = 29 u



11) Umfang = 15,4 u



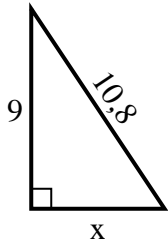
12) Umfang = 10,5 u

**Antworten**1. 52. 23. 64. 55. 76. 57. 68. 49. 710. 811. 512. 2

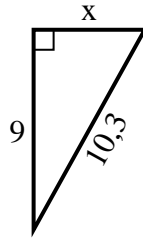


Finden Sie den Wert von X.

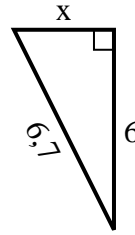
1) Umfang = 25,8 u



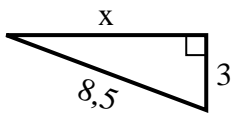
2) Umfang = 24,3 u



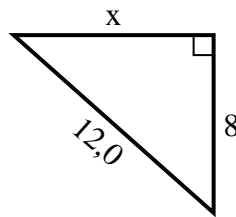
3) Umfang = 15,7 u



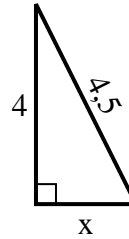
4) Umfang = 19,5 u



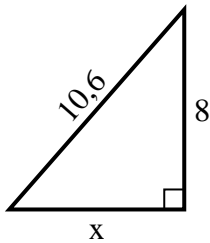
5) Umfang = 29 u



6) Umfang = 10,5 u



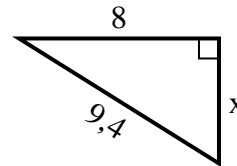
7) Umfang = 25,6 u



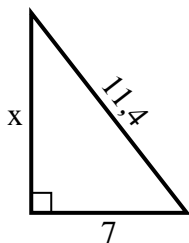
8) Umfang = 14,3 u



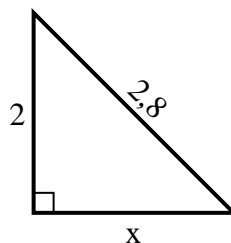
9) Umfang = 22,4 u



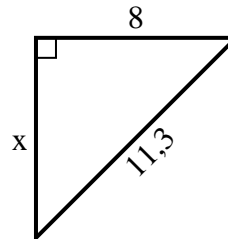
10) Umfang = 27,4 u



11) Umfang = 6,8 u



12) Umfang = 27,3 u

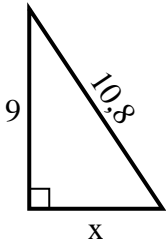


Antworten

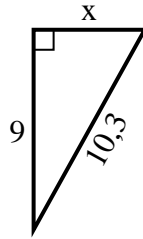
1. _____
2. _____
3. _____
4. _____
5. _____
6. _____
7. _____
8. _____
9. _____
10. _____
11. _____
12. _____

**Finden Sie den Wert von X.****Antworten**

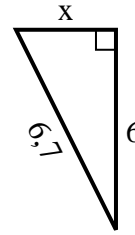
1) Umfang = 25,8 u



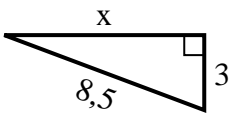
2) Umfang = 24,3 u



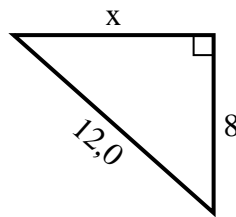
3) Umfang = 15,7 u



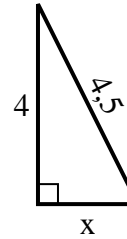
4) Umfang = 19,5 u



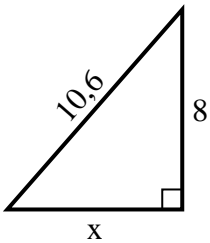
5) Umfang = 29 u



6) Umfang = 10,5 u



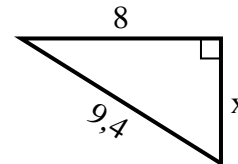
7) Umfang = 25,6 u



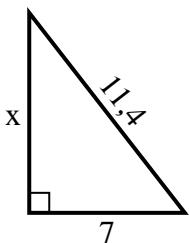
8) Umfang = 14,3 u



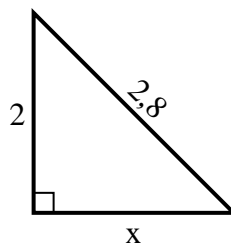
9) Umfang = 22,4 u



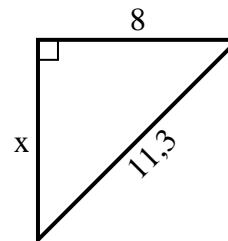
10) Umfang = 27,4 u



11) Umfang = 6,8 u



12) Umfang = 27,3 u

1. 62. 53. 34. 85. 96. 27. 78. 29. 510. 911. 212. 8