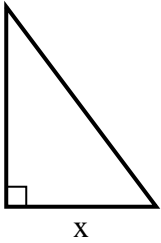


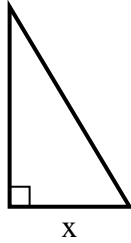


Finden Sie den Wert von X.

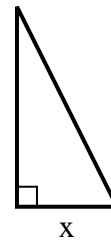
1) area = 24 u^2



2) area = 7.5 u^2



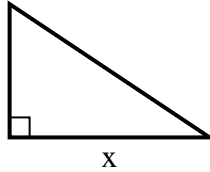
3) area = 9 u^2



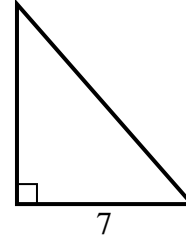
4) area = 5 u^2



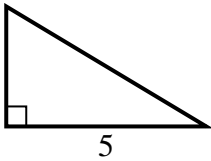
5) area = 27 u^2



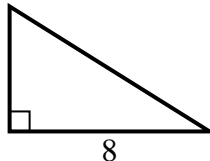
6) area = 28 u^2



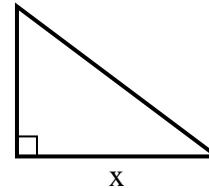
7) area = 7.5 u^2



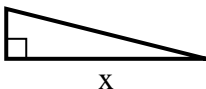
8) area = 20 u^2



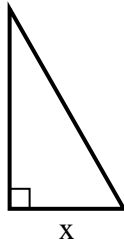
9) area = 6 u^2



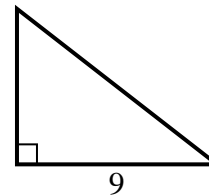
10) area = 8 u^2



11) area = 14 u^2



12) area = 31.5 u^2

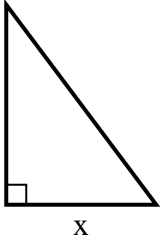


Antworten

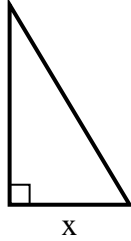
1. _____
2. _____
3. _____
4. _____
5. _____
6. _____
7. _____
8. _____
9. _____
10. _____
11. _____
12. _____

**Finden Sie den Wert von X.**

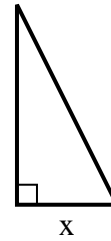
1) area = 24 u^2



2) area = 7.5 u^2



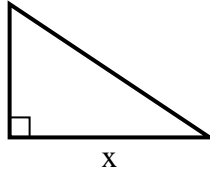
3) area = 9 u^2



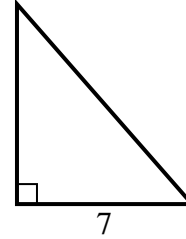
4) area = 5 u^2



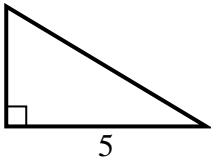
5) area = 27 u^2



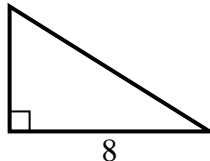
6) area = 28 u^2



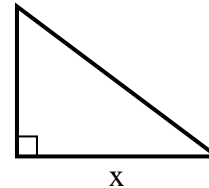
7) area = 7.5 u^2



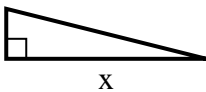
8) area = 20 u^2



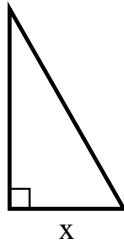
9) area = 6 u^2



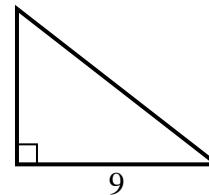
10) area = 8 u^2



11) area = 14 u^2



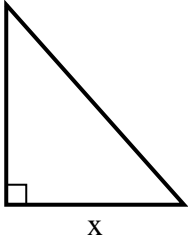
12) area = 31.5 u^2

**Antworten**1. 62. 33. 34. 55. 96. 87. 38. 59. 410. 811. 412. 7

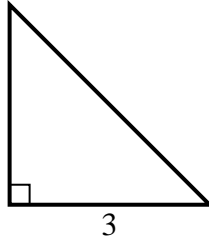


Finden Sie den Wert von X.

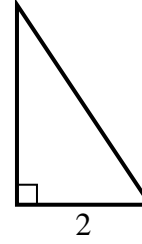
1) area = 36 u^2



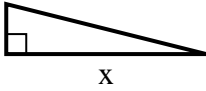
2) area = 4.5 u^2



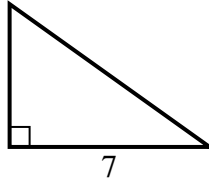
3) area = 3 u^2



4) area = 8 u^2



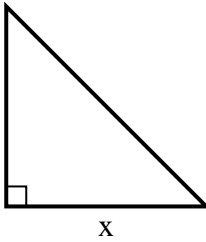
5) area = 17.5 u^2



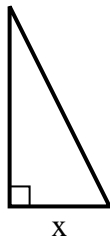
6) area = 12 u^2



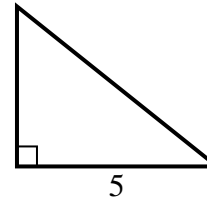
7) area = 32 u^2



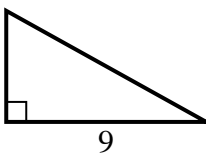
8) area = 4 u^2



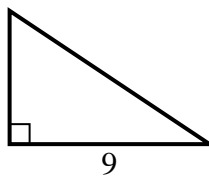
9) area = 10 u^2



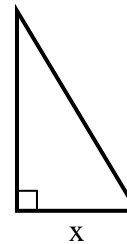
10) area = 22.5 u^2



11) area = 27 u^2



12) area = 7.5 u^2



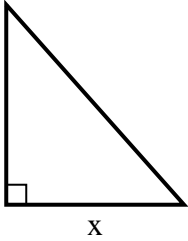
Antworten

1. _____
2. _____
3. _____
4. _____
5. _____
6. _____
7. _____
8. _____
9. _____
10. _____
11. _____
12. _____

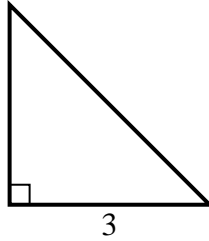


Finden Sie den Wert von X.

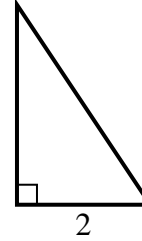
1) area = 36 u^2



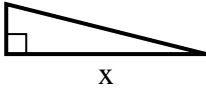
2) area = 4.5 u^2



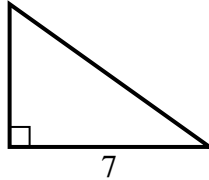
3) area = 3 u^2



4) area = 8 u^2



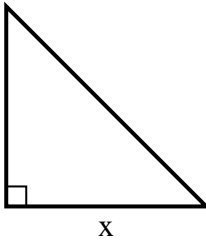
5) area = 17.5 u^2



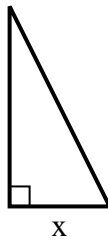
6) area = 12 u^2



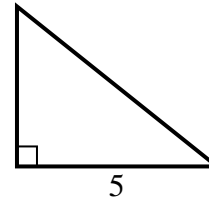
7) area = 32 u^2



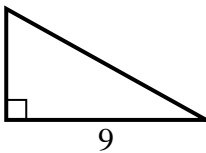
8) area = 4 u^2



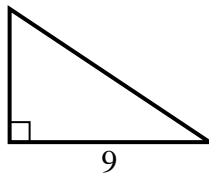
9) area = 10 u^2



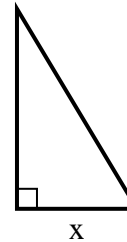
10) area = 22.5 u^2



11) area = 27 u^2



12) area = 7.5 u^2



Antworten

1. 8

2. 3

3. 3

4. 8

5. 5

6. 8

7. 8

8. 2

9. 4

10. 5

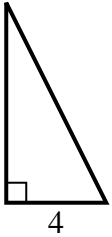
11. 6

12. 3

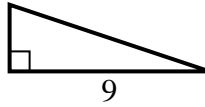


Finden Sie den Wert von X.

1) area = 16 u^2



2) area = 13.5 u^2



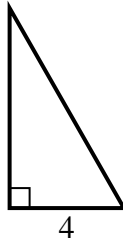
3) area = 6 u^2



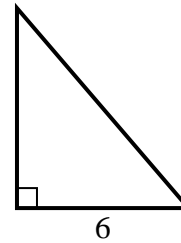
4) area = 8 u^2



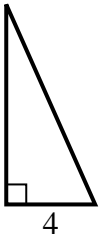
5) area = 14 u^2



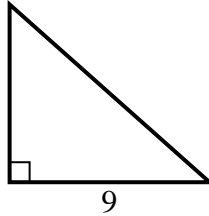
6) area = 21 u^2



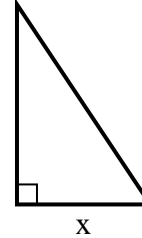
7) area = 18 u^2



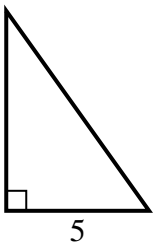
8) area = 36 u^2



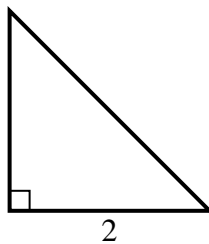
9) area = 27 u^2



10) area = 17.5 u^2



11) area = 2 u^2



12) area = 13.5 u^2



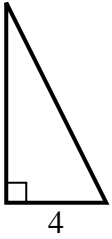
Antworten

1. _____
2. _____
3. _____
4. _____
5. _____
6. _____
7. _____
8. _____
9. _____
10. _____
11. _____
12. _____

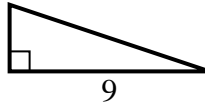


Finden Sie den Wert von X.

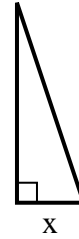
1) area = 16 u^2



2) area = 13.5 u^2



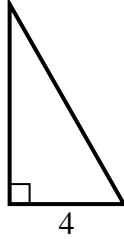
3) area = 6 u^2



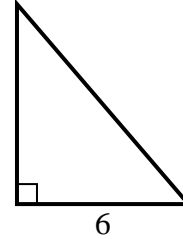
4) area = 8 u^2



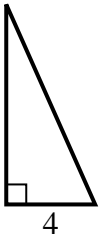
5) area = 14 u^2



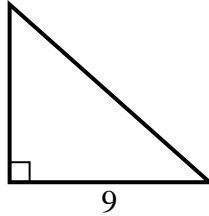
6) area = 21 u^2



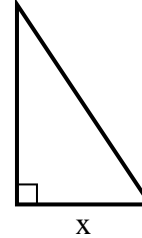
7) area = 18 u^2



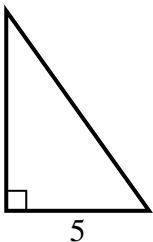
8) area = 36 u^2



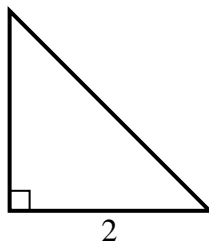
9) area = 27 u^2



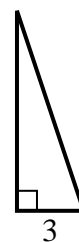
10) area = 17.5 u^2



11) area = 2 u^2



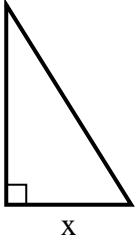
12) area = 13.5 u^2

**Antworten**1. 82. 33. 24. 25. 76. 77. 98. 89. 610. 711. 212. 9

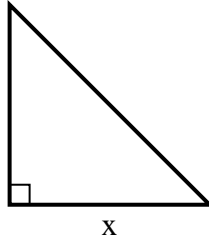


Finden Sie den Wert von X.

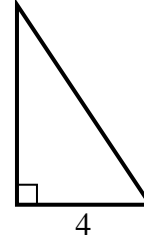
1) area = 20 u^2



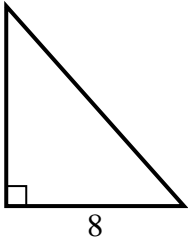
2) area = 32 u^2



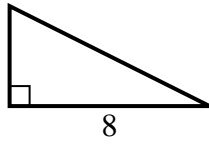
3) area = 12 u^2



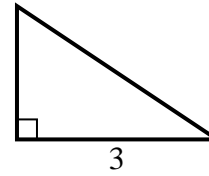
4) area = 36 u^2



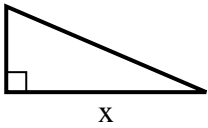
5) area = 16 u^2



6) area = 3 u^2



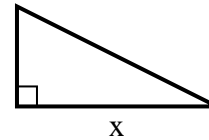
7) area = 10.5 u^2



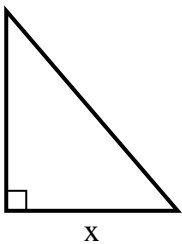
8) area = 18 u^2



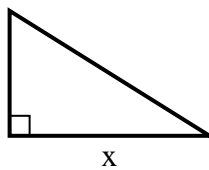
9) area = 4 u^2



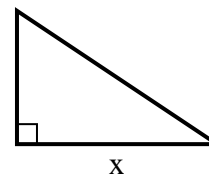
10) area = 21 u^2



11) area = 20 u^2



12) area = 12 u^2



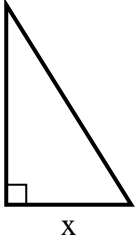
Antworten

1. _____
2. _____
3. _____
4. _____
5. _____
6. _____
7. _____
8. _____
9. _____
10. _____
11. _____
12. _____

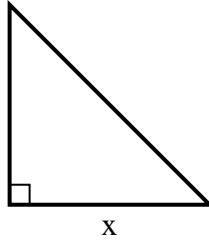


Finden Sie den Wert von X.

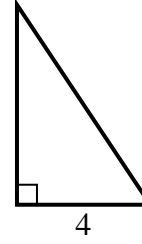
1) area = 20 u^2



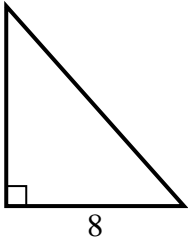
2) area = 32 u^2



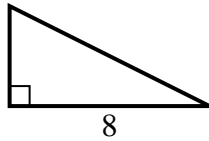
3) area = 12 u^2



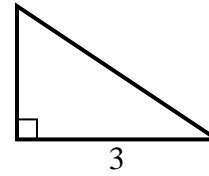
4) area = 36 u^2



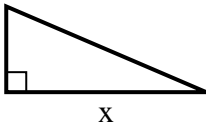
5) area = 16 u^2



6) area = 3 u^2



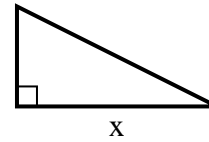
7) area = 10.5 u^2



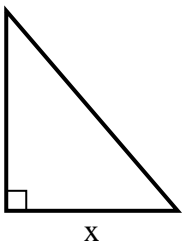
8) area = 18 u^2



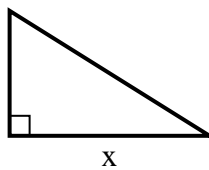
9) area = 4 u^2



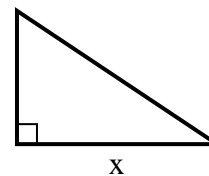
10) area = 21 u^2



11) area = 20 u^2



12) area = 12 u^2

**Antworten**1. 52. 83. 64. 95. 46. 27. 78. 99. 410. 611. 812. 6

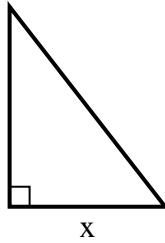


Finden Sie den Wert von X.

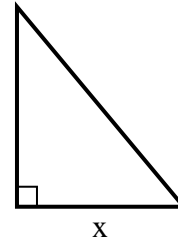
1) area = 9 u^2



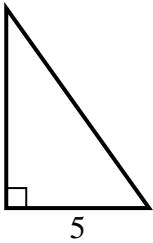
2) area = 31.5 u^2



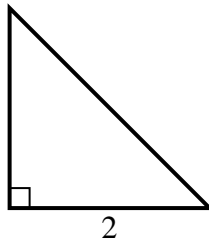
3) area = 15 u^2



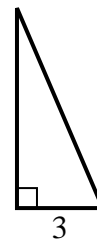
4) area = 17.5 u^2



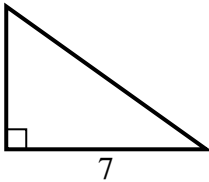
5) area = 2 u^2



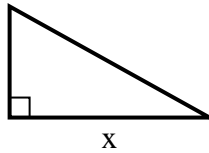
6) area = 10.5 u^2



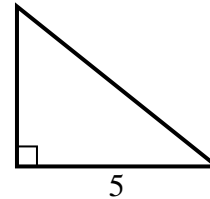
7) area = 17.5 u^2



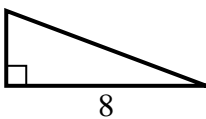
8) area = 22.5 u^2



9) area = 10 u^2



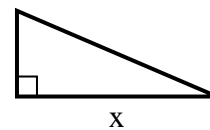
10) area = 12 u^2



11) area = 7 u^2



12) area = 10.5 u^2



Antworten

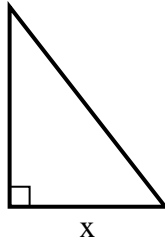
1. _____
2. _____
3. _____
4. _____
5. _____
6. _____
7. _____
8. _____
9. _____
10. _____
11. _____
12. _____

**Finden Sie den Wert von X.**

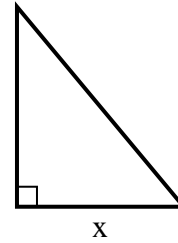
1) area = 9 u^2



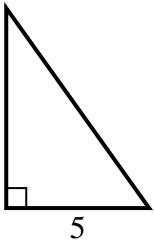
2) area = 31.5 u^2



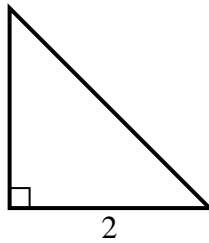
3) area = 15 u^2



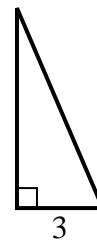
4) area = 17.5 u^2



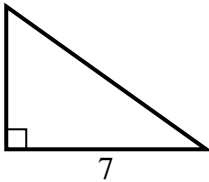
5) area = 2 u^2



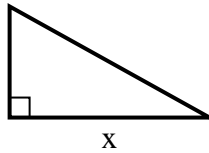
6) area = 10.5 u^2



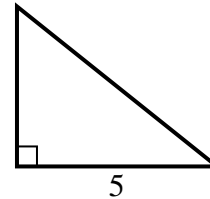
7) area = 17.5 u^2



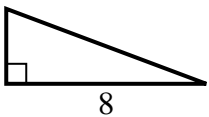
8) area = 22.5 u^2



9) area = 10 u^2



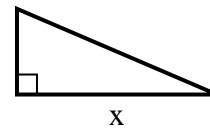
10) area = 12 u^2



11) area = 7 u^2



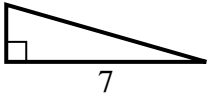
12) area = 10.5 u^2

**Antworten**1. 92. 73. 54. 75. 26. 77. 58. 99. 410. 311. 212. 7

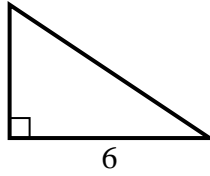


Finden Sie den Wert von X.

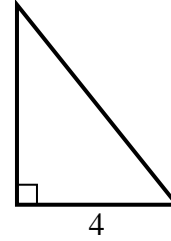
1) area = 7 u^2



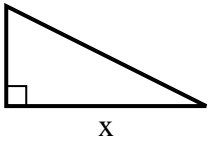
2) area = 12 u^2



3) area = 10 u^2



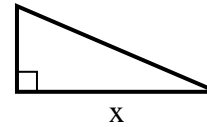
4) area = 16 u^2



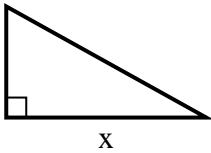
5) area = 18 u^2



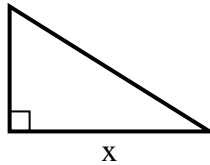
6) area = 10.5 u^2



7) area = 22.5 u^2



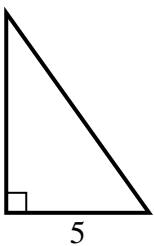
8) area = 20 u^2



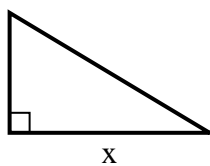
9) area = 5 u^2



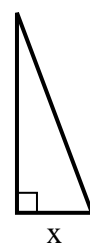
10) area = 17.5 u^2



11) area = 7.5 u^2



12) area = 12 u^2



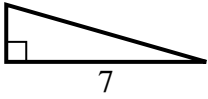
Antworten

1. _____
2. _____
3. _____
4. _____
5. _____
6. _____
7. _____
8. _____
9. _____
10. _____
11. _____
12. _____

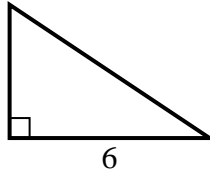


Finden Sie den Wert von X.

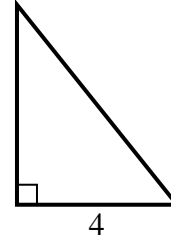
1) $\text{area} = 7 \text{ u}^2$



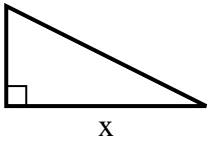
2) $\text{area} = 12 \text{ u}^2$



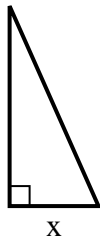
3) $\text{area} = 10 \text{ u}^2$



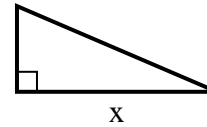
4) $\text{area} = 16 \text{ u}^2$



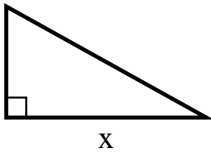
5) $\text{area} = 18 \text{ u}^2$



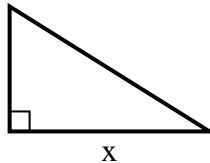
6) $\text{area} = 10.5 \text{ u}^2$



7) $\text{area} = 22.5 \text{ u}^2$



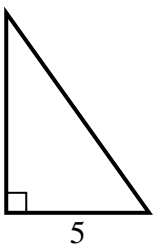
8) $\text{area} = 20 \text{ u}^2$



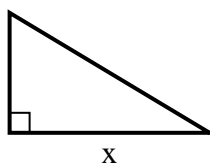
9) $\text{area} = 5 \text{ u}^2$



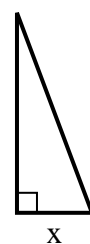
10) $\text{area} = 17.5 \text{ u}^2$



11) $\text{area} = 7.5 \text{ u}^2$



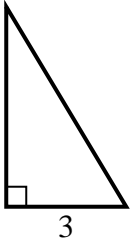
12) $\text{area} = 12 \text{ u}^2$

**Antworten**1. 22. 43. 54. 85. 46. 77. 98. 89. 210. 711. 512. 3

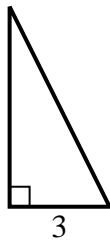


Finden Sie den Wert von X.

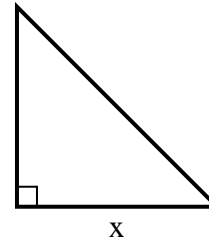
1) area = 7.5 u^2



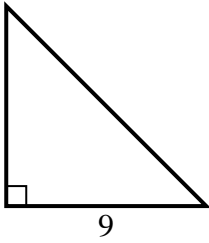
2) area = 9 u^2



3) area = 32 u^2



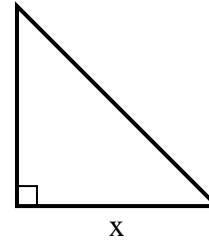
4) area = 40.5 u^2



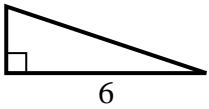
5) area = 9 u^2



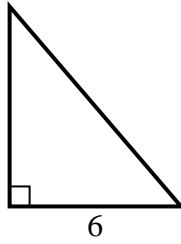
6) area = 24.5 u^2



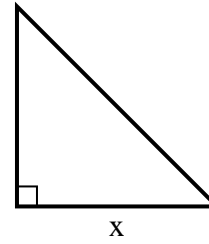
7) area = 6 u^2



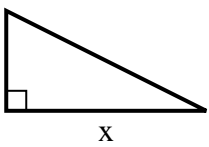
8) area = 21 u^2



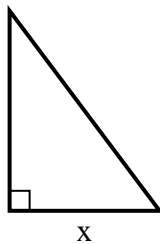
9) area = 18 u^2



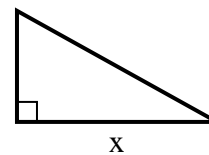
10) area = 16 u^2



11) area = 6 u^2



12) area = 22.5 u^2



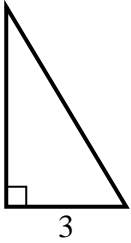
Antworten

1. _____
2. _____
3. _____
4. _____
5. _____
6. _____
7. _____
8. _____
9. _____
10. _____
11. _____
12. _____

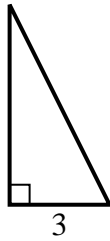


Finden Sie den Wert von X.

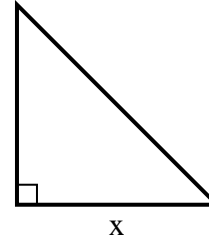
1) area = 7.5 u^2



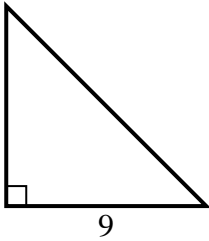
2) area = 9 u^2



3) area = 32 u^2



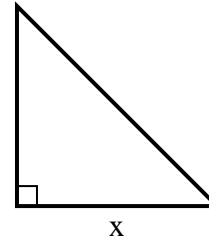
4) area = 40.5 u^2



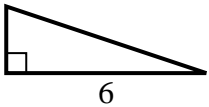
5) area = 9 u^2



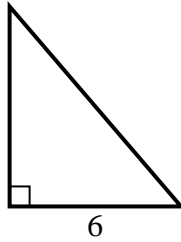
6) area = 24.5 u^2



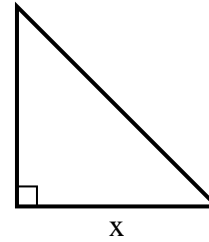
7) area = 6 u^2



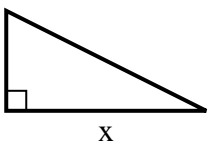
8) area = 21 u^2



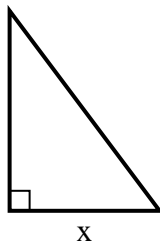
9) area = 18 u^2



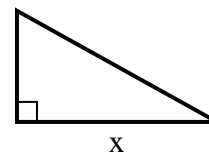
10) area = 16 u^2



11) area = 6 u^2



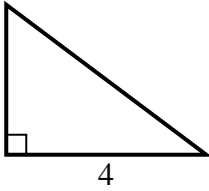
12) area = 22.5 u^2

**Antworten**1. 52. 63. 84. 95. 96. 77. 28. 79. 610. 811. 312. 9

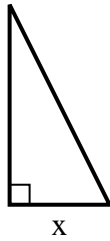


Finden Sie den Wert von X.

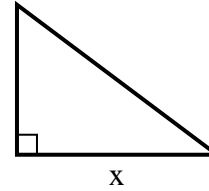
1) area = $6 u^2$



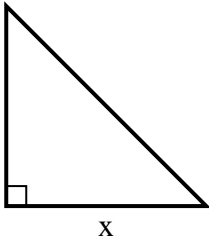
2) area = $4 u^2$



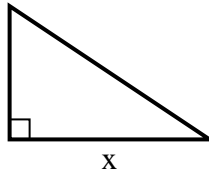
3) area = $24 u^2$



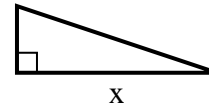
4) area = $8 u^2$



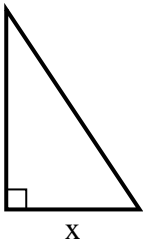
5) area = $12 u^2$



6) area = $6 u^2$



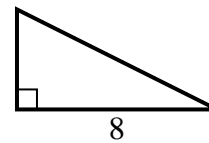
7) area = $12 u^2$



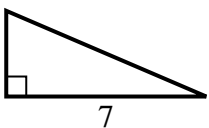
8) area = $13.5 u^2$



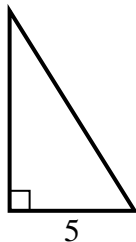
9) area = $16 u^2$



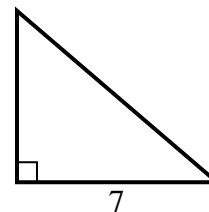
10) area = $10.5 u^2$



11) area = $20 u^2$



12) area = $21 u^2$



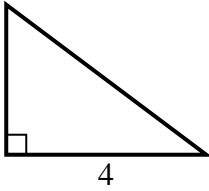
Antworten

1. _____
2. _____
3. _____
4. _____
5. _____
6. _____
7. _____
8. _____
9. _____
10. _____
11. _____
12. _____

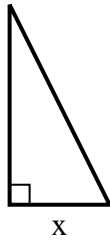


Finden Sie den Wert von X.

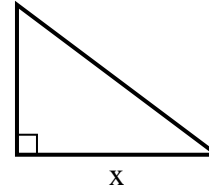
1) area = $6 u^2$



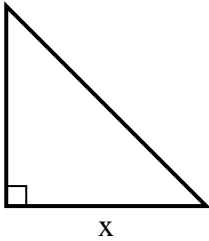
2) area = $4 u^2$



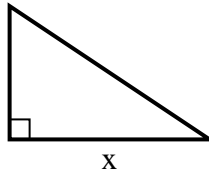
3) area = $24 u^2$



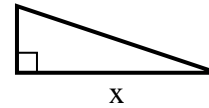
4) area = $8 u^2$



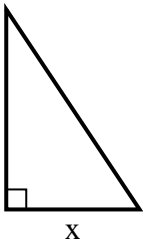
5) area = $12 u^2$



6) area = $6 u^2$



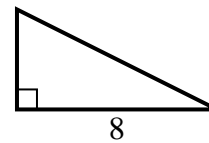
7) area = $12 u^2$



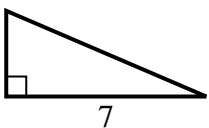
8) area = $13.5 u^2$



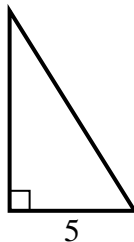
9) area = $16 u^2$



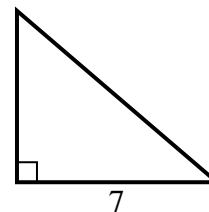
10) area = $10.5 u^2$



11) area = $20 u^2$



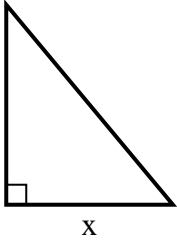
12) area = $21 u^2$

**Antworten**1. 32. 23. 84. 45. 66. 67. 48. 39. 410. 311. 812. 6

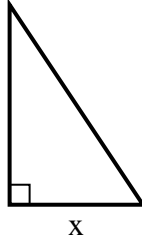


Finden Sie den Wert von X.

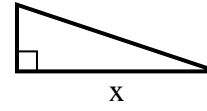
1) area = $15 u^2$



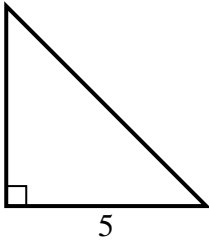
2) area = $3 u^2$



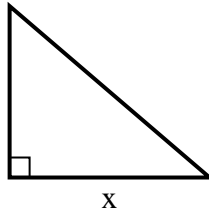
3) area = $6 u^2$



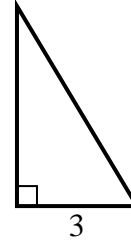
4) area = $12.5 u^2$



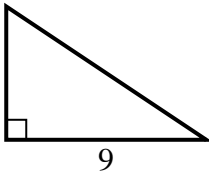
5) area = $21 u^2$



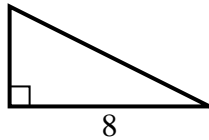
6) area = $7.5 u^2$



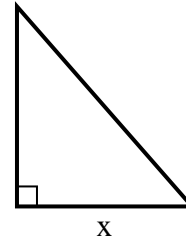
7) area = $27 u^2$



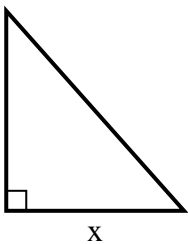
8) area = $16 u^2$



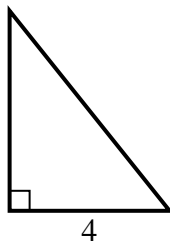
9) area = $28 u^2$



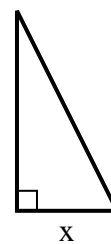
10) area = $36 u^2$



11) area = $10 u^2$



12) area = $4 u^2$

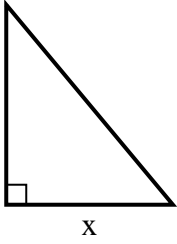


Antworten

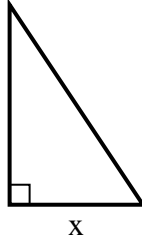
1. _____
2. _____
3. _____
4. _____
5. _____
6. _____
7. _____
8. _____
9. _____
10. _____
11. _____
12. _____

**Finden Sie den Wert von X.**

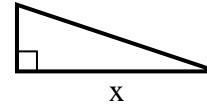
1) area = $15 u^2$



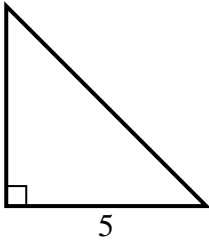
2) area = $3 u^2$



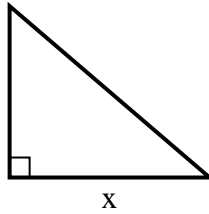
3) area = $6 u^2$



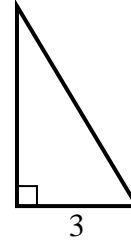
4) area = $12.5 u^2$



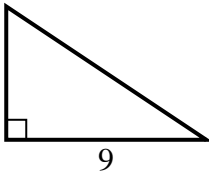
5) area = $21 u^2$



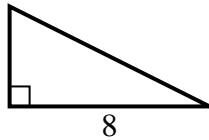
6) area = $7.5 u^2$



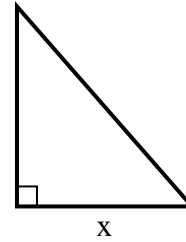
7) area = $27 u^2$



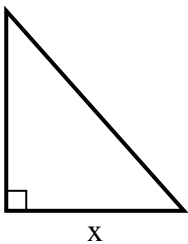
8) area = $16 u^2$



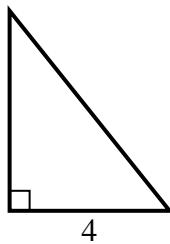
9) area = $28 u^2$



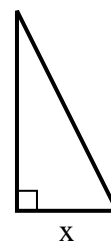
10) area = $36 u^2$



11) area = $10 u^2$



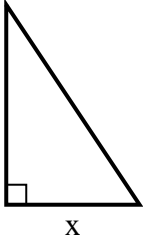
12) area = $4 u^2$

**Antworten**1. 52. 23. 64. 55. 76. 57. 68. 49. 710. 811. 512. 2

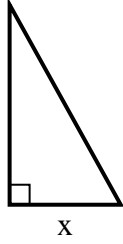


Finden Sie den Wert von X.

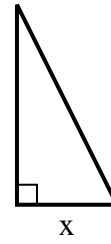
1) area = 27 u^2



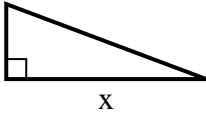
2) area = 22.5 u^2



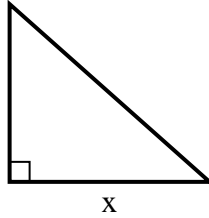
3) area = 9 u^2



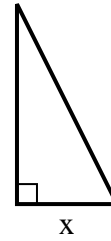
4) area = 12 u^2



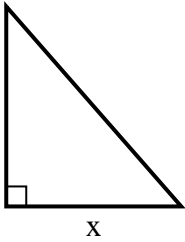
5) area = 36 u^2



6) area = 4 u^2



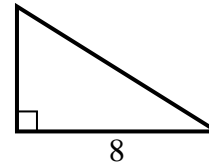
7) area = 28 u^2



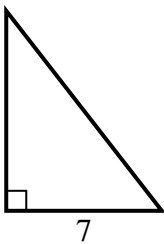
8) area = 6 u^2



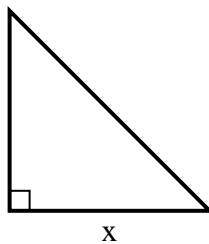
9) area = 20 u^2



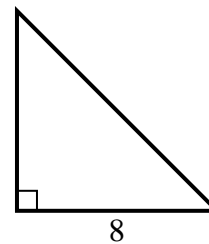
10) area = 31.5 u^2



11) area = 2 u^2



12) area = 32 u^2



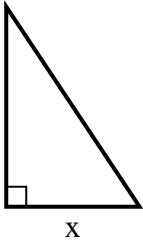
Antworten

1. _____
2. _____
3. _____
4. _____
5. _____
6. _____
7. _____
8. _____
9. _____
10. _____
11. _____
12. _____

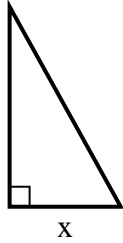


Finden Sie den Wert von X.

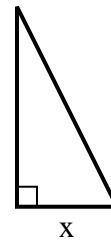
1) area = 27 u^2



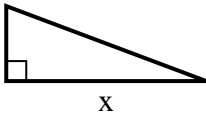
2) area = 22.5 u^2



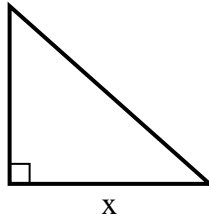
3) area = 9 u^2



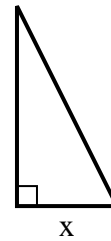
4) area = 12 u^2



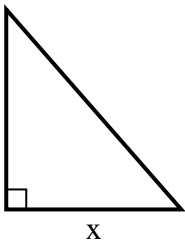
5) area = 36 u^2



6) area = 4 u^2



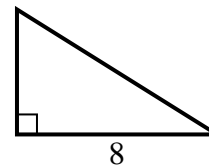
7) area = 28 u^2



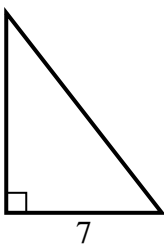
8) area = 6 u^2



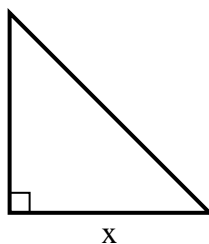
9) area = 20 u^2



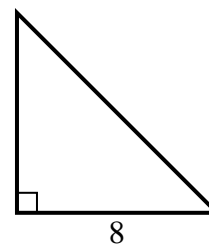
10) area = 31.5 u^2



11) area = 2 u^2



12) area = 32 u^2



Antworten

1. 6

2. 5

3. 3

4. 8

5. 9

6. 2

7. 7

8. 2

9. 5

10. 9

11. 2

12. 8