

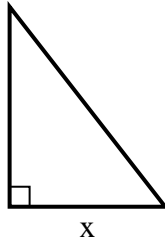


**Finden Sie den Wert von X.**

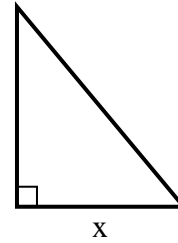
1) area =  $9 \text{ u}^2$



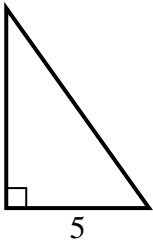
2) area =  $31.5 \text{ u}^2$



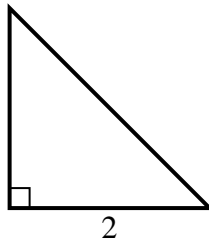
3) area =  $15 \text{ u}^2$



4) area =  $17.5 \text{ u}^2$



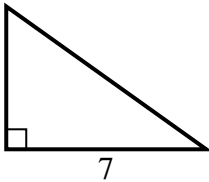
5) area =  $2 \text{ u}^2$



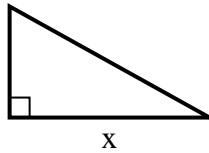
6) area =  $10.5 \text{ u}^2$



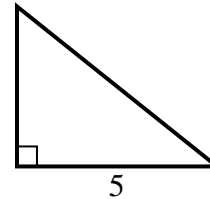
7) area =  $17.5 \text{ u}^2$



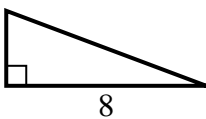
8) area =  $22.5 \text{ u}^2$



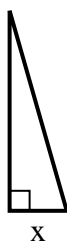
9) area =  $10 \text{ u}^2$



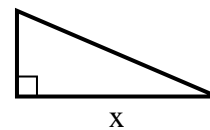
10) area =  $12 \text{ u}^2$



11) area =  $7 \text{ u}^2$



12) area =  $10.5 \text{ u}^2$



**Antworten**

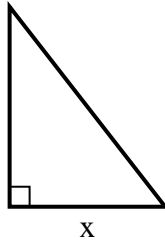
1. \_\_\_\_\_
2. \_\_\_\_\_
3. \_\_\_\_\_
4. \_\_\_\_\_
5. \_\_\_\_\_
6. \_\_\_\_\_
7. \_\_\_\_\_
8. \_\_\_\_\_
9. \_\_\_\_\_
10. \_\_\_\_\_
11. \_\_\_\_\_
12. \_\_\_\_\_

**Finden Sie den Wert von X.**

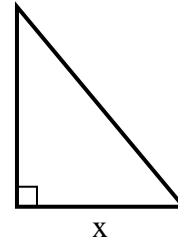
1) area =  $9 \text{ u}^2$



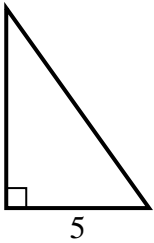
2) area =  $31.5 \text{ u}^2$



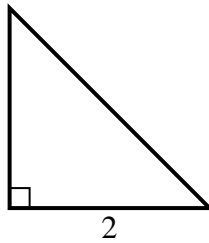
3) area =  $15 \text{ u}^2$



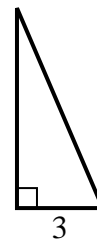
4) area =  $17.5 \text{ u}^2$



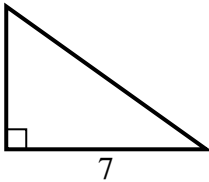
5) area =  $2 \text{ u}^2$



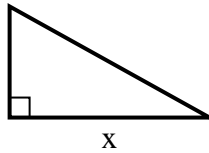
6) area =  $10.5 \text{ u}^2$



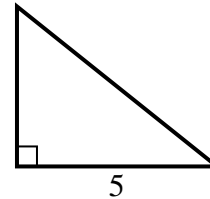
7) area =  $17.5 \text{ u}^2$



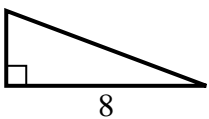
8) area =  $22.5 \text{ u}^2$



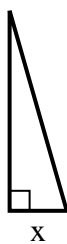
9) area =  $10 \text{ u}^2$



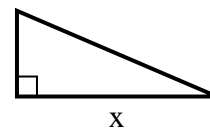
10) area =  $12 \text{ u}^2$



11) area =  $7 \text{ u}^2$



12) area =  $10.5 \text{ u}^2$

**Antworten**1. 92. 73. 54. 75. 26. 77. 58. 99. 410. 311. 212. 7