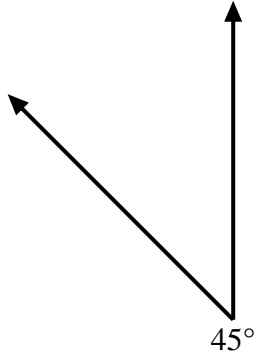


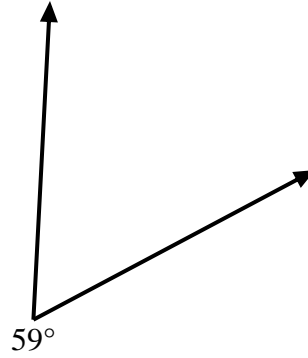


Verwenden Sie einen Winkelmesser, um aus der gezeigten Abbildung ein Dreieck zu erstellen. Antworten Sie mit den fehlenden Winkeln. Antworten variieren.

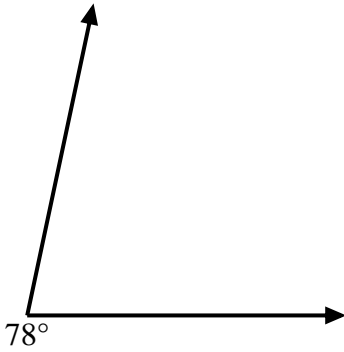
1)



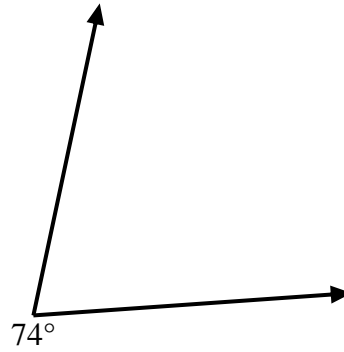
2)



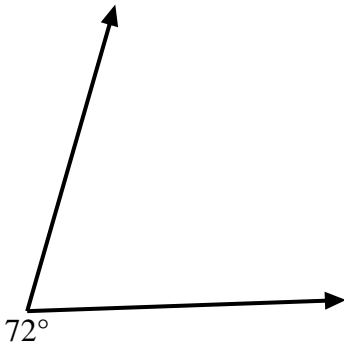
3)



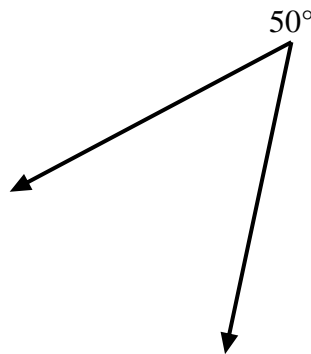
4)



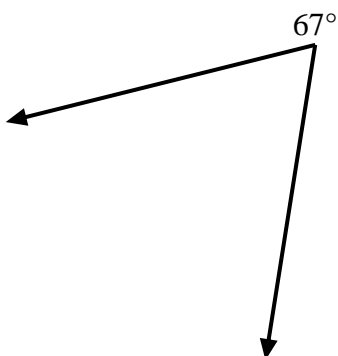
5)



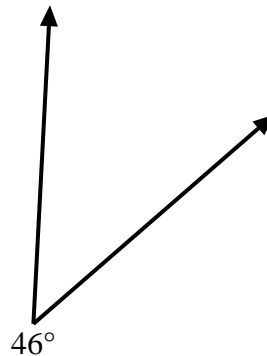
6)



7)



8)



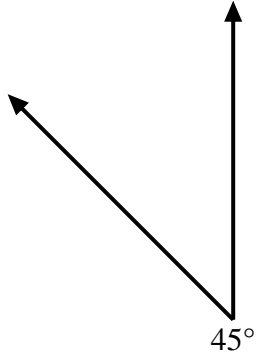
**Antworten**

- 1. \_\_\_\_\_
- 2. \_\_\_\_\_
- 3. \_\_\_\_\_
- 4. \_\_\_\_\_
- 5. \_\_\_\_\_
- 6. \_\_\_\_\_
- 7. \_\_\_\_\_
- 8. \_\_\_\_\_

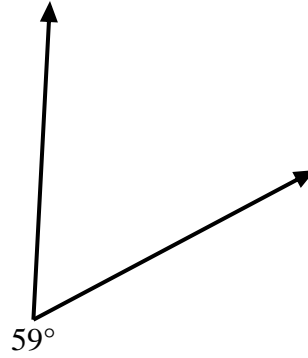


Verwenden Sie einen Winkelmesser, um aus der gezeigten Abbildung ein Dreieck zu erstellen. Antworten Sie mit den fehlenden Winkeln. Antworten variieren.

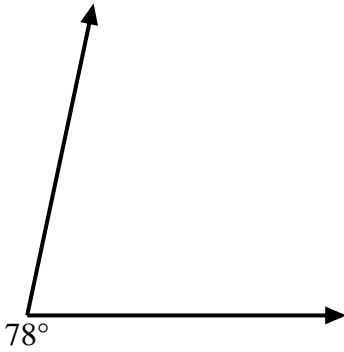
1)



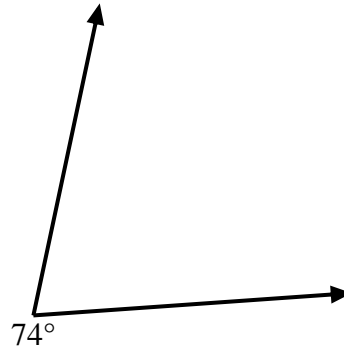
2)



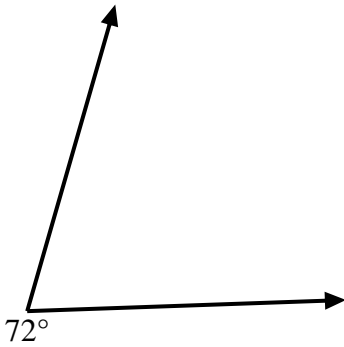
3)



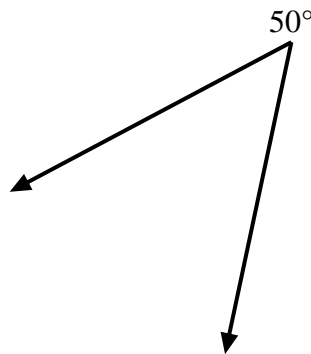
4)



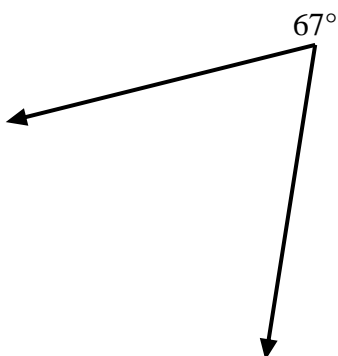
5)



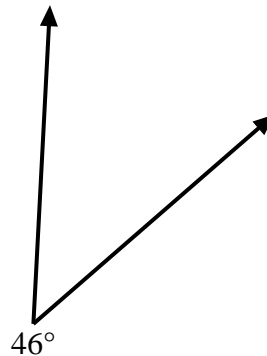
6)



7)



8)



Antworten

1.     =135    

2.     =121    

3.     =102    

4.     =106    

5.     =108    

6.     =130    

7.     =113    

8.     =134