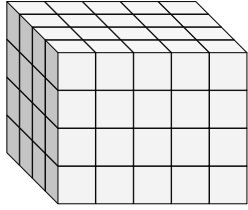


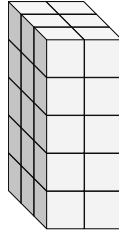


Finde die Länge, Breite und Höhe des rechteckigen Körpers. Bestimme danach das Volumen.

Bsp)



1)



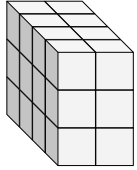
Antworten

D W H V

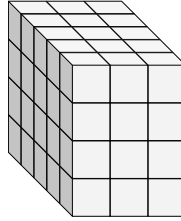
Bsp.

4 5 4 80

2)



3)



1. _____

2. _____

3. _____

4. _____

5. _____

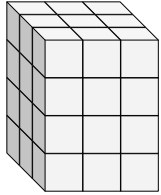
6. _____

7. _____

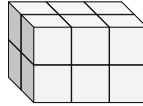
8. _____

9. _____

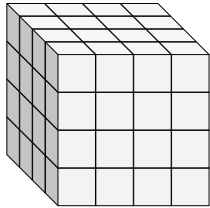
4)



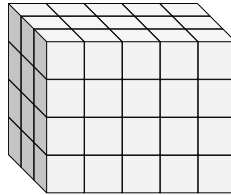
5)



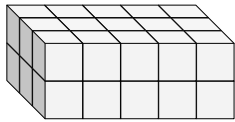
6)



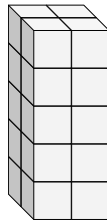
7)



8)



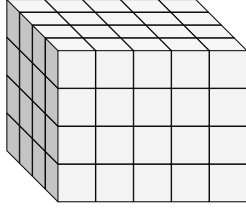
9)



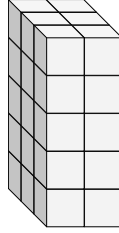


Finde die Länge, Breite und Höhe des rechteckigen Körpers. Bestimme danach das Volumen.

Bsp)



1)



Antworten

D W H V

Bsp.

4 5 4 80

1.

3 2 5 30

2.

4 2 3 24

3.

5 3 4 60

4.

3 3 4 36

5.

2 3 2 12

6.

4 4 4 64

7.

3 5 4 60

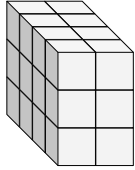
8.

3 5 2 30

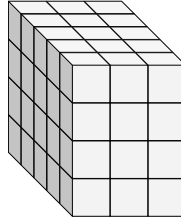
9.

2 2 5 20

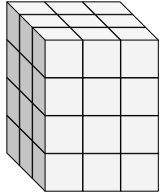
2)



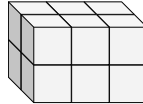
3)



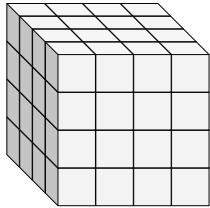
4)



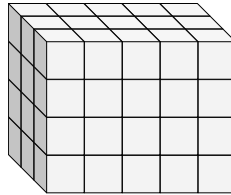
5)



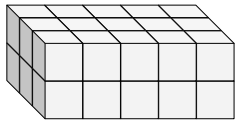
6)



7)



8)



9)

