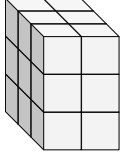


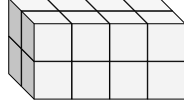


Finde die Länge, Breite und Höhe des rechteckigen Körpers. Bestimme danach das Volumen.

Bsp)



1)



Antworten

D W H V

Bsp. 3 2 3 18

1. _____

2. _____

3. _____

4. _____

5. _____

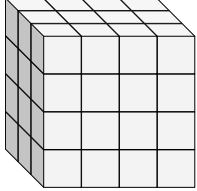
6. _____

7. _____

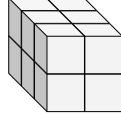
8. _____

9. _____

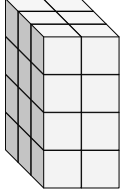
2)



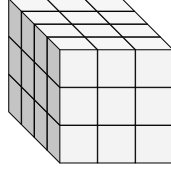
3)



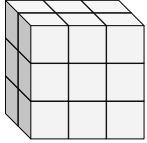
4)



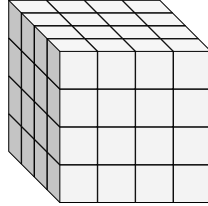
5)



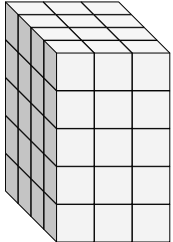
6)



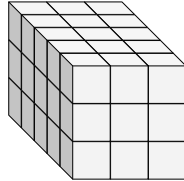
7)



8)

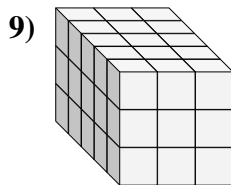
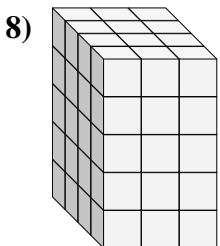
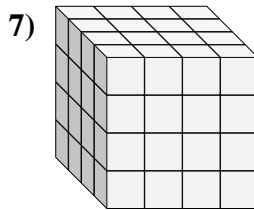
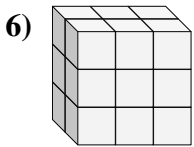
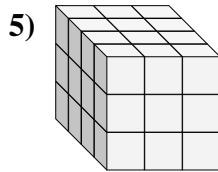
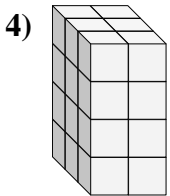
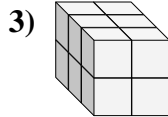
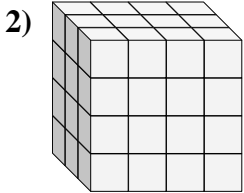
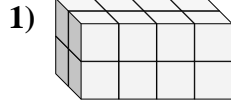
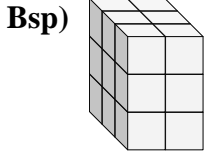


9)





Finde die Länge, Breite und Höhe des rechteckigen Körpers. Bestimme danach das Volumen.



Antworten

D W H V

Bsp. 3 2 3 18

1. 2 4 2 16

2. 3 4 4 48

3. 3 2 2 12

4. 3 2 4 24

5. 4 3 3 36

6. 2 3 3 18

7. 4 4 4 64

8. 4 3 5 60

9. 5 3 3 45