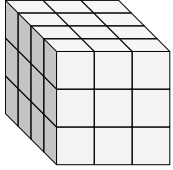


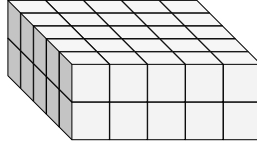


Finde die Länge, Breite und Höhe des rechteckigen Körpers. Bestimme danach das Volumen.

Bsp)



1)



Antworten

D W H V

Bsp. 4 3 3 36

1. _____

2. _____

3. _____

4. _____

5. _____

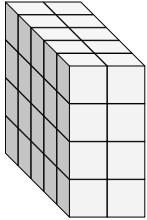
6. _____

7. _____

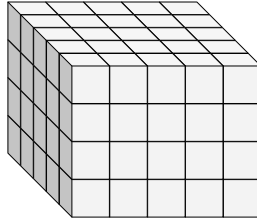
8. _____

9. _____

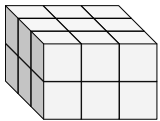
2)



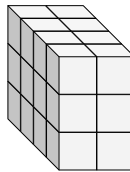
3)



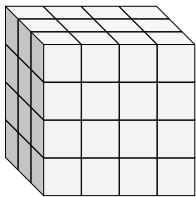
4)



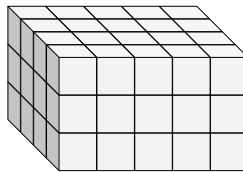
5)



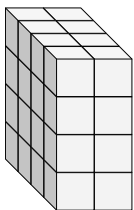
6)



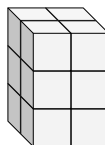
7)



8)

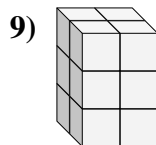
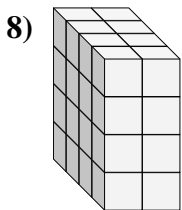
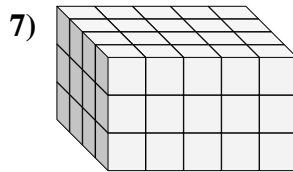
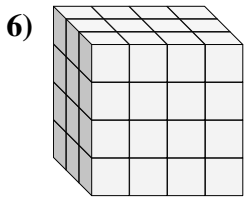
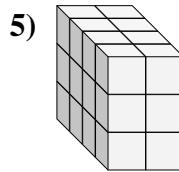
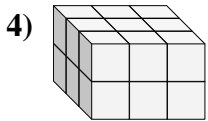
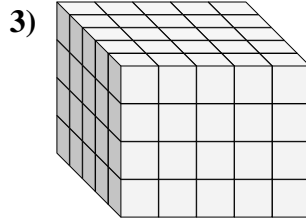
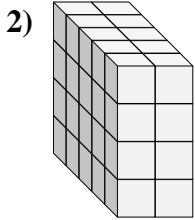
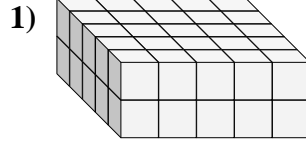
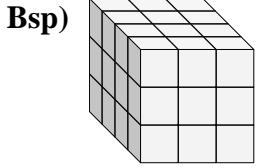


9)





Finde die Länge, Breite und Höhe des rechteckigen Körpers. Bestimme danach das Volumen.



Antworten

D W H V

Bsp. 4 3 3 36

1. 5 5 2 50

2. 5 2 4 40

3. 5 5 4 100

4. 3 3 2 18

5. 4 2 3 24

6. 3 4 4 48

7. 4 5 3 60

8. 4 2 4 32

9. 2 2 3 12