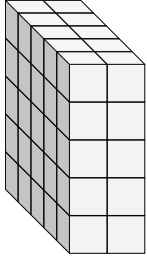


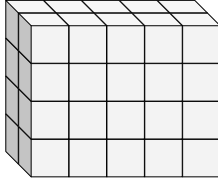


Finde die Länge, Breite und Höhe des rechteckigen Körpers. Bestimme danach das Volumen.

Bsp)



1)



Antworten

D W H V

Bsp. 5 2 5 50

1. _____

2. _____

3. _____

4. _____

5. _____

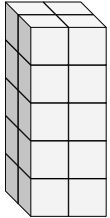
6. _____

7. _____

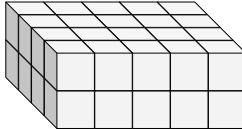
8. _____

9. _____

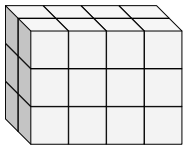
2)



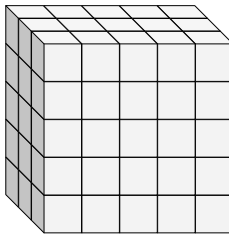
3)



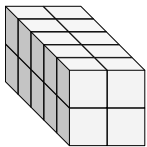
4)



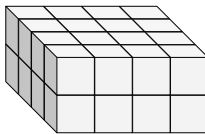
5)



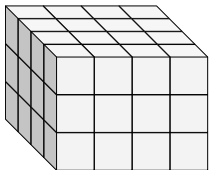
6)



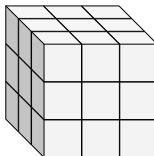
7)



8)

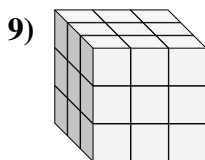
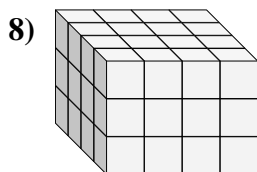
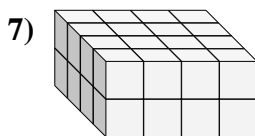
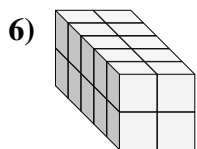
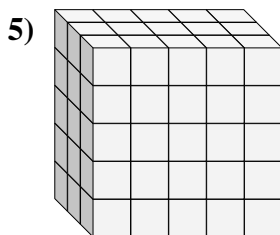
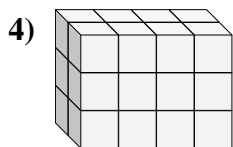
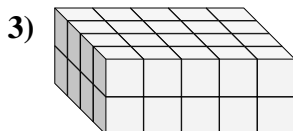
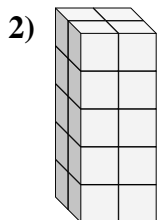
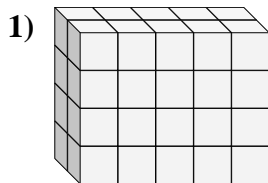
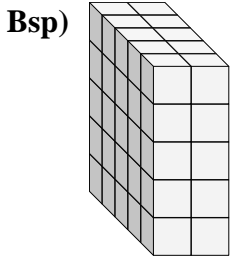


9)





Finde die Länge, Breite und Höhe des rechteckigen Körpers. Bestimme danach das Volumen.



Antworten

D W H V

Bsp. 5 2 5 50

1. 2 5 4 40

2. 2 2 5 20

3. 4 5 2 40

4. 2 4 3 24

5. 3 5 5 75

6. 5 2 2 20

7. 4 4 2 32

8. 4 4 3 48

9. 3 3 3 27