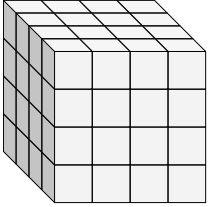


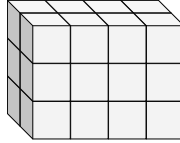


Finde die Länge, Breite und Höhe des rechteckigen Körpers. Bestimme danach das Volumen.

Bsp)



1)



Antworten

D W H V

Bsp. 4 4 4 64

1. _____

2. _____

3. _____

4. _____

5. _____

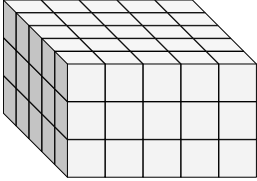
6. _____

7. _____

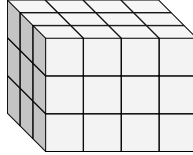
8. _____

9. _____

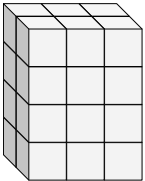
2)



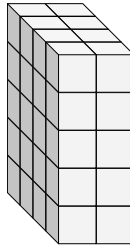
3)



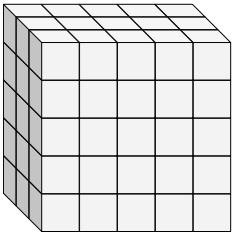
4)



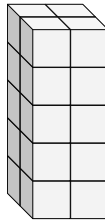
5)



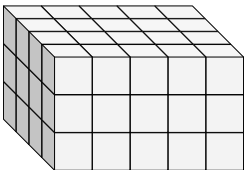
6)



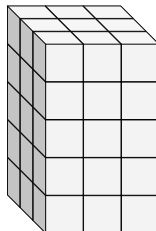
7)



8)

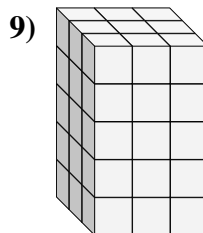
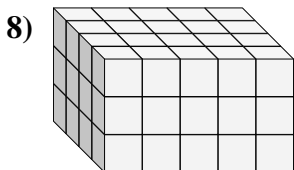
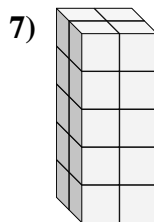
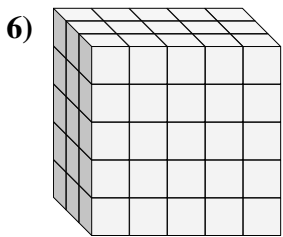
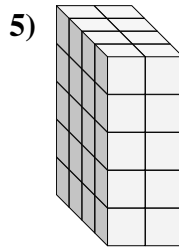
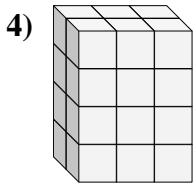
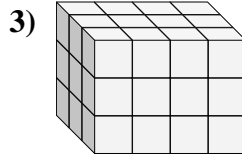
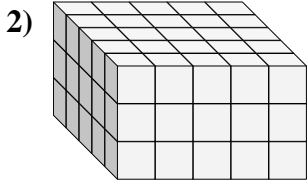
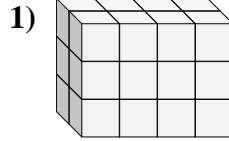
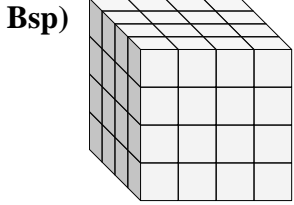


9)





Finde die Länge, Breite und Höhe des rechteckigen Körpers. Bestimme danach das Volumen.



Antworten

D W H V

	D	W	H	V
Bsp.	4	4	4	64
1.	2	4	3	24
2.	5	5	3	75
3.	3	4	3	36
4.	2	3	4	24
5.	4	2	5	40
6.	3	5	5	75
7.	2	2	5	20
8.	4	5	3	60
9.	3	3	5	45