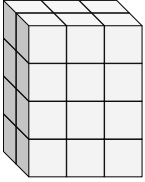


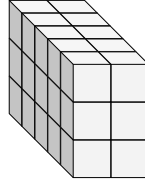


Finde die Länge, Breite und Höhe des rechteckigen Körpers. Bestimme danach das Volumen.

Bsp)



1)



Antworten

D W H V

Bsp. 2 3 4 24

1. _____

2. _____

3. _____

4. _____

5. _____

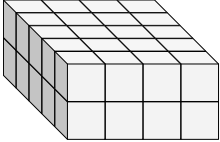
6. _____

7. _____

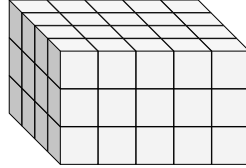
8. _____

9. _____

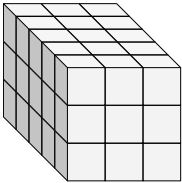
2)



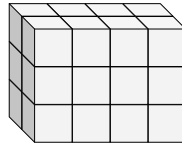
3)



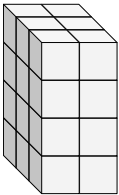
4)



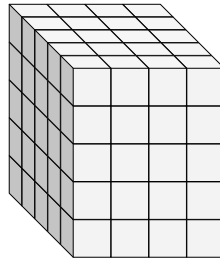
5)



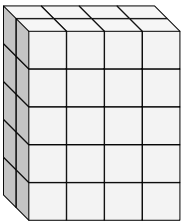
6)



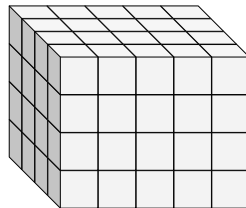
7)



8)

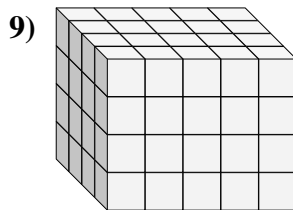
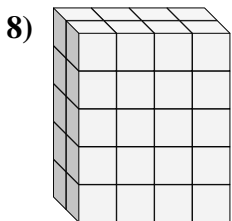
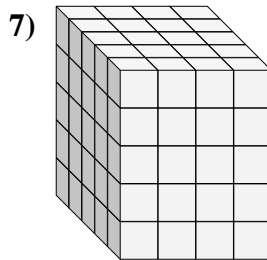
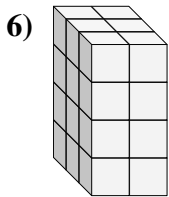
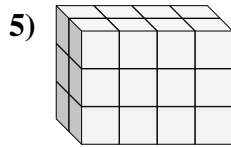
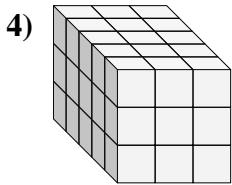
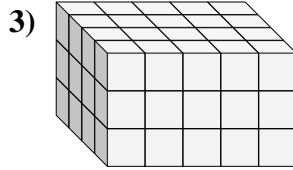
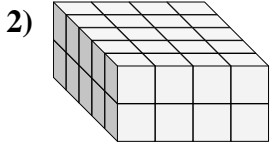
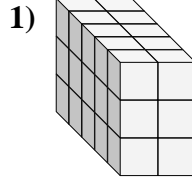
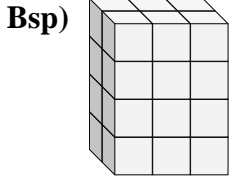


9)





Finde die Länge, Breite und Höhe des rechteckigen Körpers. Bestimme danach das Volumen.



Antworten

D W H V

Bsp. 2 3 4 24

1. 5 2 3 30

2. 5 4 2 40

3. 4 5 3 60

4. 5 3 3 45

5. 2 4 3 24

6. 3 2 4 24

7. 5 4 5 100

8. 2 4 5 40

9. 4 5 4 80