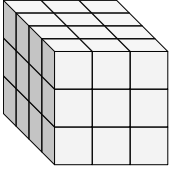


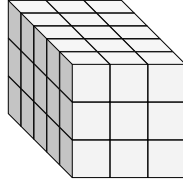


Finde die Länge, Breite und Höhe des rechteckigen Körpers. Bestimme danach das Volumen.

Bsp)



1)



**Antworten**

D W H V

Bsp. 4 3 3 36

1. \_\_\_\_\_

2. \_\_\_\_\_

3. \_\_\_\_\_

4. \_\_\_\_\_

5. \_\_\_\_\_

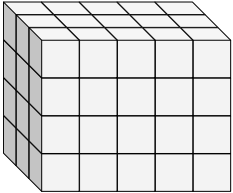
6. \_\_\_\_\_

7. \_\_\_\_\_

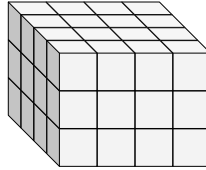
8. \_\_\_\_\_

9. \_\_\_\_\_

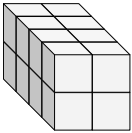
2)



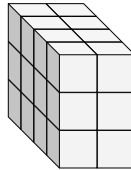
3)



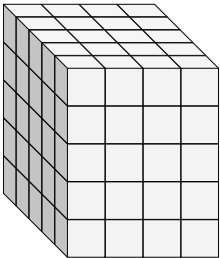
4)



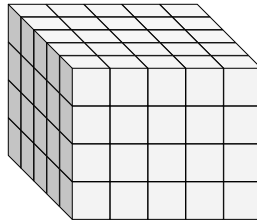
5)



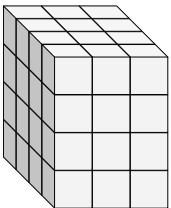
6)



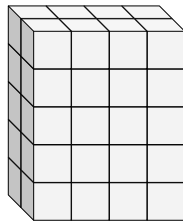
7)



8)

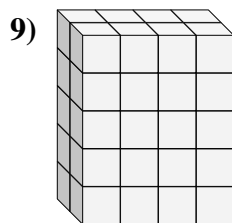
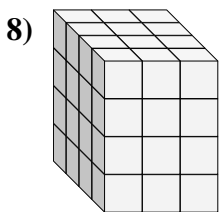
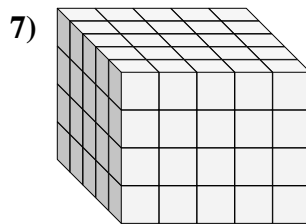
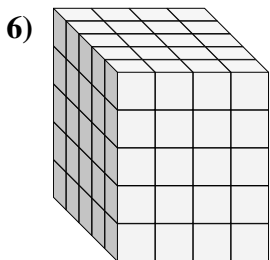
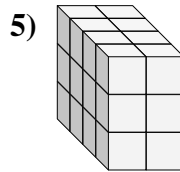
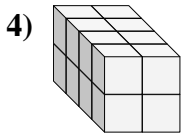
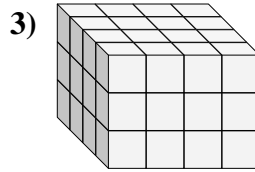
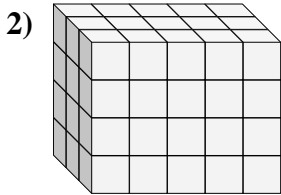
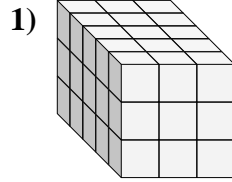
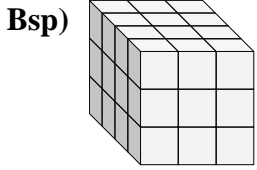


9)





Finde die Länge, Breite und Höhe des rechteckigen Körpers. Bestimme danach das Volumen.



**Antworten**

D W H V

Bsp. 4 3 3 36

1. 5 3 3 45

2. 3 5 4 60

3. 4 4 3 48

4. 4 2 2 16

5. 4 2 3 24

6. 5 4 5 100

7. 5 5 4 100

8. 4 3 4 48

9. 2 4 5 40