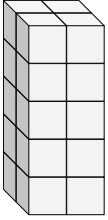


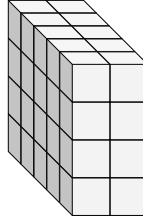


Finde die Länge, Breite und Höhe des rechteckigen Körpers. Bestimme danach das Volumen.

Bsp)



1)



**Antworten**

D W H V

Bsp. 2 2 5 20

1. \_\_\_\_\_

2. \_\_\_\_\_

3. \_\_\_\_\_

4. \_\_\_\_\_

5. \_\_\_\_\_

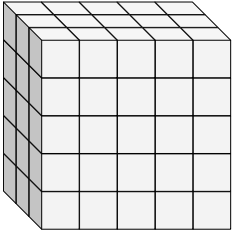
6. \_\_\_\_\_

7. \_\_\_\_\_

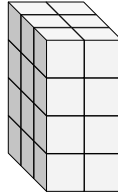
8. \_\_\_\_\_

9. \_\_\_\_\_

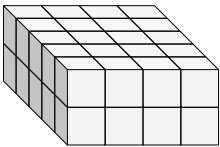
2)



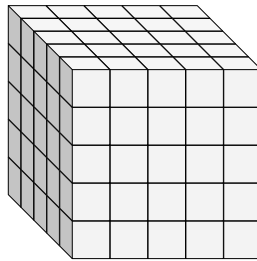
3)



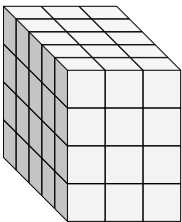
4)



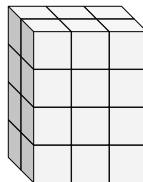
5)



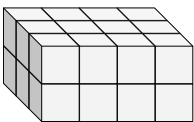
6)



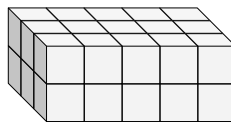
7)



8)

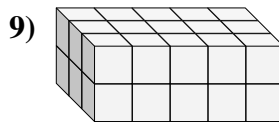
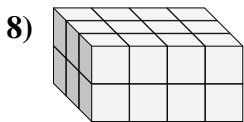
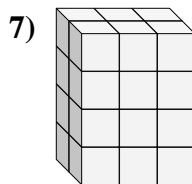
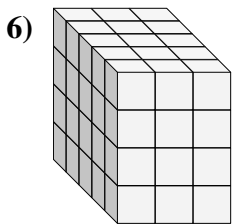
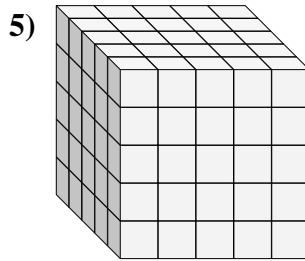
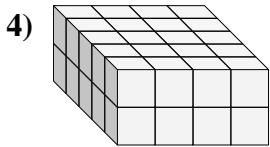
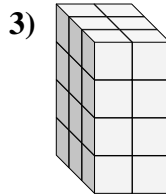
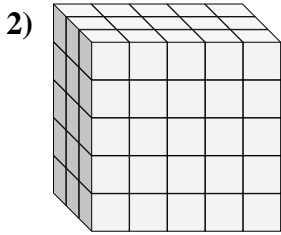
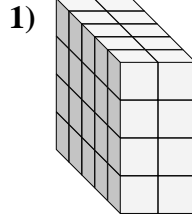



9)





Finde die Länge, Breite und Höhe des rechteckigen Körpers. Bestimme danach das Volumen.



**Antworten**

D W H V

	D	W	H	V
Bsp.	2	2	5	20
1.	5	2	4	40
2.	3	5	5	75
3.	3	2	4	24
4.	5	4	2	40
5.	5	5	5	125
6.	5	3	4	60
7.	2	3	4	24
8.	3	4	2	24
9.	3	5	2	30