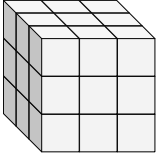


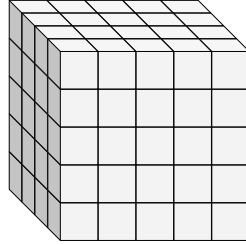


Finde die Länge, Breite und Höhe des rechteckigen Körpers. Bestimme danach das Volumen.

Bsp)



1)



Antworten

D W H V

Bsp. 3 3 3 27

1. _____

2. _____

3. _____

4. _____

5. _____

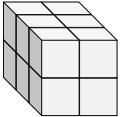
6. _____

7. _____

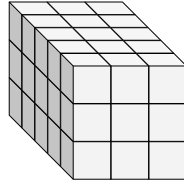
8. _____

9. _____

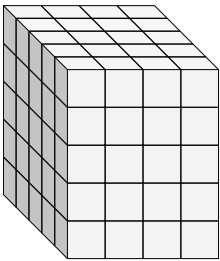
2)



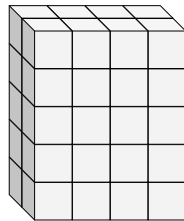
3)



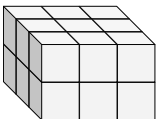
4)



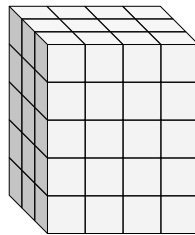
5)



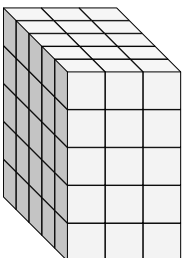
6)



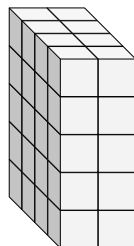
7)



8)

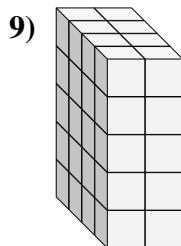
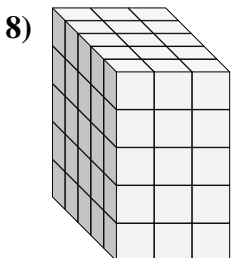
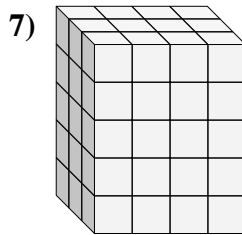
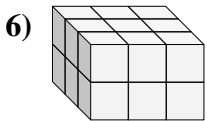
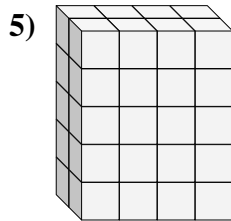
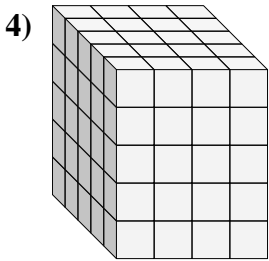
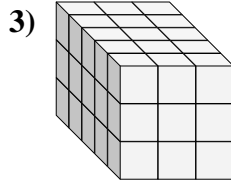
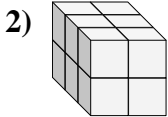
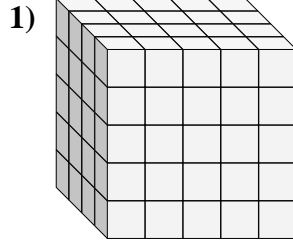
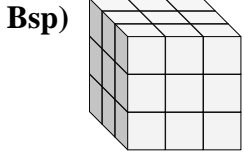


9)





Finde die Länge, Breite und Höhe des rechteckigen Körpers. Bestimme danach das Volumen.



Antworten

D W H V

Bsp. 3 3 3 27

1. 4 5 5 100

2. 3 2 2 12

3. 5 3 3 45

4. 5 4 5 100

5. 2 4 5 40

6. 3 3 2 18

7. 3 4 5 60

8. 5 3 5 75

9. 4 2 5 40