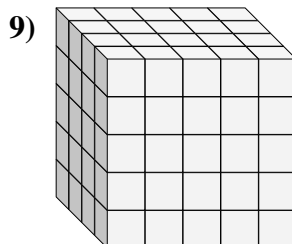
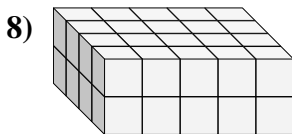
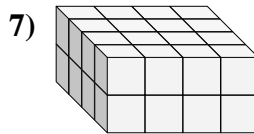
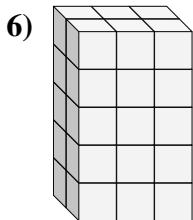
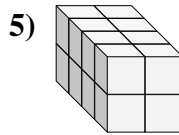
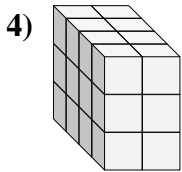
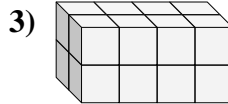
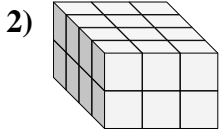
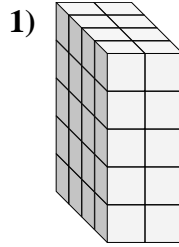
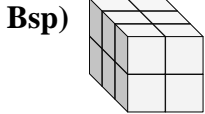




Finde die Länge, Breite und Höhe des rechteckigen Körpers. Bestimme danach das Volumen.



Antworten

D W H V

Bsp. 3 2 2 12

1. _____

2. _____

3. _____

4. _____

5. _____

6. _____

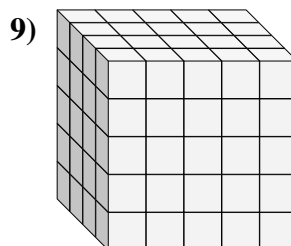
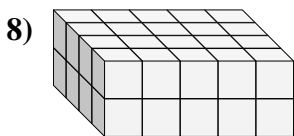
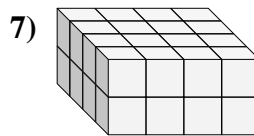
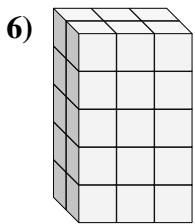
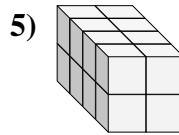
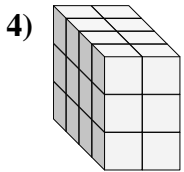
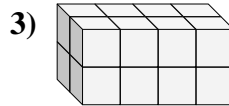
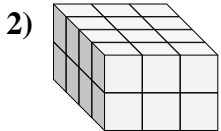
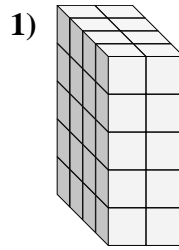
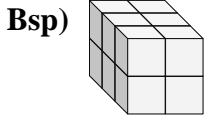
7. _____

8. _____

9. _____



Finde die Länge, Breite und Höhe des rechteckigen Körpers. Bestimme danach das Volumen.



Antworten

D W H V

Bsp. 3 2 2 12

1. 4 2 5 40

2. 4 3 2 24

3. 2 4 2 16

4. 4 2 3 24

5. 4 2 2 16

6. 2 3 5 30

7. 4 4 2 32

8. 4 5 2 40

9. 4 5 5 100