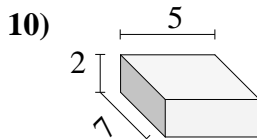
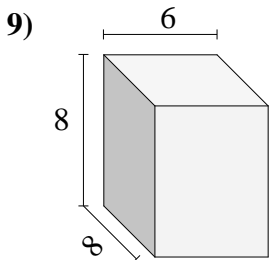
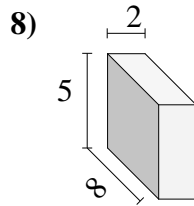
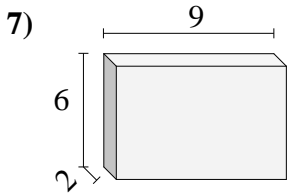
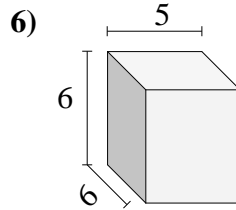
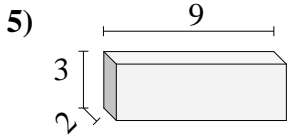
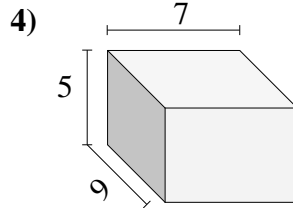
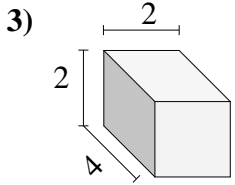
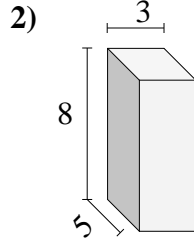
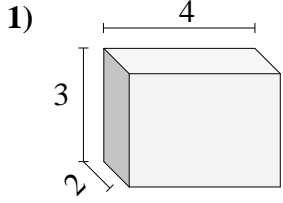




Bestimme das Volumen jedes rechteckigen Körpers. Einheiten sind in cm und nicht maßstabsgerecht.



Antworten

1. _____

2. _____

3. _____

4. _____

5. _____

6. _____

7. _____

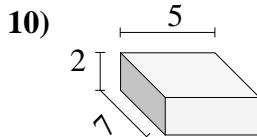
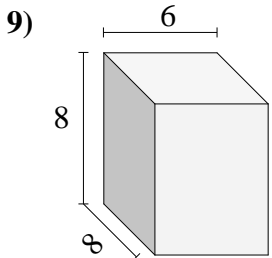
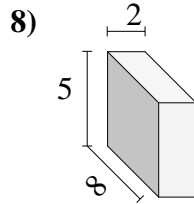
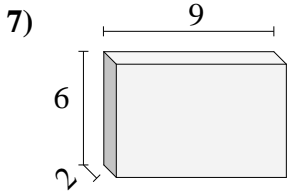
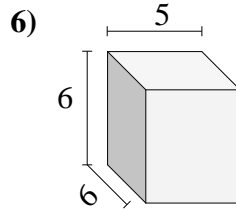
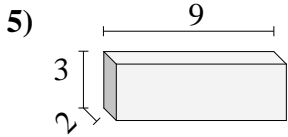
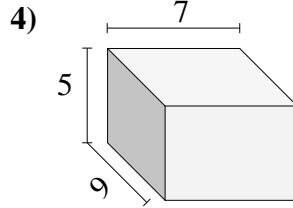
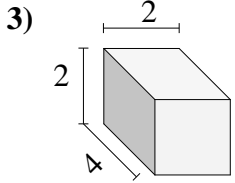
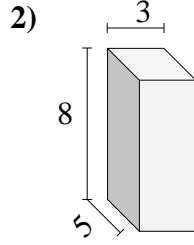
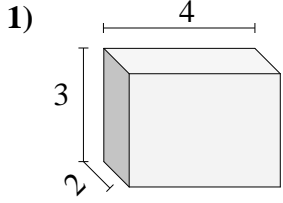
8. _____

9. _____

10. _____



Bestimme das Volumen jedes rechteckigen Körpers. Einheiten sind in cm und nicht maßstabsgerecht.



Antworten

1. 24 cm³
2. 120 cm³
3. 16 cm³
4. 315 cm³
5. 54 cm³
6. 180 cm³
7. 108 cm³
8. 80 cm³
9. 384 cm³
10. 70 cm³