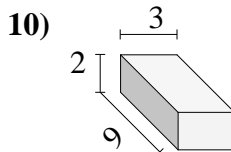
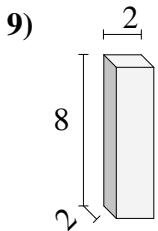
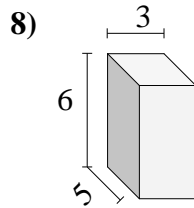
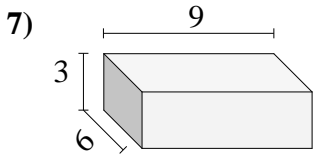
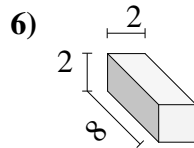
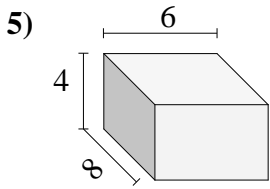
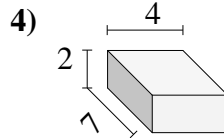
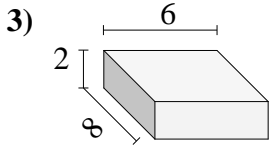
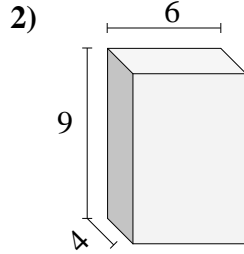
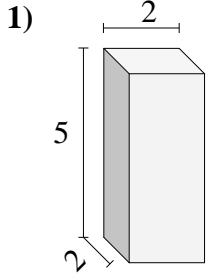




Bestimme das Volumen jedes rechteckigen Körpers. Einheiten sind in cm und nicht maßstabsgerecht.

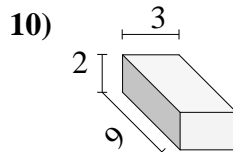
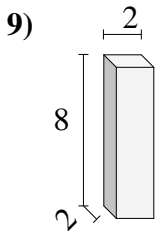
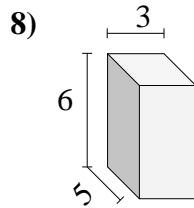
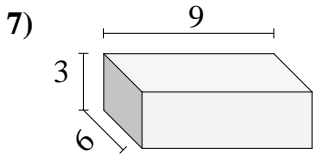
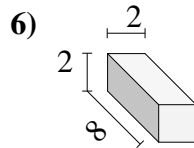
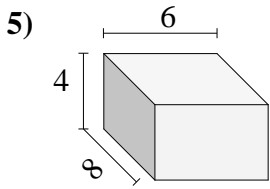
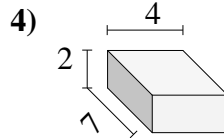
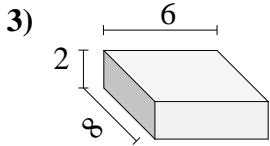
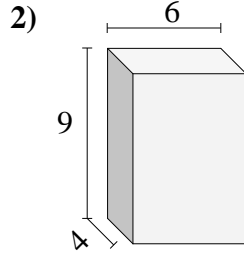
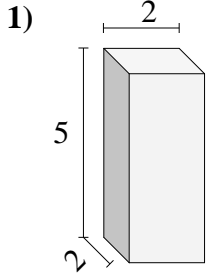


Antworten

- 1. \_\_\_\_\_
- 2. \_\_\_\_\_
- 3. \_\_\_\_\_
- 4. \_\_\_\_\_
- 5. \_\_\_\_\_
- 6. \_\_\_\_\_
- 7. \_\_\_\_\_
- 8. \_\_\_\_\_
- 9. \_\_\_\_\_
- 10. \_\_\_\_\_



Bestimme das Volumen jedes rechteckigen Körpers. Einheiten sind in cm und nicht maßstabsgerecht.



Antworten

1. 20 cm<sup>3</sup>
2. 216 cm<sup>3</sup>
3. 96 cm<sup>3</sup>
4. 56 cm<sup>3</sup>
5. 192 cm<sup>3</sup>
6. 32 cm<sup>3</sup>
7. 162 cm<sup>3</sup>
8. 90 cm<sup>3</sup>
9. 32 cm<sup>3</sup>
10. 54 cm<sup>3</sup>