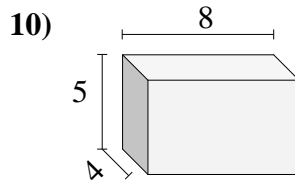
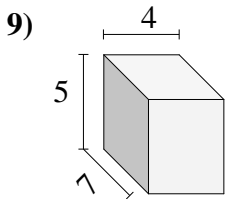
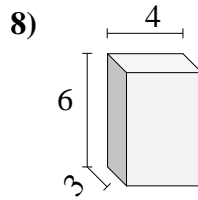
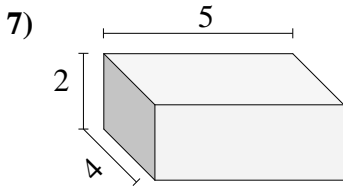
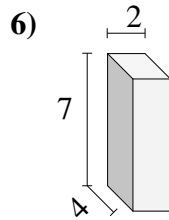
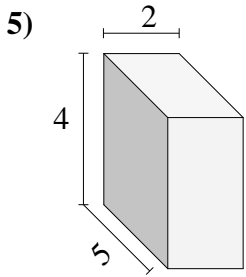
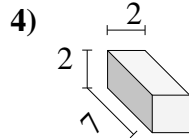
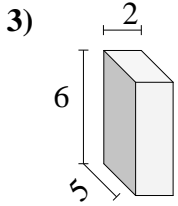
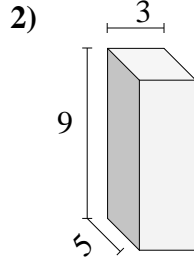
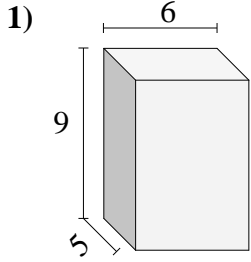




Bestimme das Volumen jedes rechteckigen Körpers. Einheiten sind in cm und nicht maßstabsgerecht.

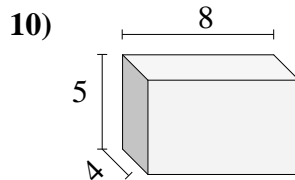
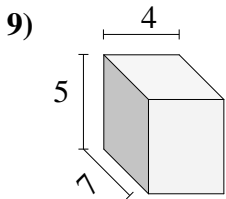
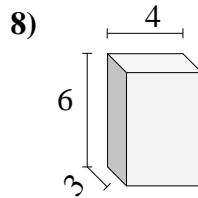
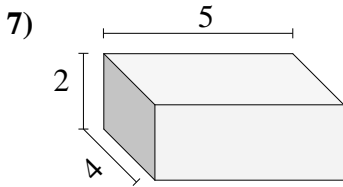
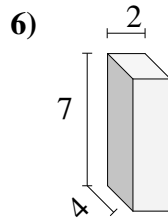
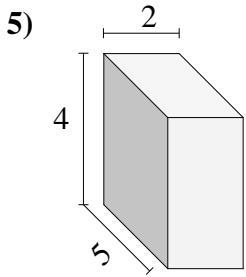
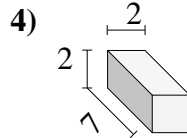
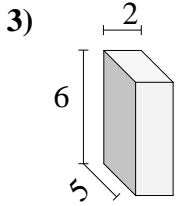
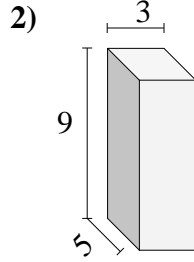
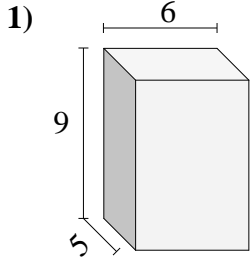


Antworten

- 1. _____
- 2. _____
- 3. _____
- 4. _____
- 5. _____
- 6. _____
- 7. _____
- 8. _____
- 9. _____
- 10. _____



Bestimme das Volumen jedes rechteckigen Körpers. Einheiten sind in cm und nicht maßstabsgerecht.



Antworten

1. 270 cm³

2. 135 cm³

3. 60 cm³

4. 28 cm³

5. 40 cm³

6. 56 cm³

7. 40 cm³

8. 72 cm³

9. 140 cm³

10. 160 cm³