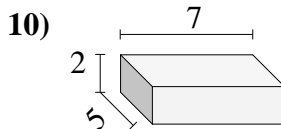
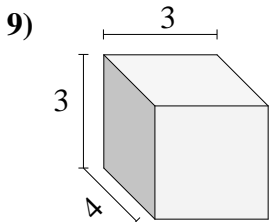
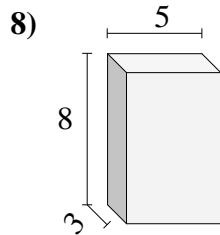
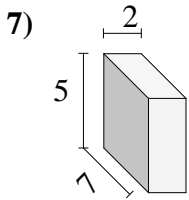
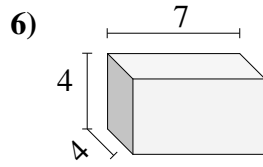
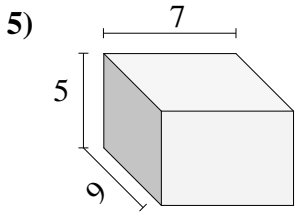
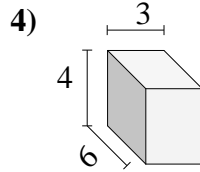
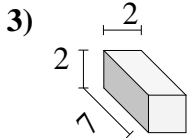
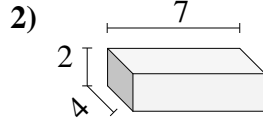
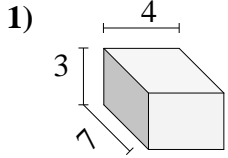




Bestimme das Volumen jedes rechteckigen Körpers. Einheiten sind in cm und nicht maßstabsgerecht.

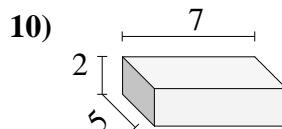
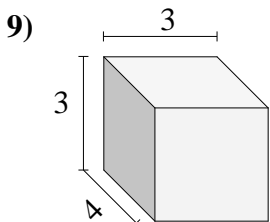
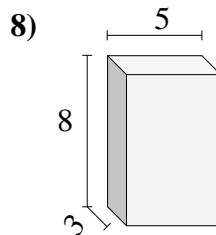
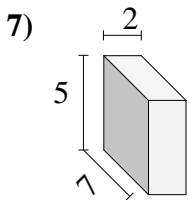
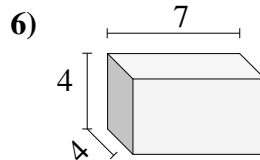
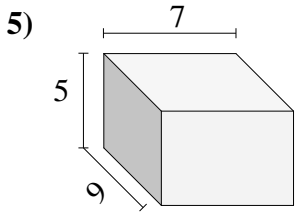
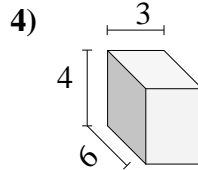
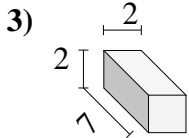
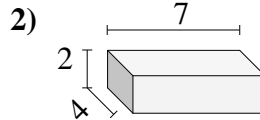
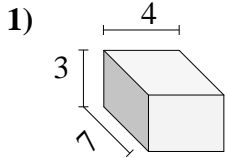


Antworten

- 1. _____
- 2. _____
- 3. _____
- 4. _____
- 5. _____
- 6. _____
- 7. _____
- 8. _____
- 9. _____
- 10. _____



Bestimme das Volumen jedes rechteckigen Körpers. Einheiten sind in cm und nicht maßstabsgerecht.



Antworten

1. 84 cm³

2. 56 cm³

3. 28 cm³

4. 72 cm³

5. 315 cm³

6. 112 cm³

7. 70 cm³

8. 120 cm³

9. 36 cm³

10. 70 cm³