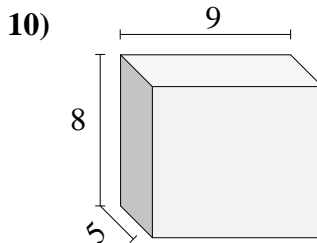
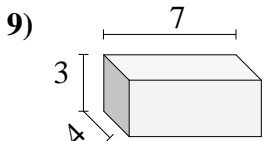
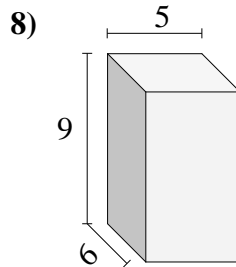
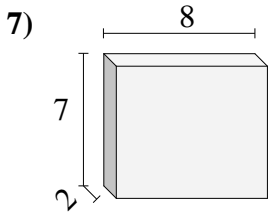
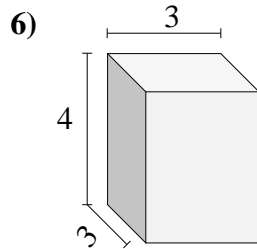
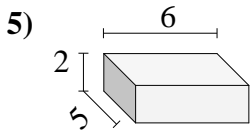
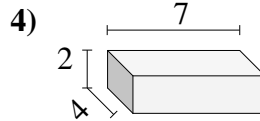
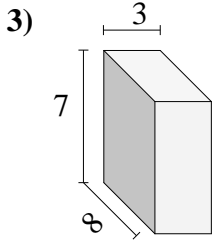
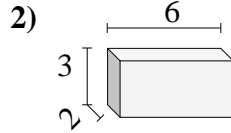
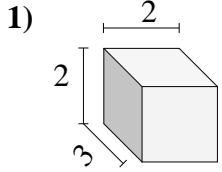




Bestimme das Volumen jedes rechteckigen Körpers. Einheiten sind in cm und nicht maßstabsgerecht.



Antworten

1. \_\_\_\_\_

2. \_\_\_\_\_

3. \_\_\_\_\_

4. \_\_\_\_\_

5. \_\_\_\_\_

6. \_\_\_\_\_

7. \_\_\_\_\_

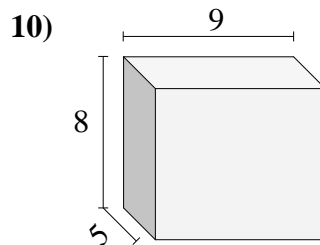
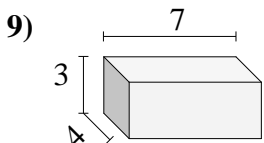
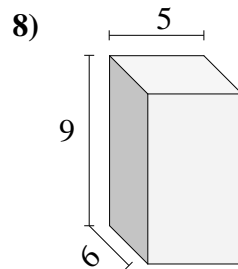
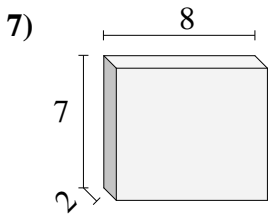
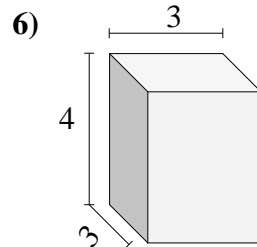
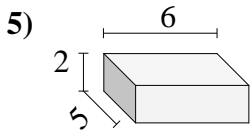
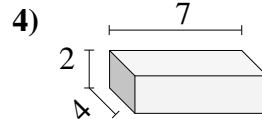
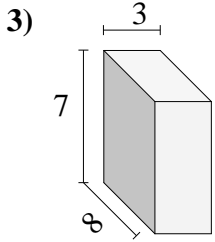
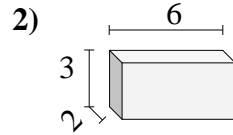
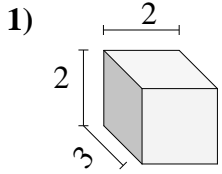
8. \_\_\_\_\_

9. \_\_\_\_\_

10. \_\_\_\_\_



Bestimme das Volumen jedes rechteckigen Körpers. Einheiten sind in cm und nicht maßstabsgerecht.

**Antworten**1. 12 cm<sup>3</sup>2. 36 cm<sup>3</sup>3. 168 cm<sup>3</sup>4. 56 cm<sup>3</sup>5. 60 cm<sup>3</sup>6. 36 cm<sup>3</sup>7. 112 cm<sup>3</sup>8. 270 cm<sup>3</sup>9. 84 cm<sup>3</sup>10. 360 cm<sup>3</sup>