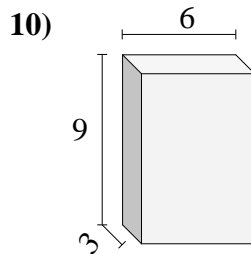
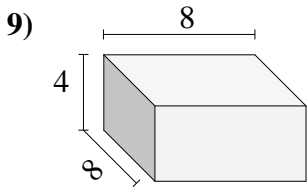
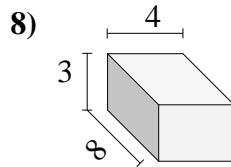
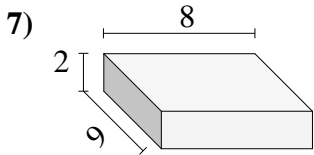
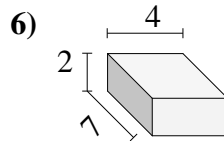
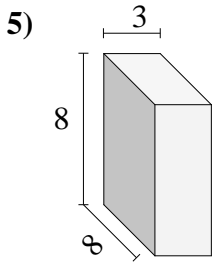
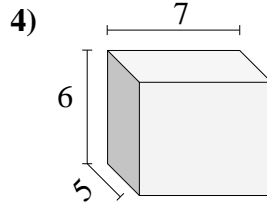
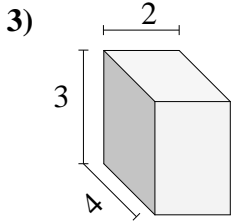
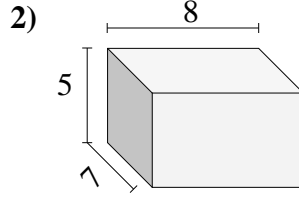
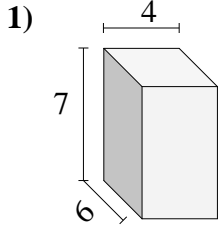




Bestimme das Volumen jedes rechteckigen Körpers. Einheiten sind in cm und nicht maßstabsgerecht.

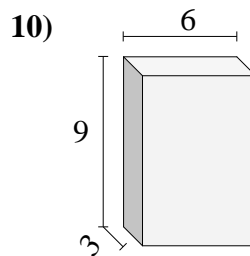
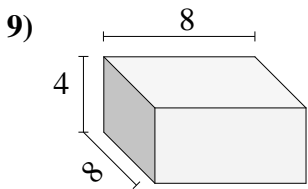
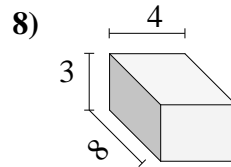
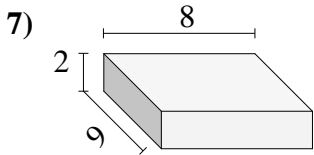
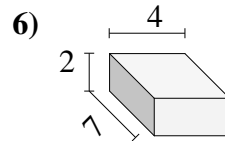
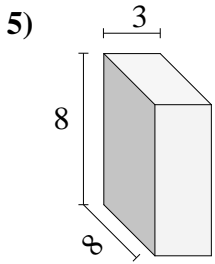
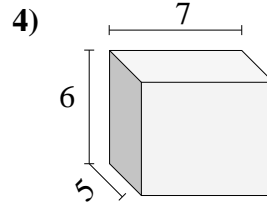
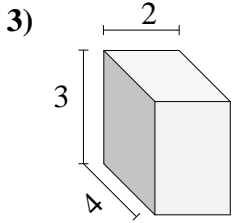
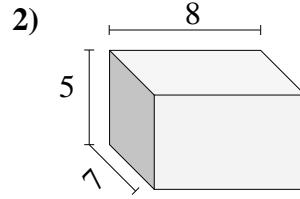
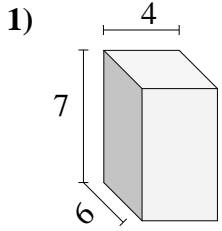


Antworten

- 1. _____
- 2. _____
- 3. _____
- 4. _____
- 5. _____
- 6. _____
- 7. _____
- 8. _____
- 9. _____
- 10. _____



Bestimme das Volumen jedes rechteckigen Körpers. Einheiten sind in cm und nicht maßstabsgerecht.

**Antworten**1. 168 cm³2. 280 cm³3. 24 cm³4. 210 cm³5. 192 cm³6. 56 cm³7. 144 cm³8. 96 cm³9. 256 cm³10. 162 cm³