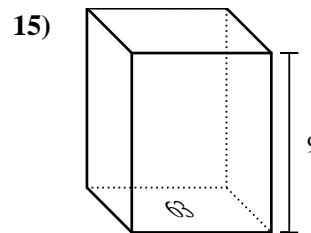
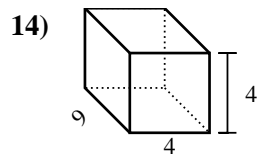
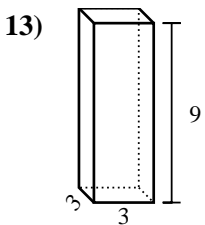
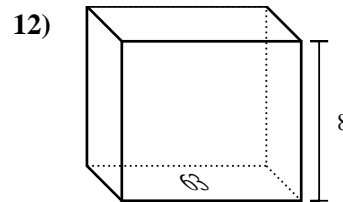
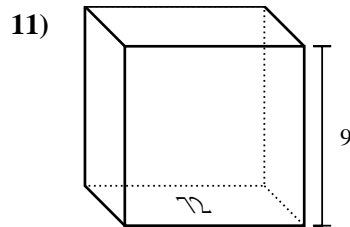
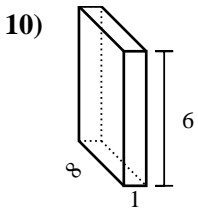
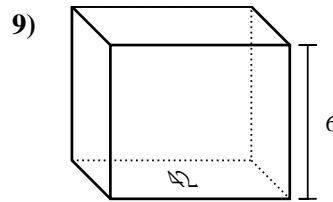
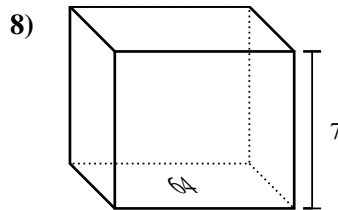
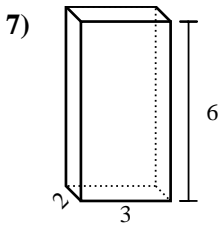
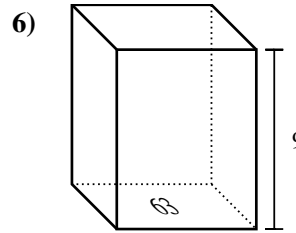
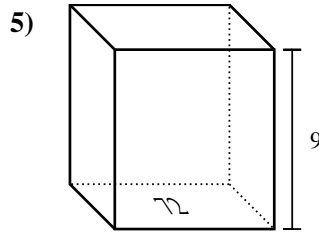
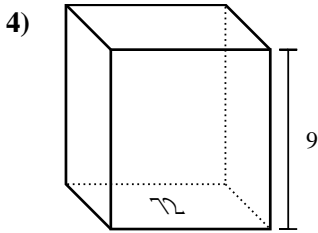
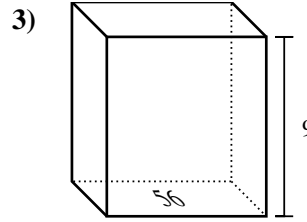
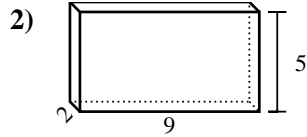
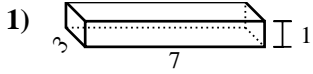




Bestimme das Volumen jedes rechteckigen Körpers. Denke daran, dass $V = \text{Länge} \times \text{Breite} \times \text{Höhe}$ ist. Einheiten sind in cm und nicht maßstabsgerecht.

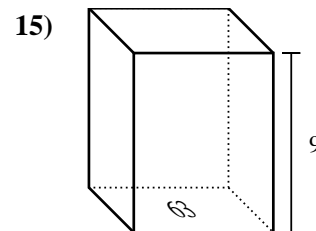
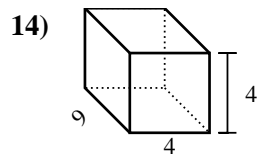
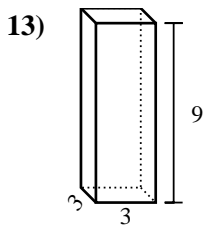
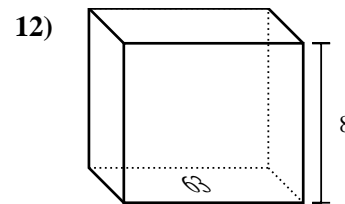
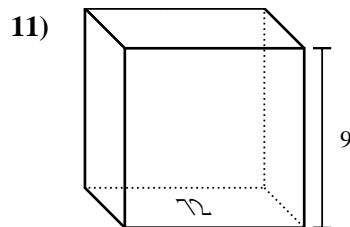
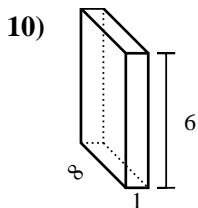
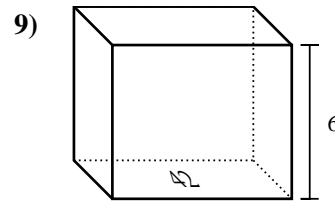
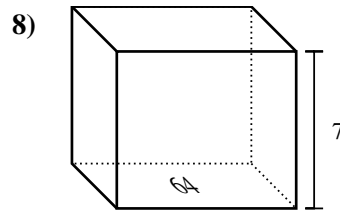
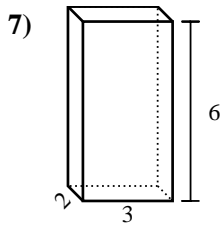
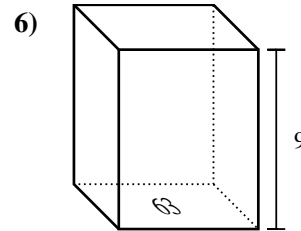
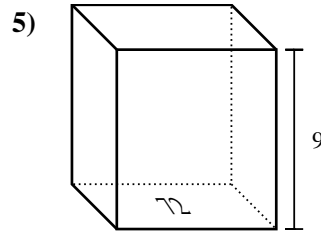
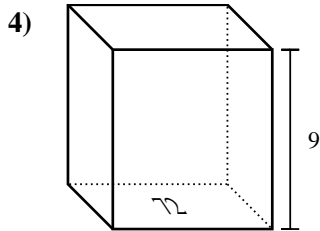
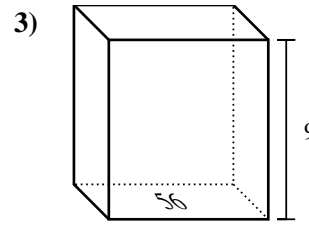
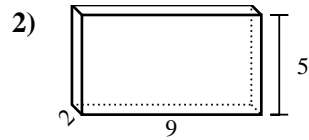
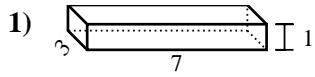


Antworten

1. _____
2. _____
3. _____
4. _____
5. _____
6. _____
7. _____
8. _____
9. _____
10. _____
11. _____
12. _____
13. _____
14. _____
15. _____

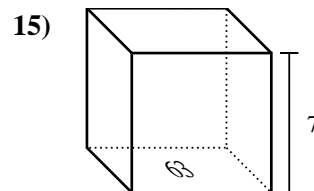
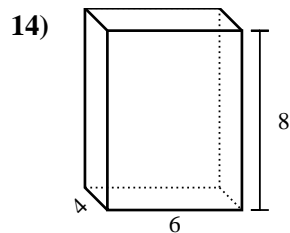
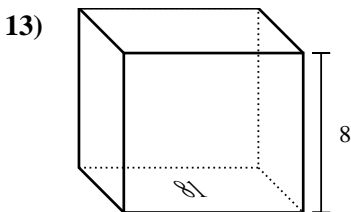
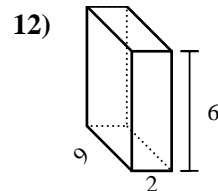
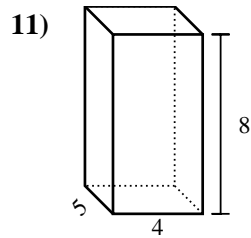
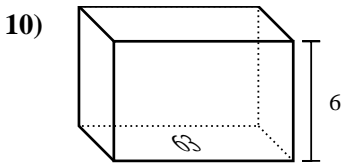
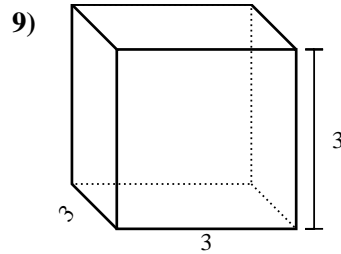
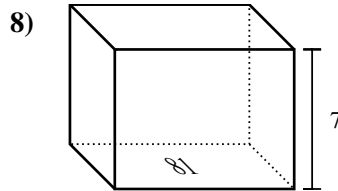
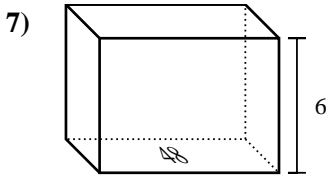
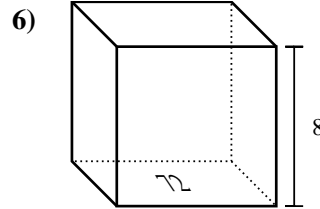
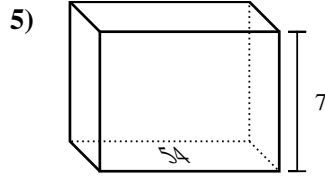
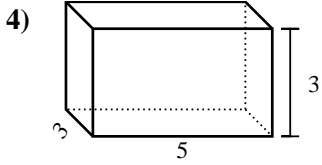
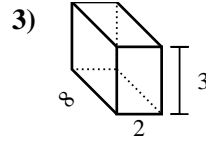
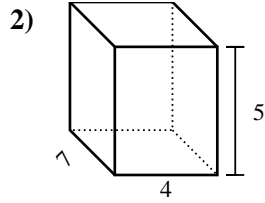
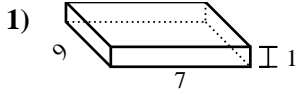


Bestimme das Volumen jedes rechteckigen Körpers. Denke daran, dass $V = \text{Länge} \times \text{Breite} \times \text{Höhe}$ ist. Einheiten sind in cm und nicht maßstabsgerecht.

**Antworten**1. 21 cm³2. 90 cm³3. 504 cm³4. 648 cm³5. 648 cm³6. 567 cm³7. 36 cm³8. 448 cm³9. 252 cm³10. 48 cm³11. 648 cm³12. 504 cm³13. 81 cm³14. 144 cm³15. 567 cm³



Bestimme das Volumen jedes rechteckigen Körpers. Denke daran, dass $V = \text{Länge} \times \text{Breite} \times \text{Höhe}$ ist. Einheiten sind in cm und nicht maßstabsgerecht.

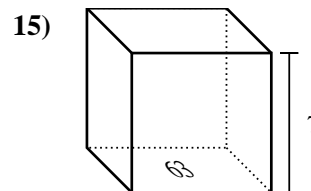
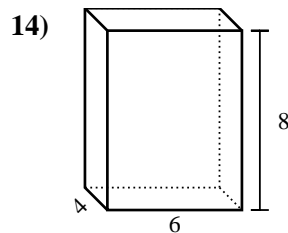
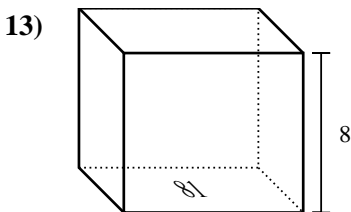
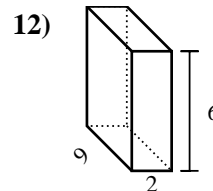
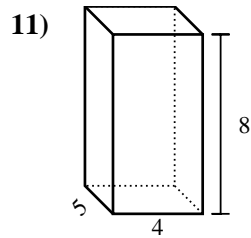
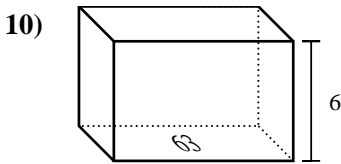
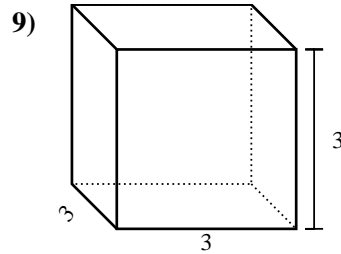
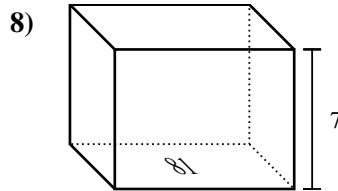
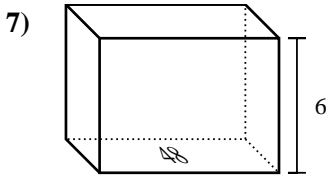
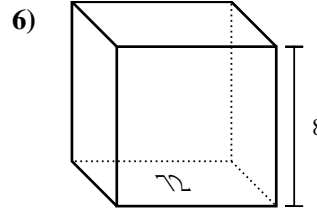
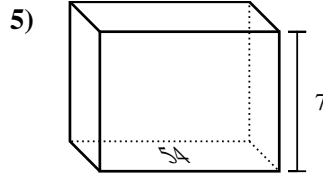
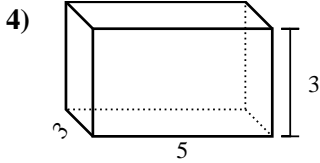
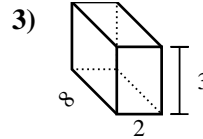
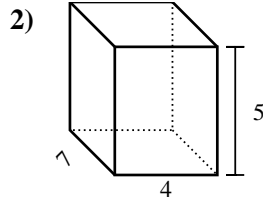
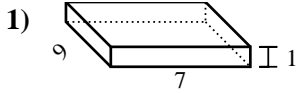


Antworten

1. _____
2. _____
3. _____
4. _____
5. _____
6. _____
7. _____
8. _____
9. _____
10. _____
11. _____
12. _____
13. _____
14. _____
15. _____



Bestimme das Volumen jedes rechteckigen Körpers. Denke daran, dass $V = \text{Länge} \times \text{Breite} \times \text{Höhe}$ ist. Einheiten sind in cm und nicht maßstabsgerecht.



Antworten

1. 63 cm³

2. 140 cm³

3. 48 cm³

4. 45 cm³

5. 378 cm³

6. 576 cm³

7. 288 cm³

8. 567 cm³

9. 27 cm³

10. 378 cm³

11. 160 cm³

12. 108 cm³

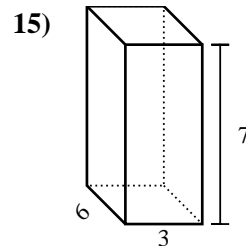
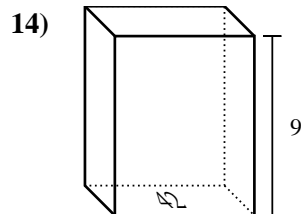
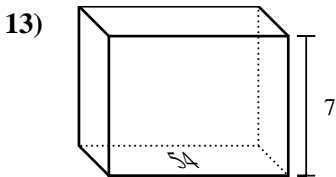
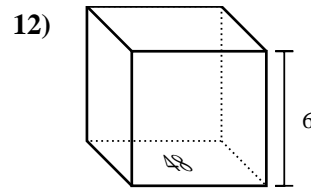
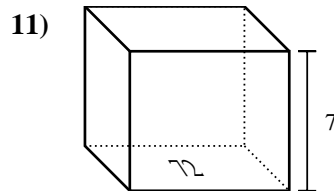
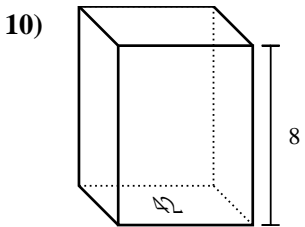
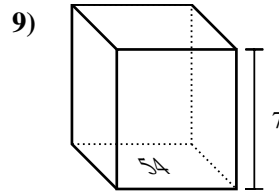
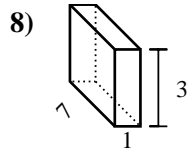
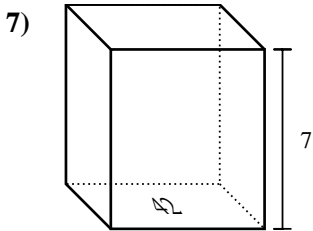
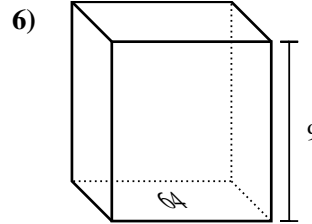
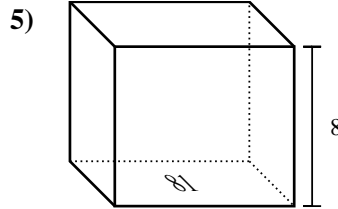
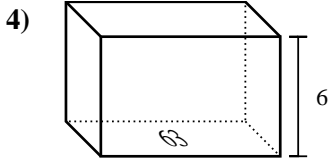
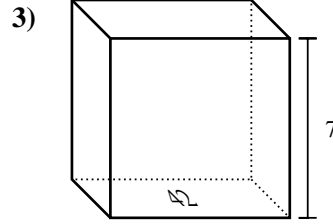
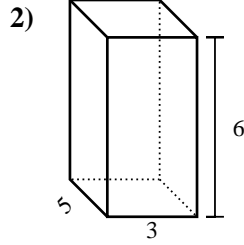
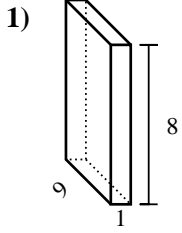
13. 648 cm³

14. 192 cm³

15. 441 cm³



Bestimme das Volumen jedes rechteckigen Körpers. Denke daran, dass $V = \text{Länge} \times \text{Breite} \times \text{Höhe}$ ist. Einheiten sind in cm und nicht maßstabsgerecht.

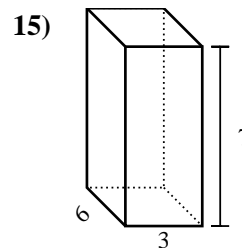
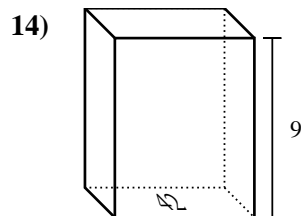
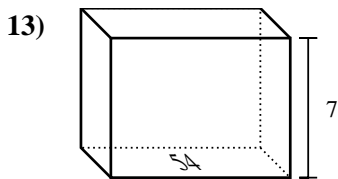
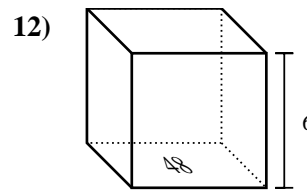
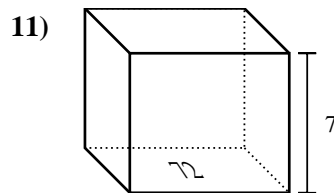
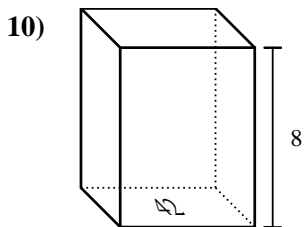
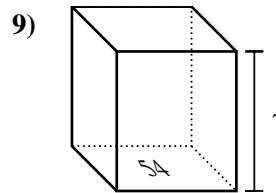
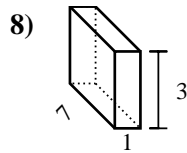
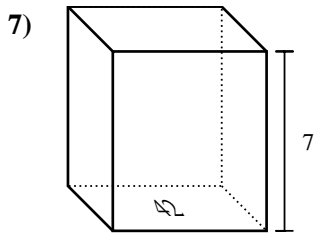
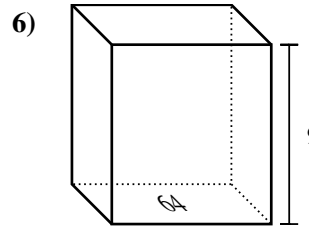
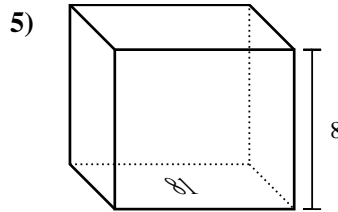
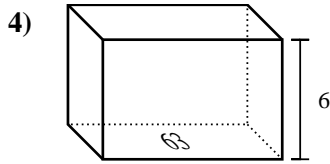
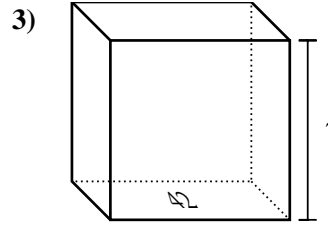
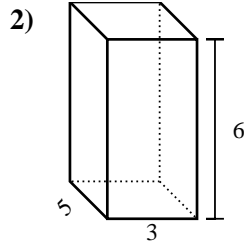
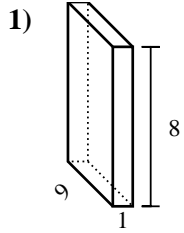


Antworten

1. _____
2. _____
3. _____
4. _____
5. _____
6. _____
7. _____
8. _____
9. _____
10. _____
11. _____
12. _____
13. _____
14. _____
15. _____



Bestimme das Volumen jedes rechteckigen Körpers. Denke daran, dass $V = \text{Länge} \times \text{Breite} \times \text{Höhe}$ ist. Einheiten sind in cm und nicht maßstabsgerecht.



Antworten

1. 72 cm³

2. 90 cm³

3. 294 cm³

4. 378 cm³

5. 648 cm³

6. 576 cm³

7. 294 cm³

8. 21 cm³

9. 378 cm³

10. 336 cm³

11. 504 cm³

12. 288 cm³

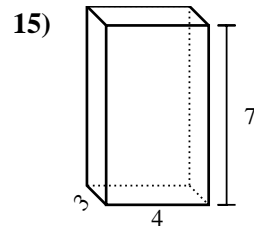
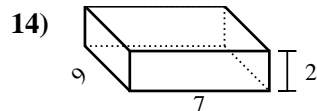
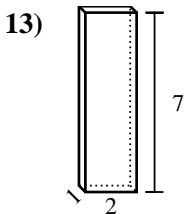
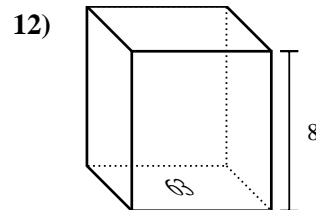
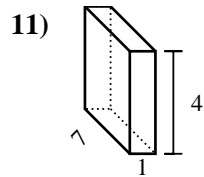
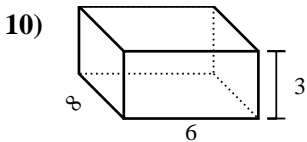
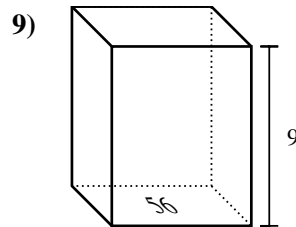
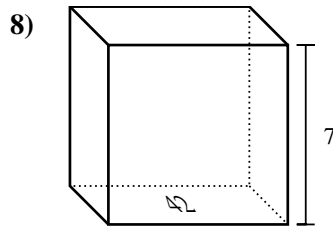
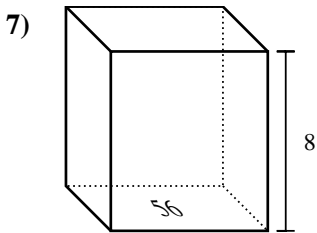
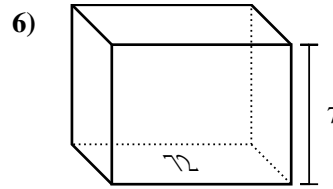
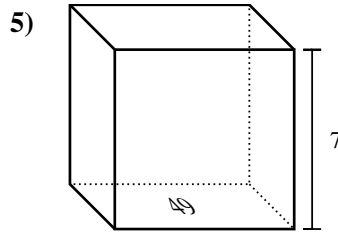
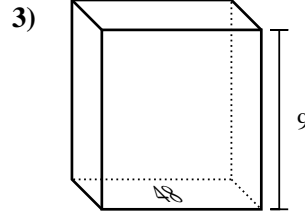
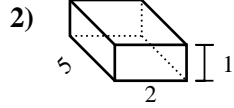
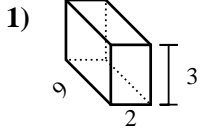
13. 378 cm³

14. 378 cm³

15. 126 cm³



Bestimme das Volumen jedes rechteckigen Körpers. Denke daran, dass $V = \text{Länge} \times \text{Breite} \times \text{Höhe}$ ist. Einheiten sind in cm und nicht maßstabsgerecht.

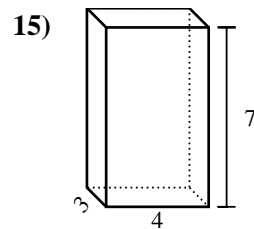
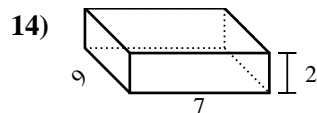
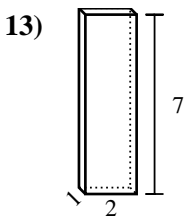
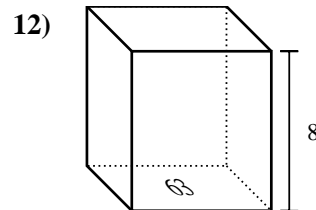
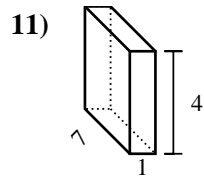
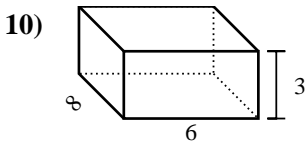
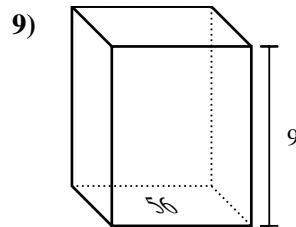
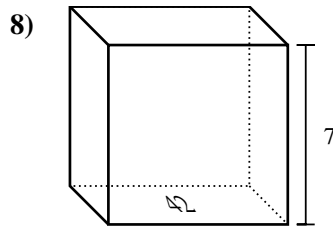
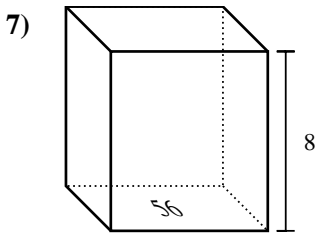
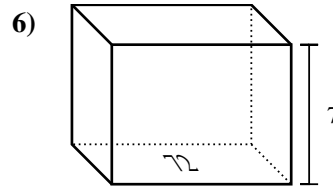
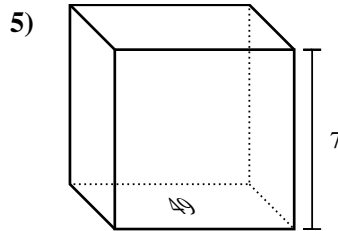
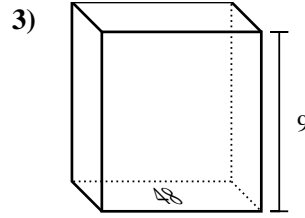
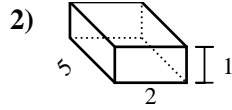
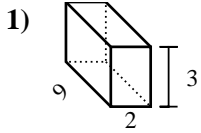


Antworten

1. _____
2. _____
3. _____
4. _____
5. _____
6. _____
7. _____
8. _____
9. _____
10. _____
11. _____
12. _____
13. _____
14. _____
15. _____



Bestimme das Volumen jedes rechteckigen Körpers. Denke daran, dass $V = \text{Länge} \times \text{Breite} \times \text{Höhe}$ ist. Einheiten sind in cm und nicht maßstabsgerecht.



Antworten

1. 54 cm³

2. 10 cm³

3. 432 cm³

4. 6 cm³

5. 343 cm³

6. 504 cm³

7. 448 cm³

8. 294 cm³

9. 504 cm³

10. 144 cm³

11. 28 cm³

12. 504 cm³

13. 14 cm³

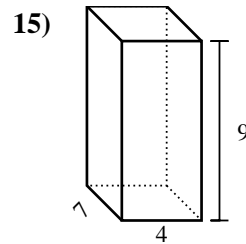
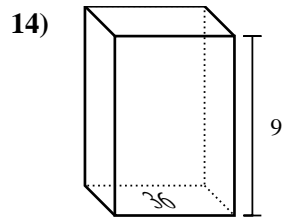
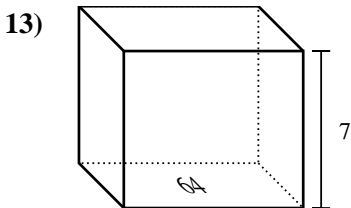
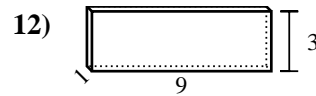
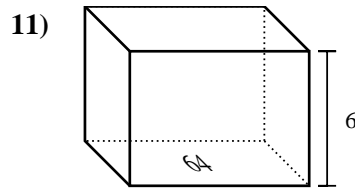
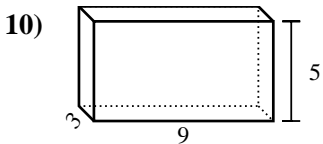
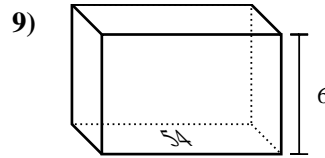
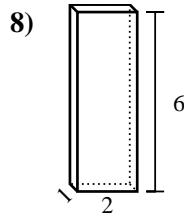
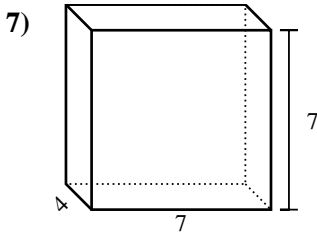
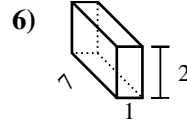
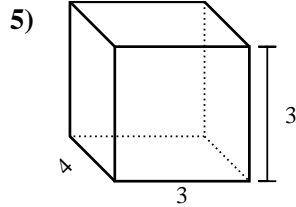
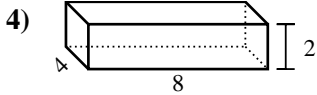
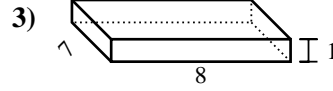
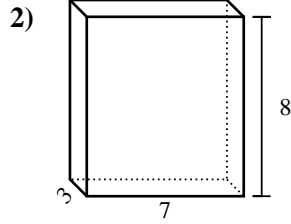
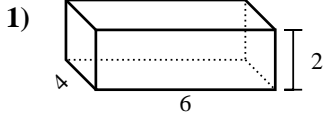
14. 126 cm³

15. 84 cm³



Bestimme das Volumen jedes rechteckigen Körpers. Denke daran, dass $V = \text{Länge} \times \text{Breite} \times \text{Höhe}$ ist. Einheiten sind in cm und nicht maßstabsgerecht.

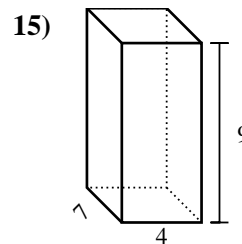
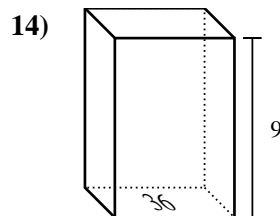
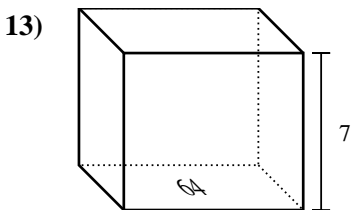
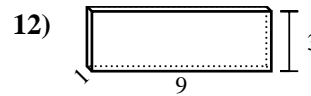
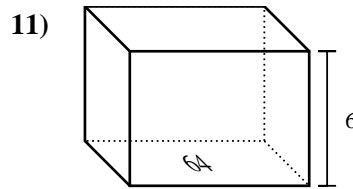
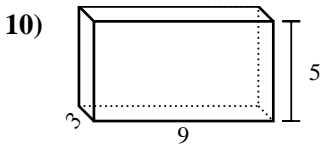
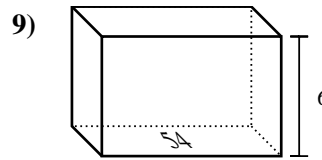
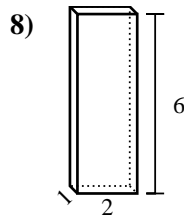
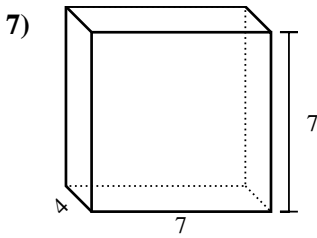
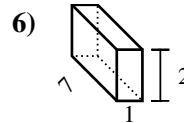
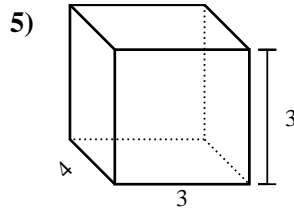
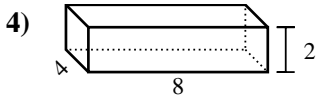
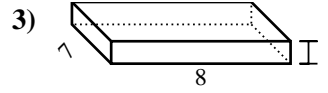
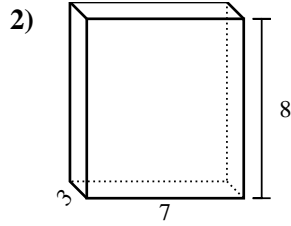
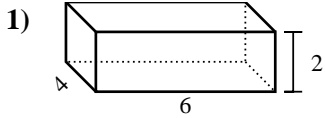
Antworten



1. _____
2. _____
3. _____
4. _____
5. _____
6. _____
7. _____
8. _____
9. _____
10. _____
11. _____
12. _____
13. _____
14. _____
15. _____



Bestimme das Volumen jedes rechteckigen Körpers. Denke daran, dass $V = \text{Länge} \times \text{Breite} \times \text{Höhe}$ ist. Einheiten sind in cm und nicht maßstabsgerecht.



Antworten

1. 48 cm³

2. 168 cm³

3. 56 cm³

4. 64 cm³

5. 36 cm³

6. 14 cm³

7. 196 cm³

8. 12 cm³

9. 324 cm³

10. 135 cm³

11. 384 cm³

12. 27 cm³

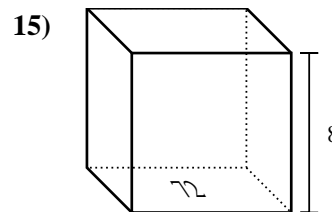
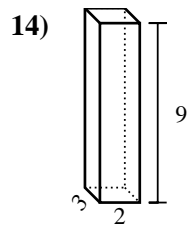
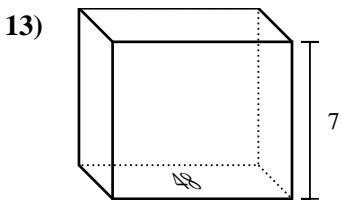
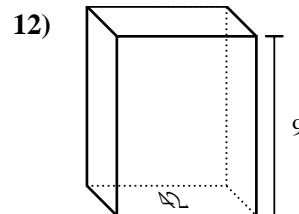
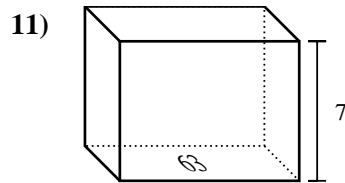
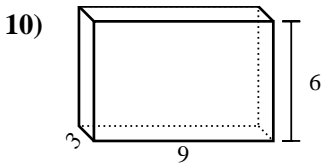
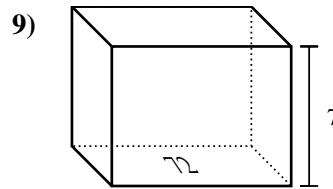
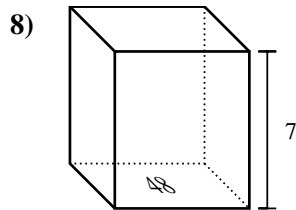
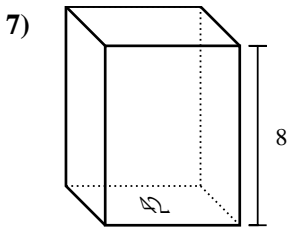
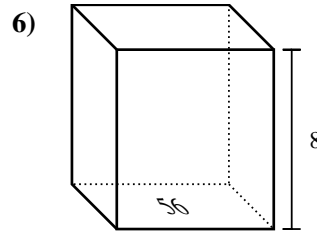
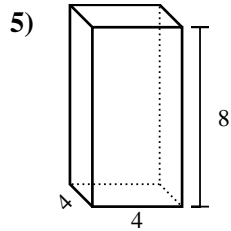
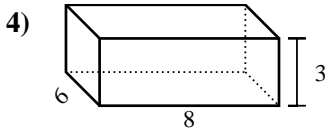
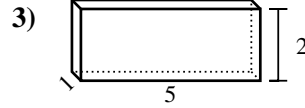
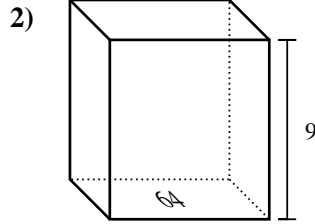
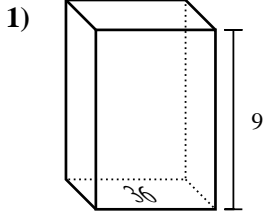
13. 448 cm³

14. 324 cm³

15. 252 cm³



Bestimme das Volumen jedes rechteckigen Körpers. Denke daran, dass $V = \text{Länge} \times \text{Breite} \times \text{Höhe}$ ist. Einheiten sind in cm und nicht maßstabsgerecht.

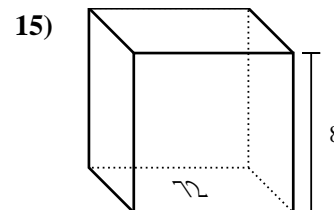
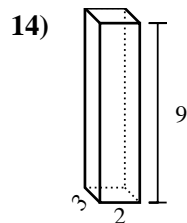
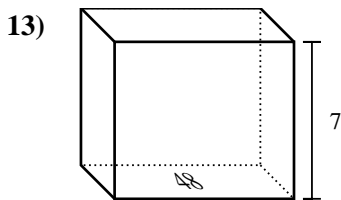
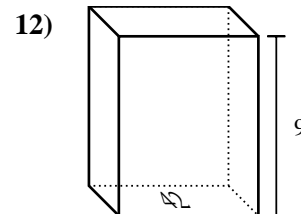
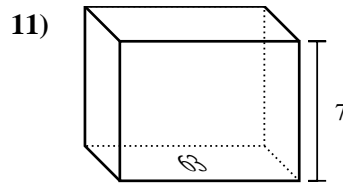
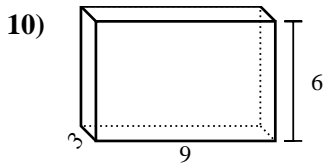
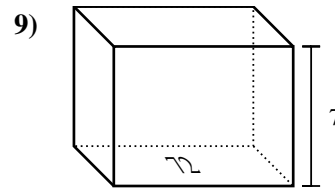
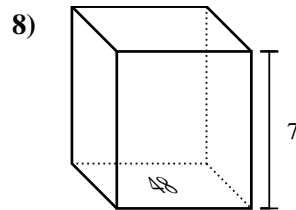
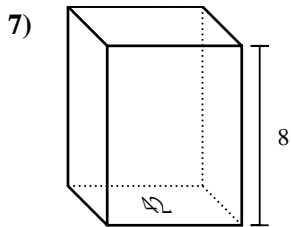
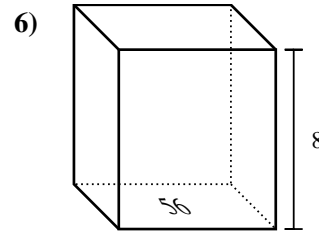
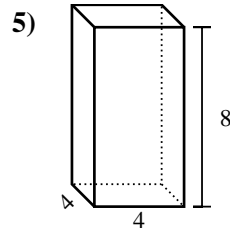
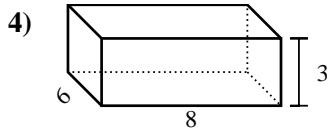
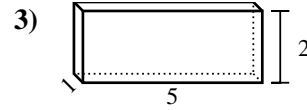
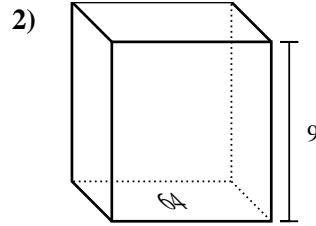
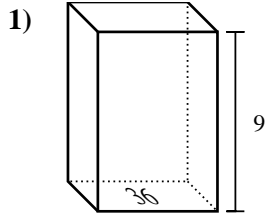


Antworten

1. _____
2. _____
3. _____
4. _____
5. _____
6. _____
7. _____
8. _____
9. _____
10. _____
11. _____
12. _____
13. _____
14. _____
15. _____



Bestimme das Volumen jedes rechteckigen Körpers. Denke daran, dass $V = \text{Länge} \times \text{Breite} \times \text{Höhe}$ ist. Einheiten sind in cm und nicht maßstabsgerecht.



Antworten

1. 324 cm³

2. 576 cm³

3. 10 cm³

4. 144 cm³

5. 128 cm³

6. 448 cm³

7. 336 cm³

8. 336 cm³

9. 504 cm³

10. 162 cm³

11. 441 cm³

12. 378 cm³

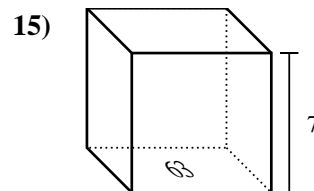
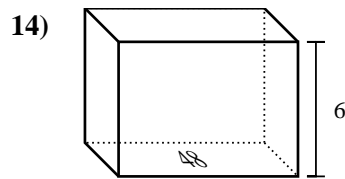
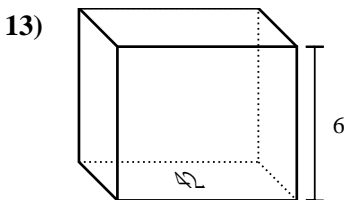
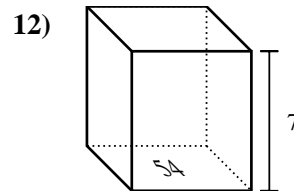
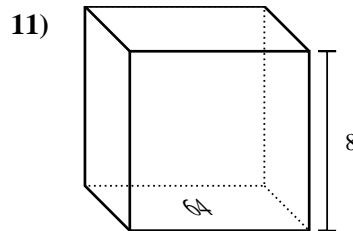
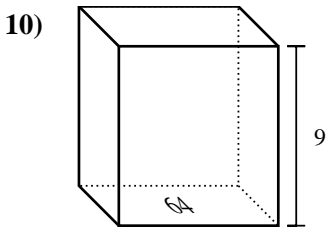
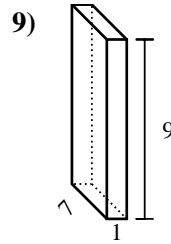
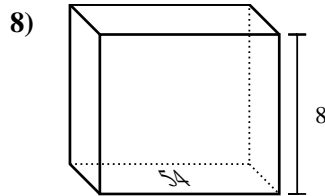
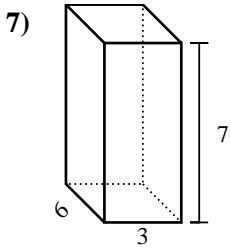
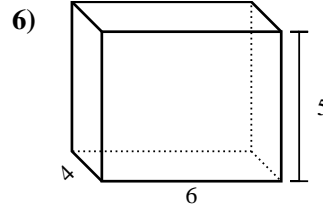
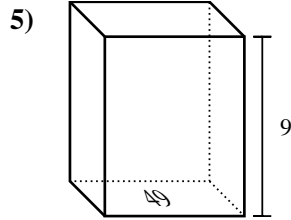
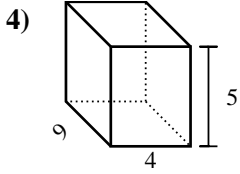
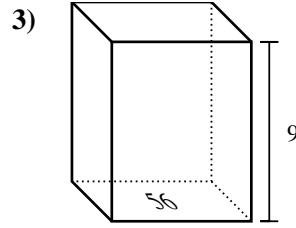
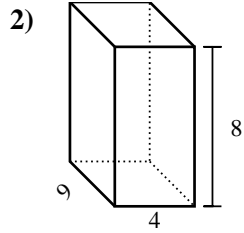
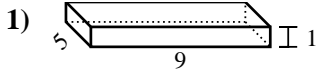
13. 336 cm³

14. 54 cm³

15. 576 cm³



Bestimme das Volumen jedes rechteckigen Körpers. Denke daran, dass $V = \text{Länge} \times \text{Breite} \times \text{Höhe}$ ist. Einheiten sind in cm und nicht maßstabsgerecht.

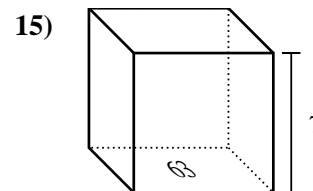
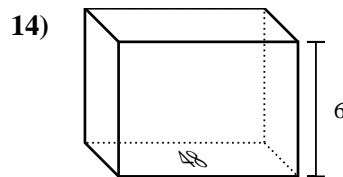
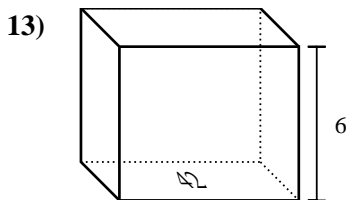
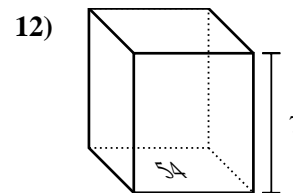
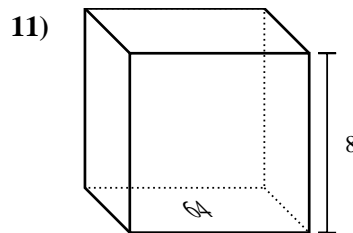
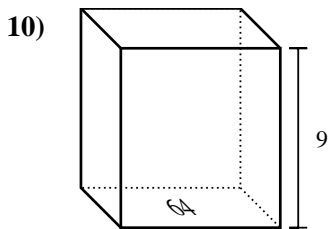
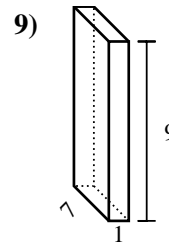
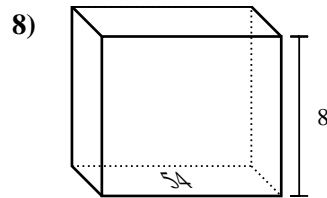
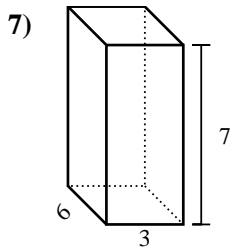
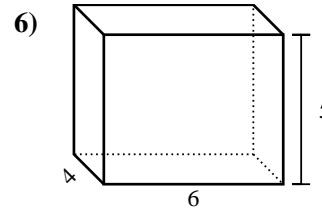
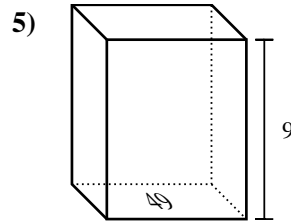
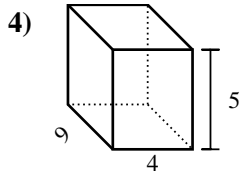
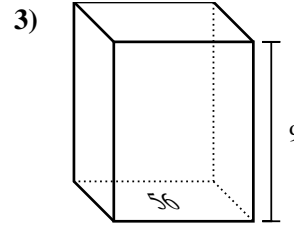
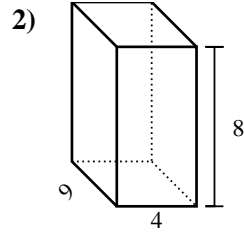
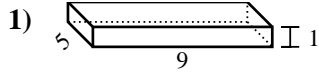


Antworten

1. _____
2. _____
3. _____
4. _____
5. _____
6. _____
7. _____
8. _____
9. _____
10. _____
11. _____
12. _____
13. _____
14. _____
15. _____



Bestimme das Volumen jedes rechteckigen Körpers. Denke daran, dass $V = \text{Länge} \times \text{Breite} \times \text{Höhe}$ ist. Einheiten sind in cm und nicht maßstabsgerecht.



Antworten

1. 45 cm³

2. 288 cm³

3. 504 cm³

4. 180 cm³

5. 441 cm³

6. 120 cm³

7. 126 cm³

8. 432 cm³

9. 63 cm³

10. 576 cm³

11. 512 cm³

12. 378 cm³

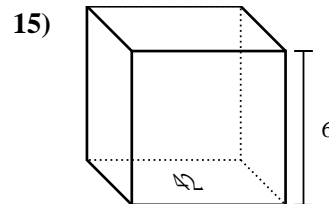
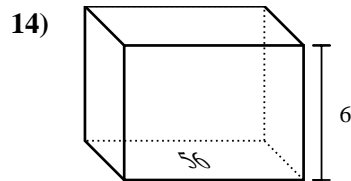
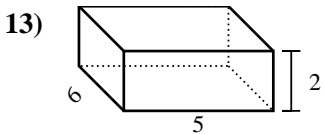
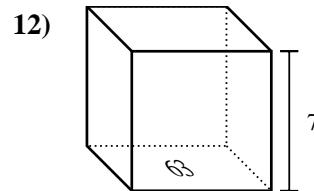
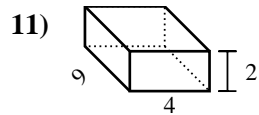
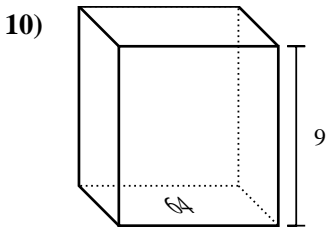
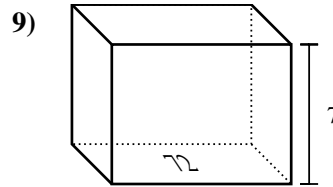
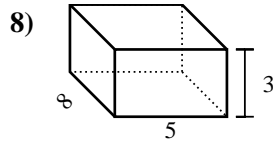
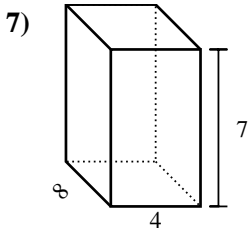
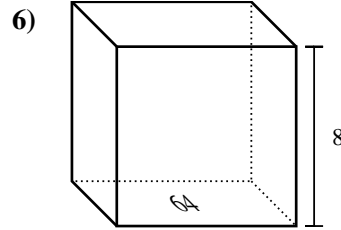
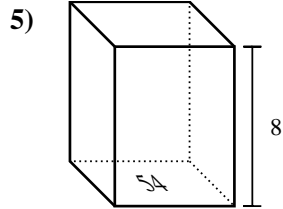
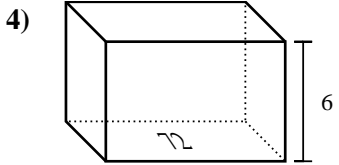
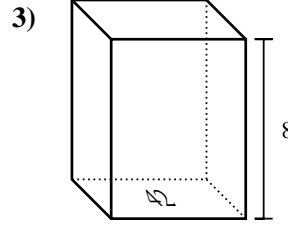
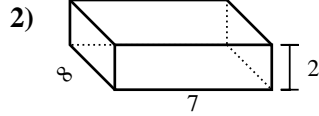
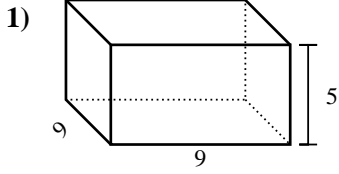
13. 252 cm³

14. 288 cm³

15. 441 cm³



Bestimme das Volumen jedes rechteckigen Körpers. Denke daran, dass $V = \text{Länge} \times \text{Breite} \times \text{Höhe}$ ist. Einheiten sind in cm und nicht maßstabsgerecht.



Antworten

1. _____

2. _____

3. _____

4. _____

5. _____

6. _____

7. _____

8. _____

9. _____

10. _____

11. _____

12. _____

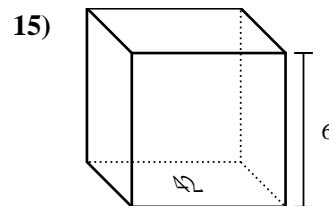
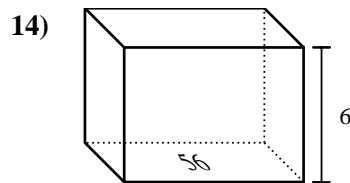
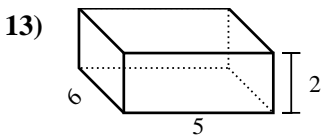
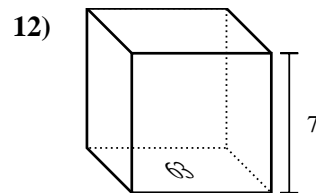
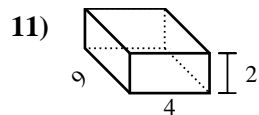
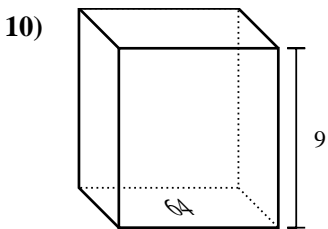
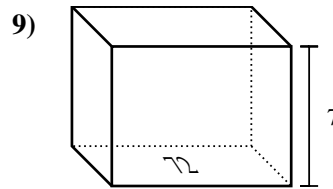
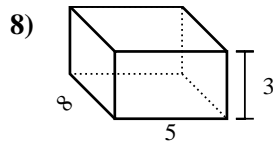
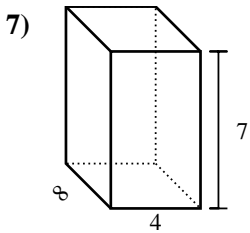
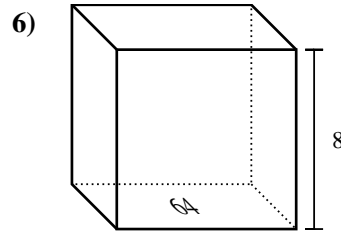
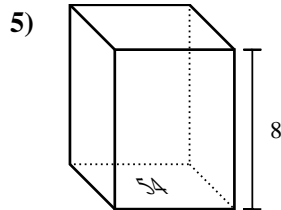
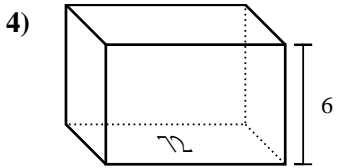
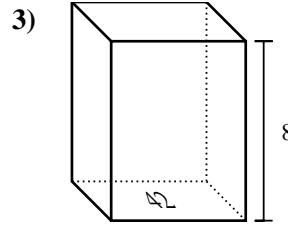
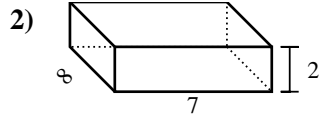
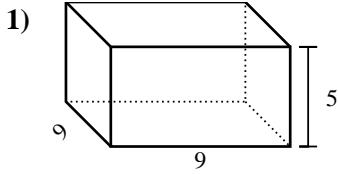
13. _____

14. _____

15. _____



Bestimme das Volumen jedes rechteckigen Körpers. Denke daran, dass $V = \text{Länge} \times \text{Breite} \times \text{Höhe}$ ist. Einheiten sind in cm und nicht maßstabsgerecht.

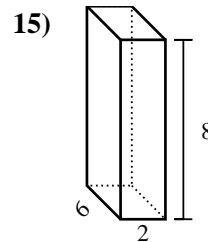
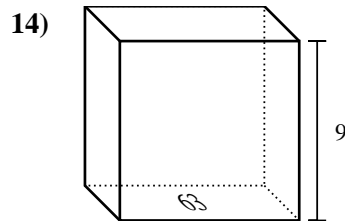
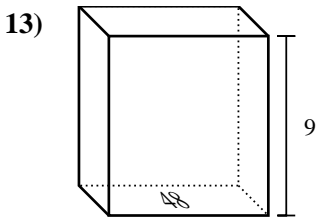
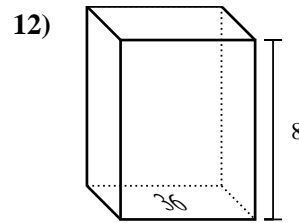
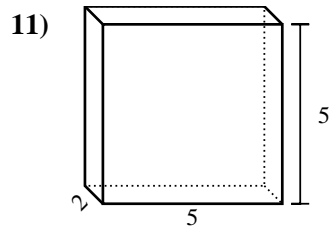
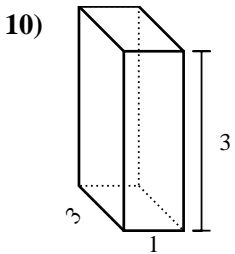
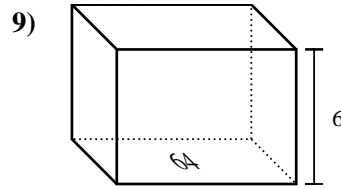
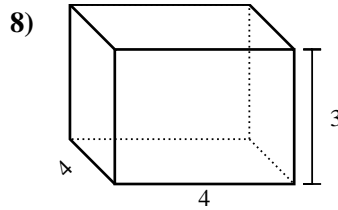
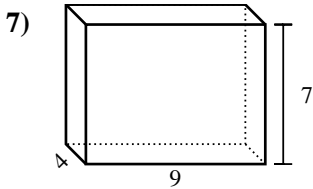
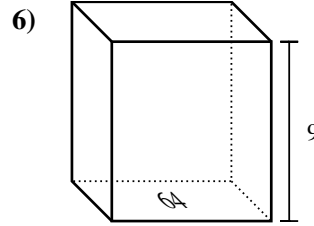
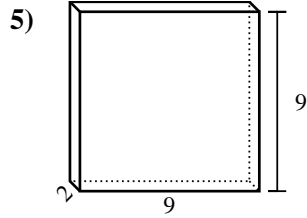
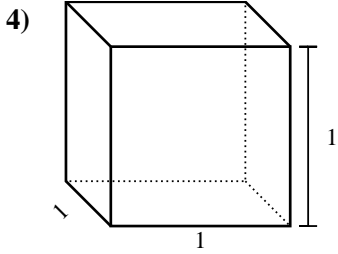
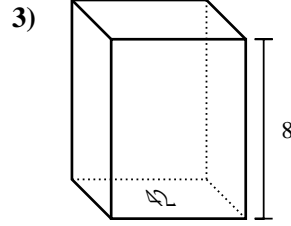
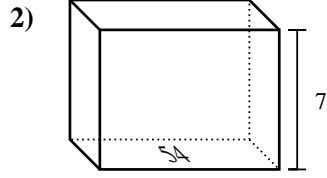
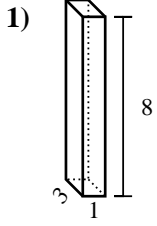


Antworten

1. 405 cm³
2. 112 cm³
3. 336 cm³
4. 432 cm³
5. 432 cm³
6. 512 cm³
7. 224 cm³
8. 120 cm³
9. 504 cm³
10. 576 cm³
11. 72 cm³
12. 441 cm³
13. 60 cm³
14. 336 cm³
15. 252 cm³



Bestimme das Volumen jedes rechteckigen Körpers. Denke daran, dass $V = \text{Länge} \times \text{Breite} \times \text{Höhe}$ ist. Einheiten sind in cm und nicht maßstabsgerecht.

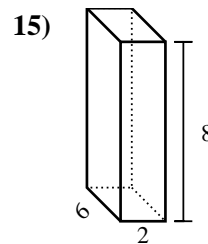
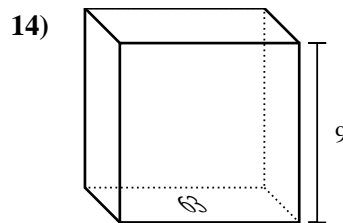
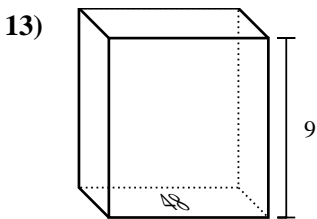
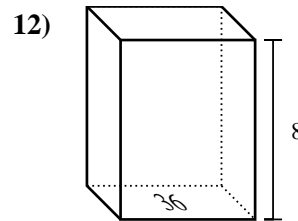
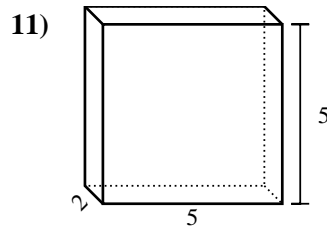
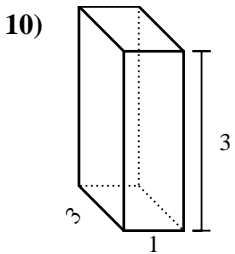
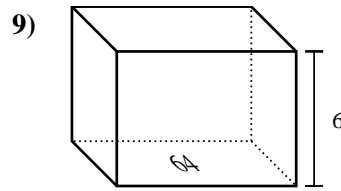
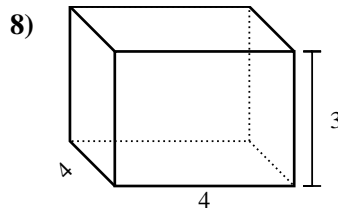
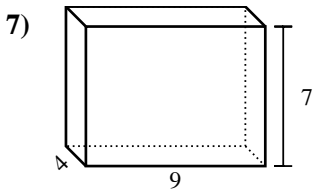
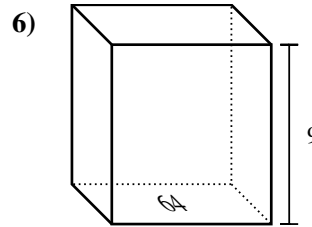
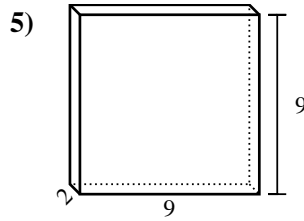
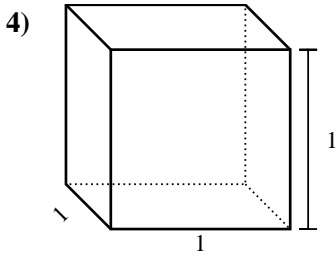
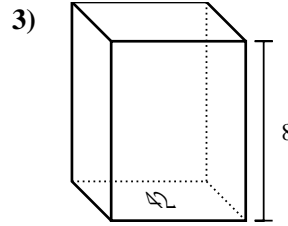
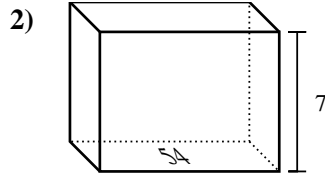
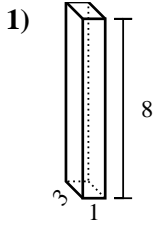


Antworten

1. _____
2. _____
3. _____
4. _____
5. _____
6. _____
7. _____
8. _____
9. _____
10. _____
11. _____
12. _____
13. _____
14. _____
15. _____



Bestimme das Volumen jedes rechteckigen Körpers. Denke daran, dass $V = \text{Länge} \times \text{Breite} \times \text{Höhe}$ ist. Einheiten sind in cm und nicht maßstabsgerecht.



Antworten

1. 24 cm³

2. 378 cm³

3. 336 cm³

4. 1 cm³

5. 162 cm³

6. 576 cm³

7. 252 cm³

8. 48 cm³

9. 384 cm³

10. 9 cm³

11. 50 cm³

12. 288 cm³

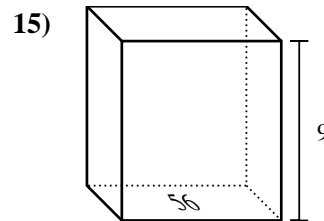
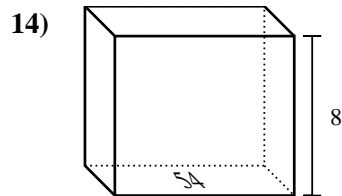
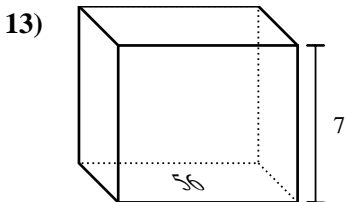
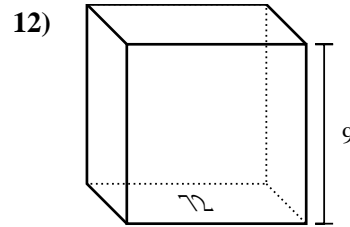
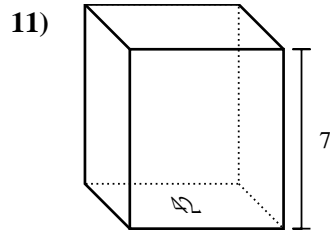
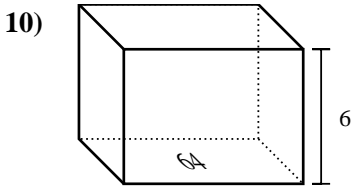
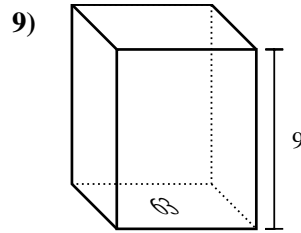
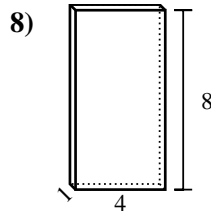
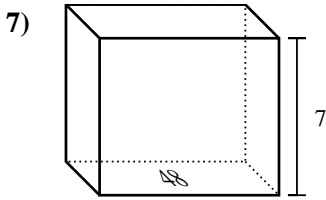
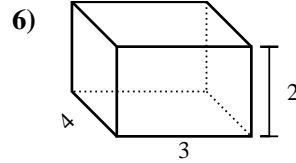
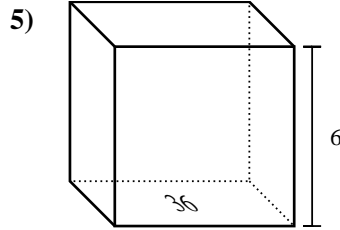
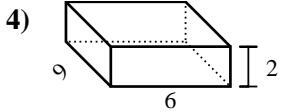
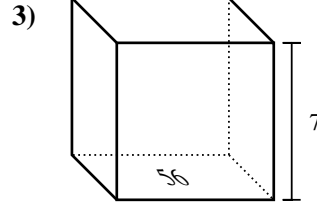
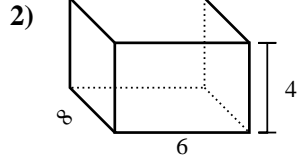
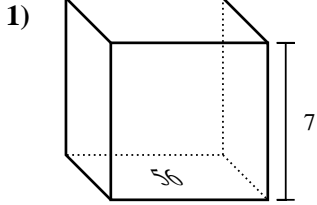
13. 432 cm³

14. 567 cm³

15. 96 cm³



Bestimme das Volumen jedes rechteckigen Körpers. Denke daran, dass $V = \text{Länge} \times \text{Breite} \times \text{Höhe}$ ist. Einheiten sind in cm und nicht maßstabsgerecht.

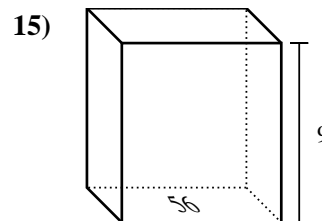
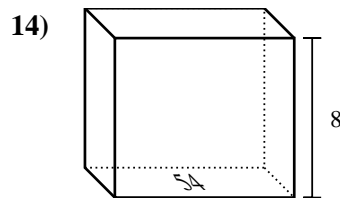
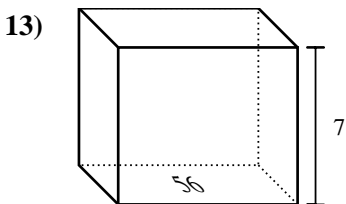
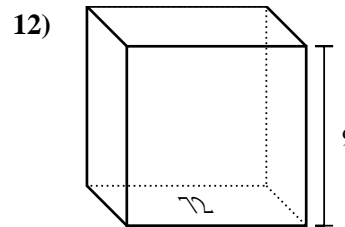
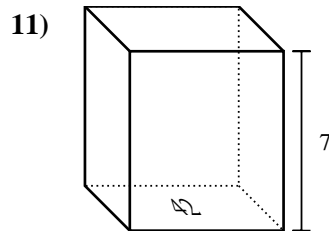
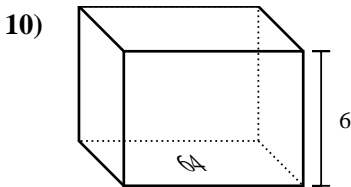
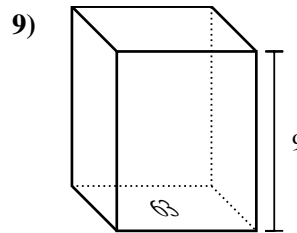
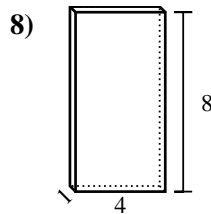
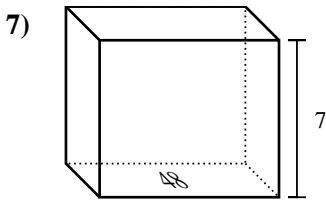
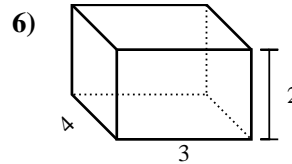
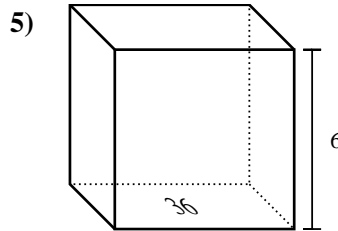
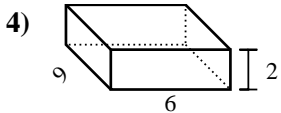
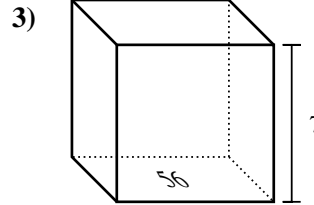
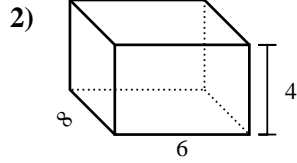
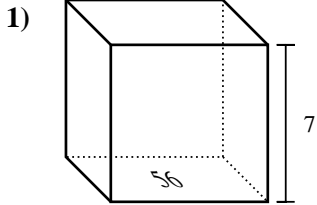


Antworten

1. _____
2. _____
3. _____
4. _____
5. _____
6. _____
7. _____
8. _____
9. _____
10. _____
11. _____
12. _____
13. _____
14. _____
15. _____



Bestimme das Volumen jedes rechteckigen Körpers. Denke daran, dass $V = \text{Länge} \times \text{Breite} \times \text{Höhe}$ ist. Einheiten sind in cm und nicht maßstabsgerecht.



Antworten

1. 392 cm³

2. 192 cm³

3. 392 cm³

4. 108 cm³

5. 216 cm³

6. 24 cm³

7. 336 cm³

8. 32 cm³

9. 567 cm³

10. 384 cm³

11. 294 cm³

12. 648 cm³

13. 392 cm³

14. 432 cm³

15. 504 cm³

