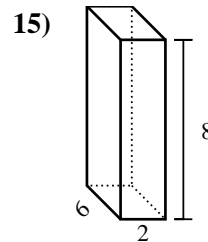
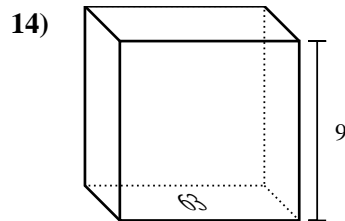
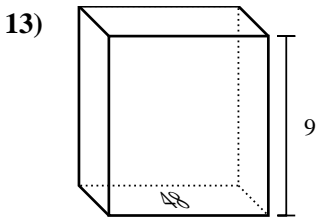
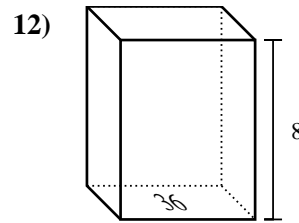
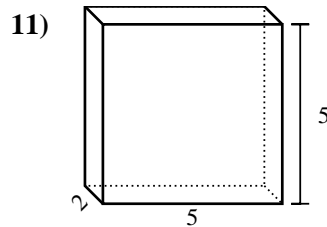
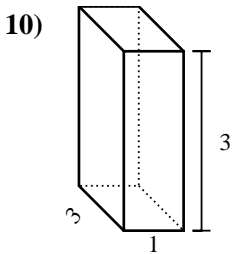
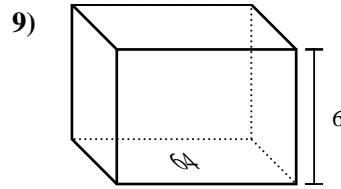
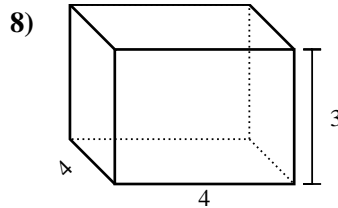
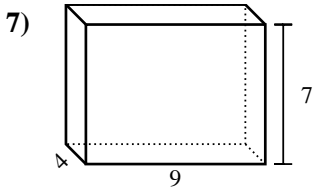
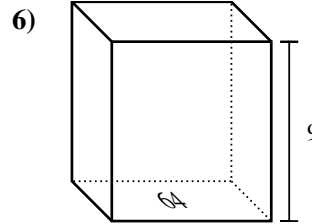
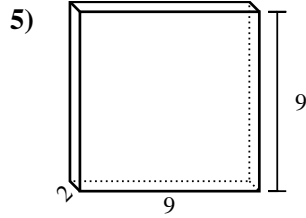
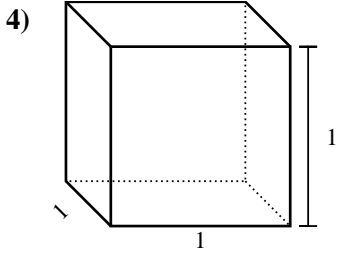
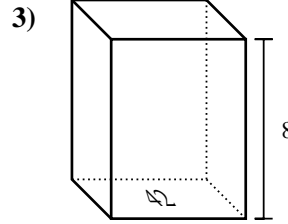
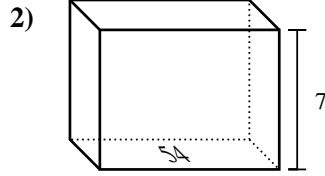
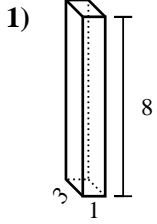




Bestimme das Volumen jedes rechteckigen Körpers. Denke daran, dass $V = \text{Länge} \times \text{Breite} \times \text{Höhe}$ ist. Einheiten sind in cm und nicht maßstabsgerecht.

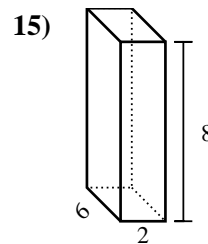
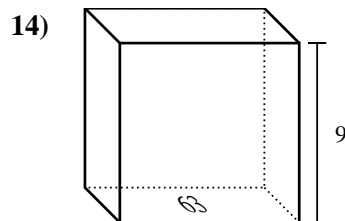
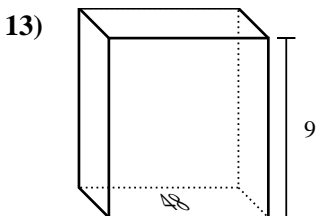
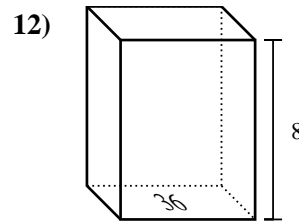
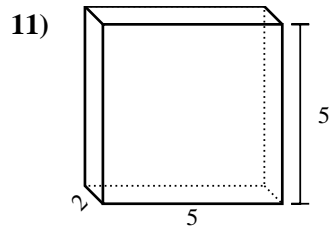
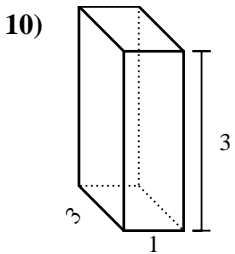
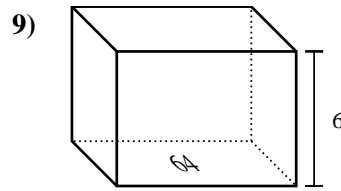
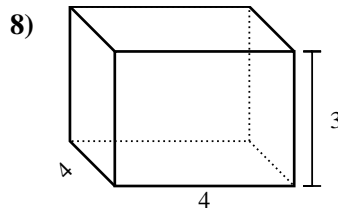
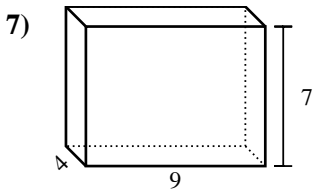
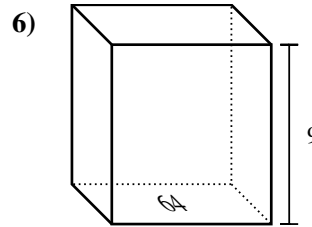
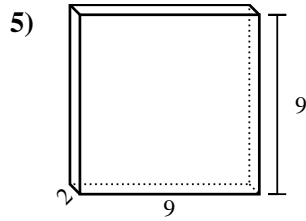
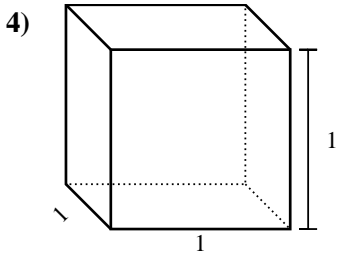
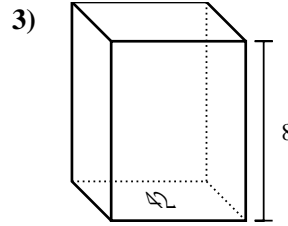
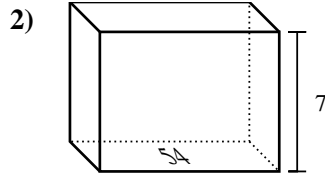
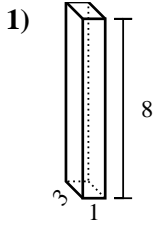
Antworten



1. _____
2. _____
3. _____
4. _____
5. _____
6. _____
7. _____
8. _____
9. _____
10. _____
11. _____
12. _____
13. _____
14. _____
15. _____



Bestimme das Volumen jedes rechteckigen Körpers. Denke daran, dass $V = \text{Länge} \times \text{Breite} \times \text{Höhe}$ ist. Einheiten sind in cm und nicht maßstabsgerecht.



Antworten

1. 24 cm³

2. 378 cm³

3. 336 cm³

4. 1 cm³

5. 162 cm³

6. 576 cm³

7. 252 cm³

8. 48 cm³

9. 384 cm³

10. 9 cm³

11. 50 cm³

12. 288 cm³

13. 432 cm³

14. 567 cm³

15. 96 cm³