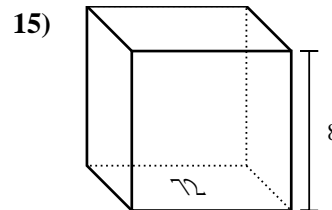
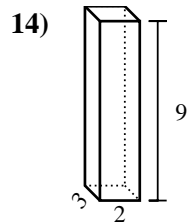
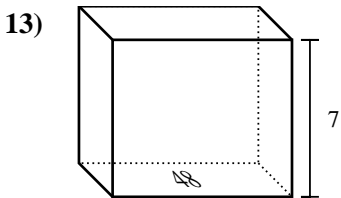
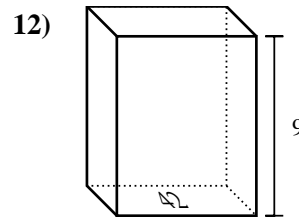
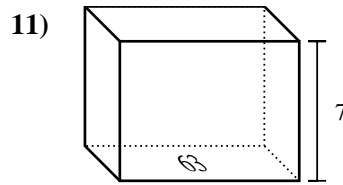
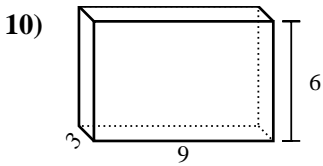
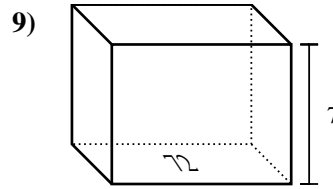
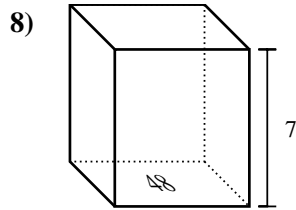
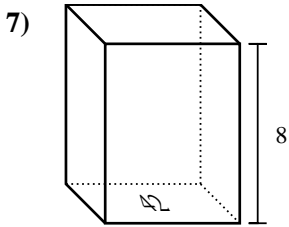
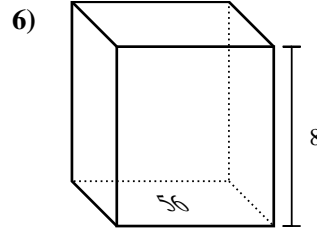
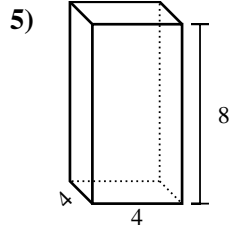
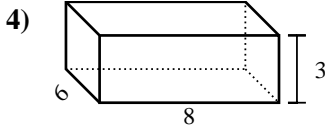
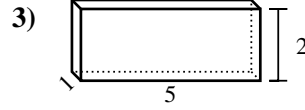
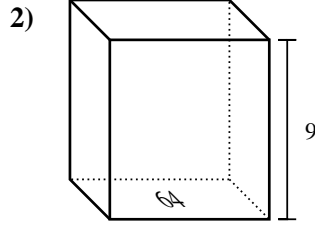
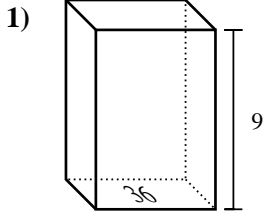




Bestimme das Volumen jedes rechteckigen Körpers. Denke daran, dass $V = \text{Länge} \times \text{Breite} \times \text{Höhe}$ ist. Einheiten sind in cm und nicht maßstabsgerecht.

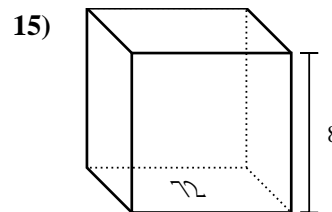
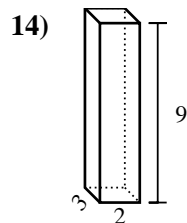
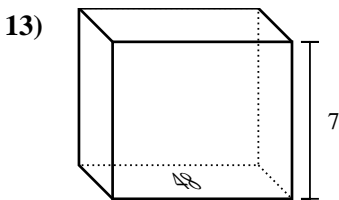
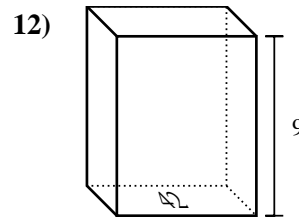
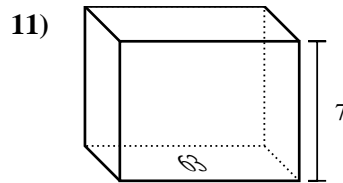
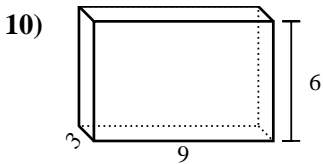
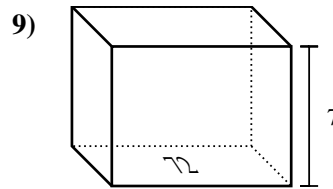
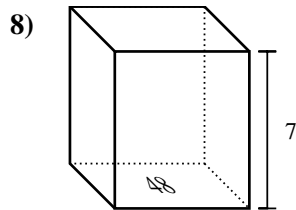
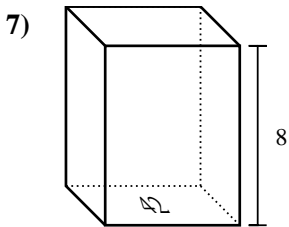
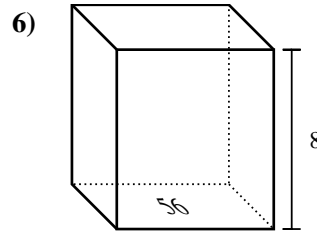
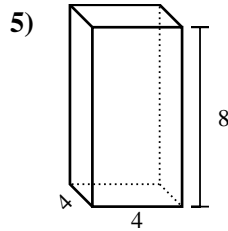
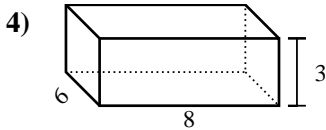
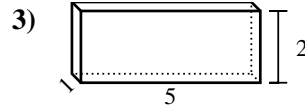
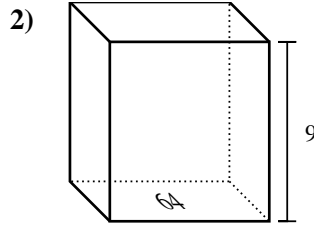
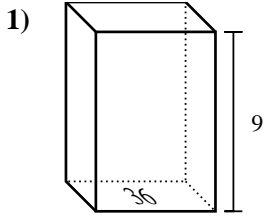


Antworten

1. _____
2. _____
3. _____
4. _____
5. _____
6. _____
7. _____
8. _____
9. _____
10. _____
11. _____
12. _____
13. _____
14. _____
15. _____



Bestimme das Volumen jedes rechteckigen Körpers. Denke daran, dass $V = \text{Länge} \times \text{Breite} \times \text{Höhe}$ ist. Einheiten sind in cm und nicht maßstabsgerecht.



Antworten

1. 324 cm³

2. 576 cm³

3. 10 cm³

4. 144 cm³

5. 128 cm³

6. 448 cm³

7. 336 cm³

8. 336 cm³

9. 504 cm³

10. 162 cm³

11. 441 cm³

12. 378 cm³

13. 336 cm³

14. 54 cm³

15. 576 cm³