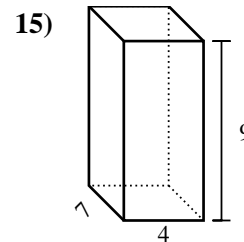
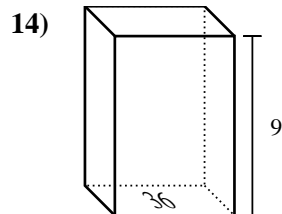
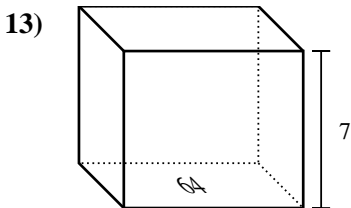
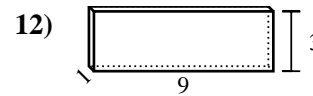
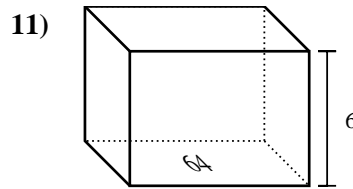
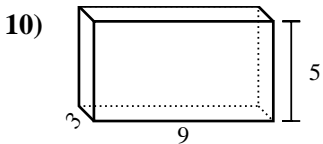
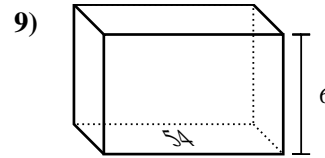
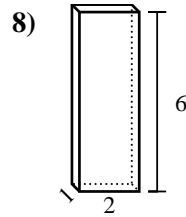
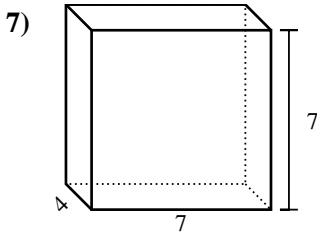
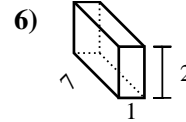
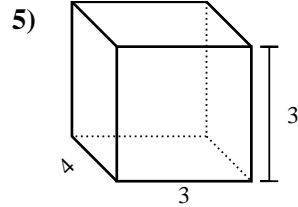
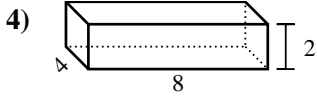
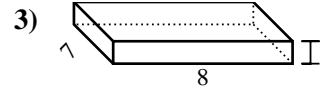
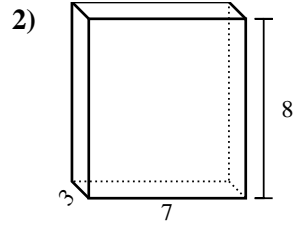
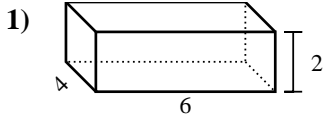




Bestimme das Volumen jedes rechteckigen Körpers. Denke daran, dass $V = \text{Länge} \times \text{Breite} \times \text{Höhe}$ ist. Einheiten sind in cm und nicht maßstabsgerecht.

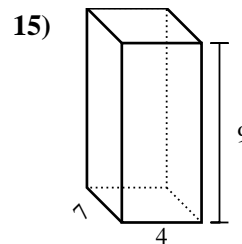
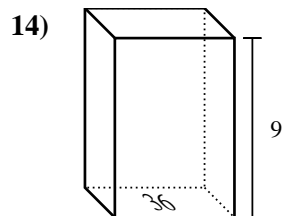
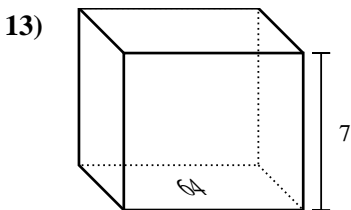
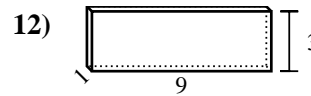
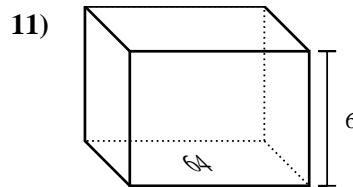
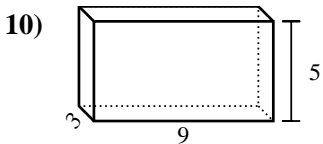
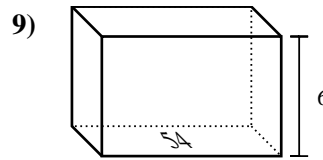
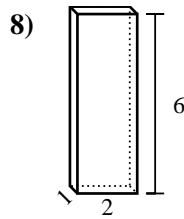
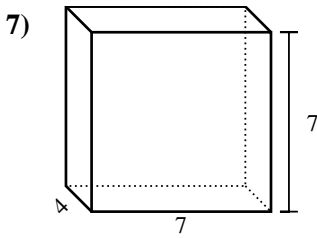
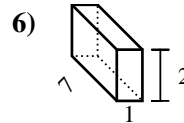
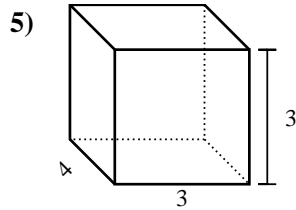
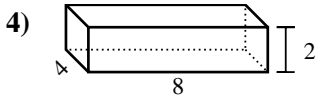
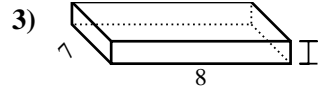
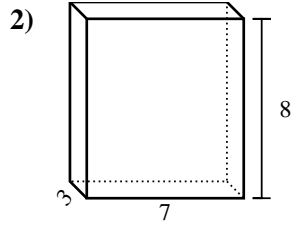
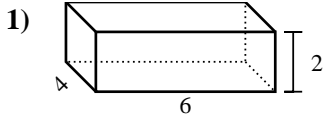


Antworten

- 1. _____
- 2. _____
- 3. _____
- 4. _____
- 5. _____
- 6. _____
- 7. _____
- 8. _____
- 9. _____
- 10. _____
- 11. _____
- 12. _____
- 13. _____
- 14. _____
- 15. _____



Bestimme das Volumen jedes rechteckigen Körpers. Denke daran, dass $V = \text{Länge} \times \text{Breite} \times \text{Höhe}$ ist. Einheiten sind in cm und nicht maßstabsgerecht.



Antworten

1. 48 cm³

2. 168 cm³

3. 56 cm³

4. 64 cm³

5. 36 cm³

6. 14 cm³

7. 196 cm³

8. 12 cm³

9. 324 cm³

10. 135 cm³

11. 384 cm³

12. 27 cm³

13. 448 cm³

14. 324 cm³

15. 252 cm³