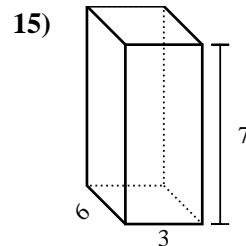
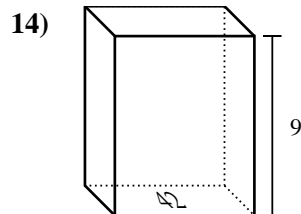
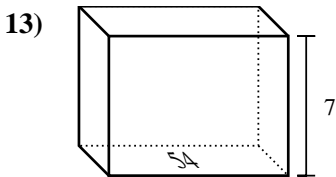
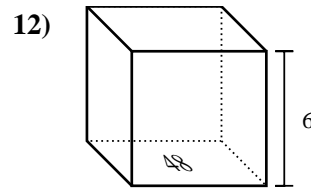
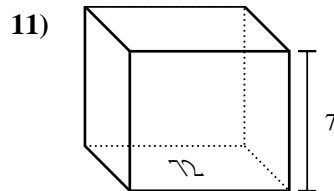
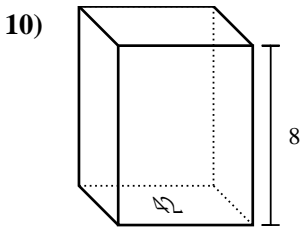
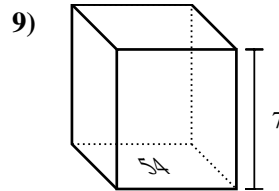
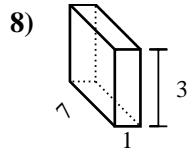
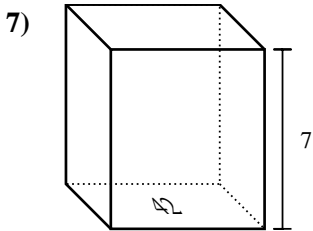
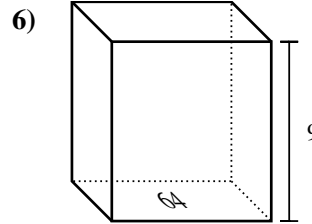
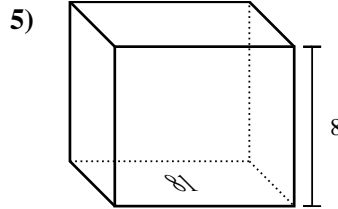
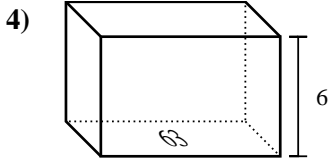
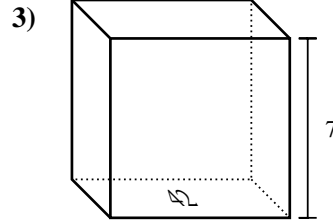
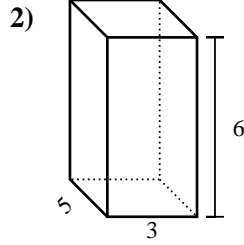
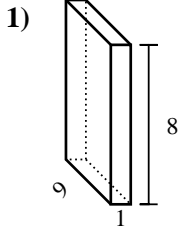




Bestimme das Volumen jedes rechteckigen Körpers. Denke daran, dass $V = \text{Länge} \times \text{Breite} \times \text{Höhe}$ ist. Einheiten sind in cm und nicht maßstabsgerecht.

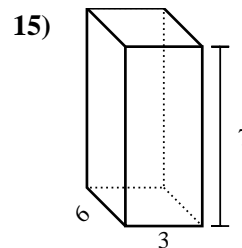
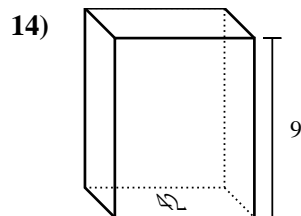
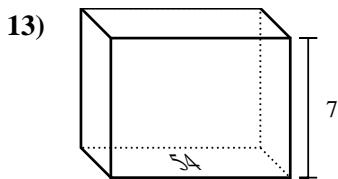
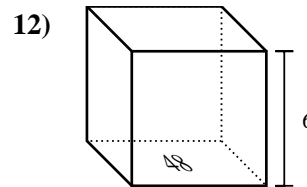
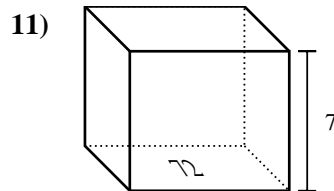
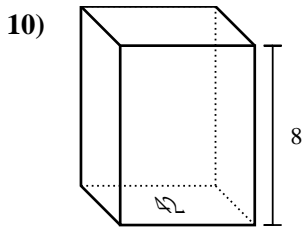
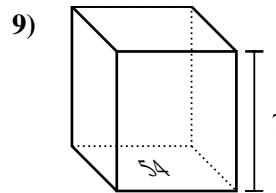
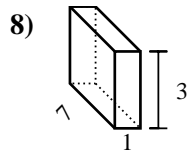
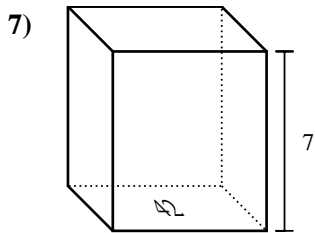
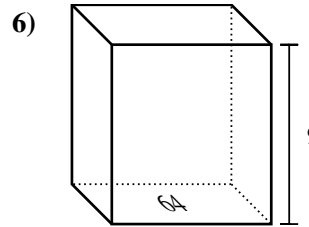
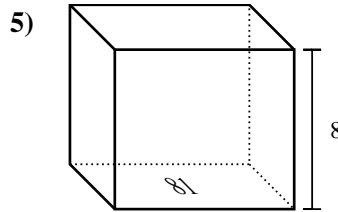
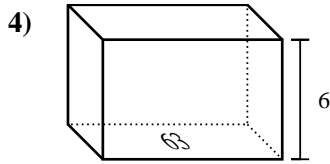
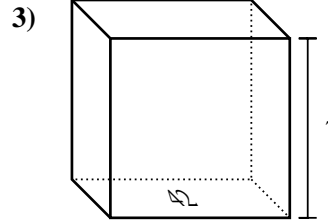
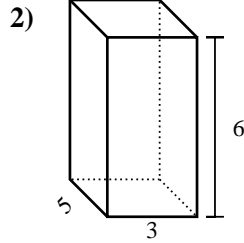
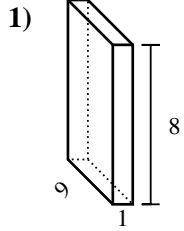


Antworten

1. _____
2. _____
3. _____
4. _____
5. _____
6. _____
7. _____
8. _____
9. _____
10. _____
11. _____
12. _____
13. _____
14. _____
15. _____



Bestimme das Volumen jedes rechteckigen Körpers. Denke daran, dass $V = \text{Länge} \times \text{Breite} \times \text{Höhe}$ ist. Einheiten sind in cm und nicht maßstabsgerecht.



Antworten

1. 72 cm³

2. 90 cm³

3. 294 cm³

4. 378 cm³

5. 648 cm³

6. 576 cm³

7. 294 cm³

8. 21 cm³

9. 378 cm³

10. 336 cm³

11. 504 cm³

12. 288 cm³

13. 378 cm³

14. 378 cm³

15. 126 cm³