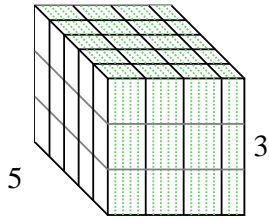


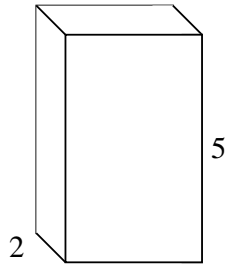


Fülle jede rechteckige Figur mit Würfeln um das Volumen zu bestimmen. Jede Figureinheit ist in cm gemessen (nicht maßstabsgerecht).

Bsp) $3 \frac{3}{5}$



1) $3 \frac{2}{4}$



Antworten

Bsp. 54 cm³

1. _____

2. _____

3. _____

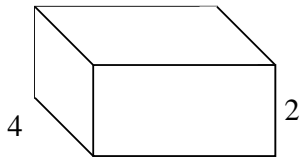
4. _____

5. _____

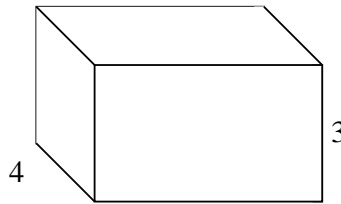
6. _____

7. _____

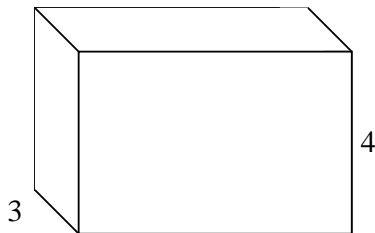
2) $4 \frac{2}{5}$




3) $5 \frac{1}{5}$




4) $6 \frac{2}{3}$



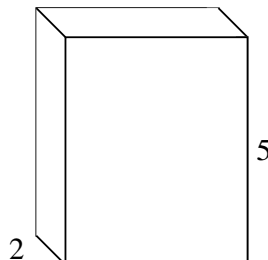
5) $4 \frac{1}{4}$



6) $6 \frac{2}{3}$



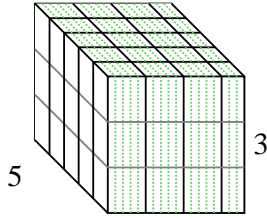
7) $4 \frac{1}{4}$



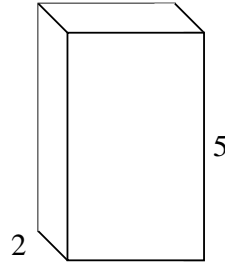


Fülle jede rechteckige Figur mit Würfeln um das Volumen zu bestimmen. Jede Figureinheit ist in cm gemessen (nicht maßstabsgerecht).

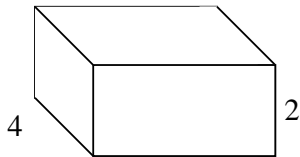
Bsp) $3 \frac{3}{5}$



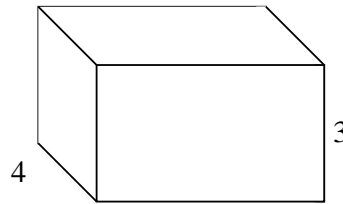
1) $3 \frac{2}{4}$



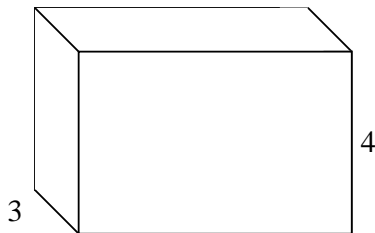
2) $4 \frac{2}{5}$




3) $5 \frac{1}{5}$




4) $6 \frac{2}{3}$



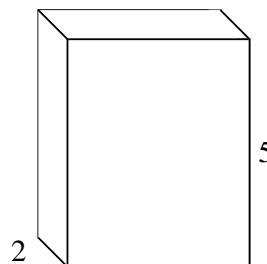
5) $4 \frac{1}{4}$



6) $6 \frac{2}{3}$



7) $4 \frac{1}{4}$



Antworten

Bsp. 54 cm³

1. 35 cm³

2. 35 1/5 cm³

3. 62 2/5 cm³

4. 80 cm³

5. 17 cm³

6. 80 cm³

7. 42 2/4 cm³