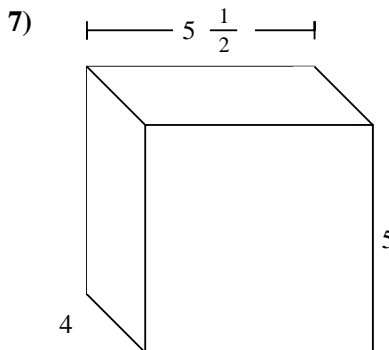
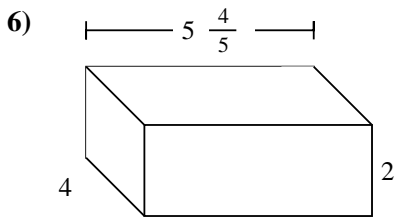
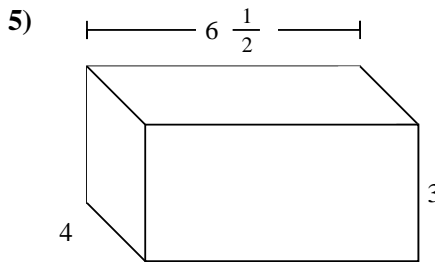
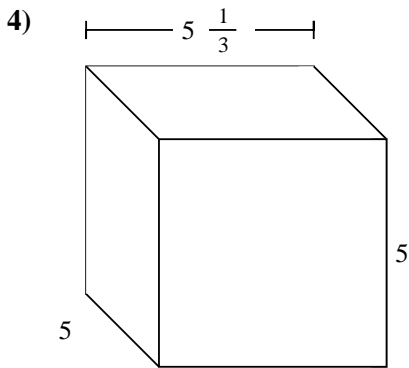
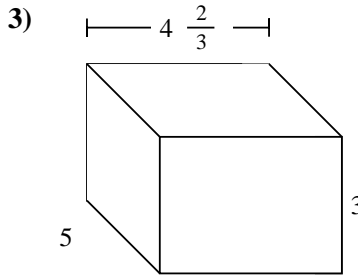
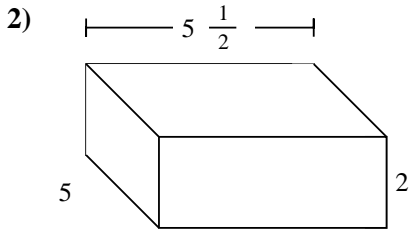
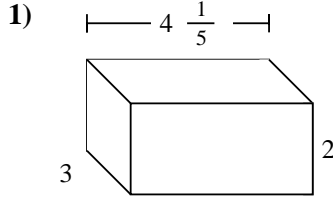
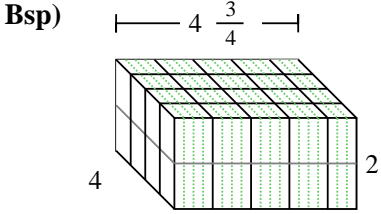




Fülle jede rechteckige Figur mit Würfeln um das Volumen zu bestimmen. Jede Figureinheit ist in cm gemessen (nicht maßstabsgerecht).



Antworten

Bsp. 38 cm<sup>3</sup>

1. \_\_\_\_\_

2. \_\_\_\_\_

3. \_\_\_\_\_

4. \_\_\_\_\_

5. \_\_\_\_\_

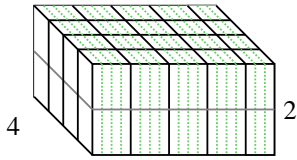
6. \_\_\_\_\_

7. \_\_\_\_\_

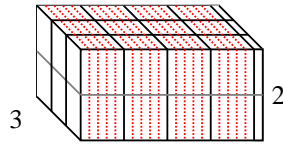


Fülle jede rechteckige Figur mit Würfeln um das Volumen zu bestimmen. Jede Figureinheit ist in cm gemessen (nicht maßstabsgerecht).

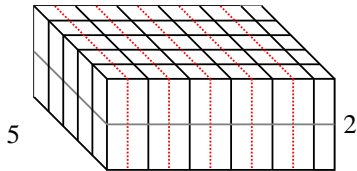
Bsp)  $4 \frac{3}{4}$



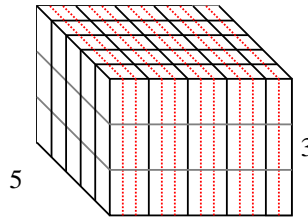
1)  $4 \frac{1}{5}$



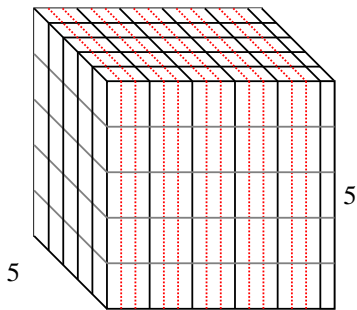
2)  $5 \frac{1}{2}$



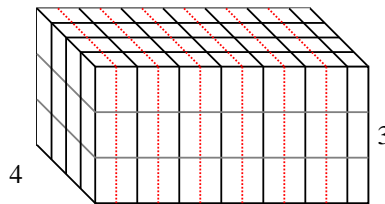
3)  $4 \frac{2}{3}$



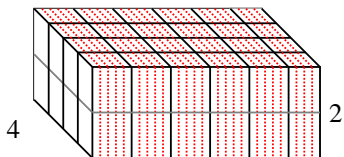
4)  $5 \frac{1}{3}$



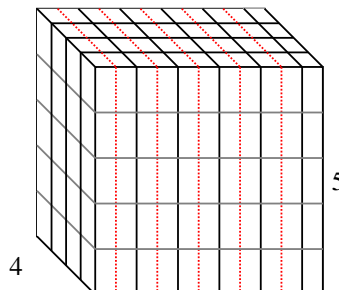
5)  $6 \frac{1}{2}$



6)  $5 \frac{4}{5}$



7)  $5 \frac{1}{2}$



Antworten

Bsp. 38 cm<sup>3</sup>

1. 25 1/5 cm<sup>3</sup>

2. 55 cm<sup>3</sup>

3. 70 cm<sup>3</sup>

4. 133 1/3 cm<sup>3</sup>

5. 78 cm<sup>3</sup>

6. 46 2/5 cm<sup>3</sup>

7. 110 cm<sup>3</sup>