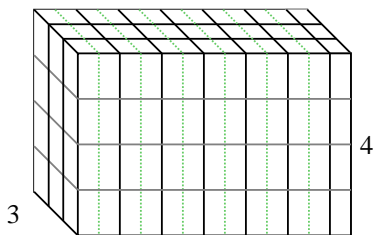


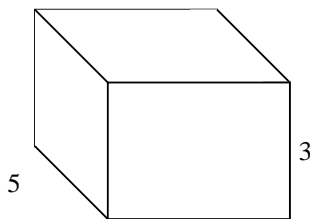


Fülle jede rechteckige Figur mit Würfeln um das Volumen zu bestimmen. Jede Figureinheit ist in cm gemessen (nicht maßstabsgerecht).

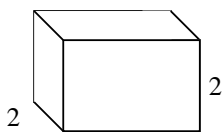
Bsp)  $6 \frac{1}{2}$



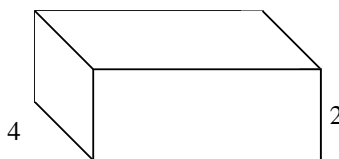
1)  $4 \frac{2}{3}$



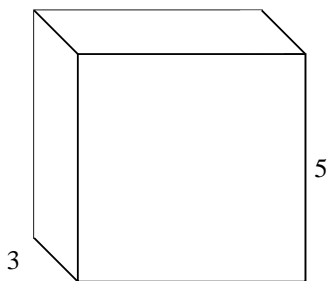
2)  $3 \frac{3}{4}$



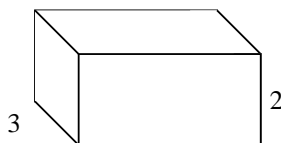
3)  $5 \frac{1}{2}$




4)  $5 \frac{1}{2}$




5)  $4 \frac{2}{3}$



6)  $5 \frac{1}{2}$



7)  $6 \frac{1}{2}$



**Antworten**

Bsp. **78 cm<sup>3</sup>**

1. \_\_\_\_\_

2. \_\_\_\_\_

3. \_\_\_\_\_

4. \_\_\_\_\_

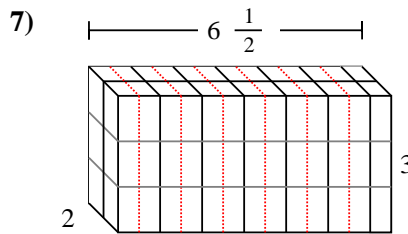
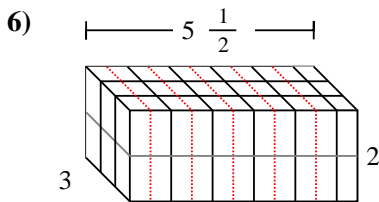
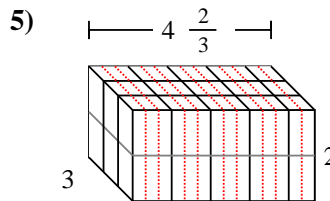
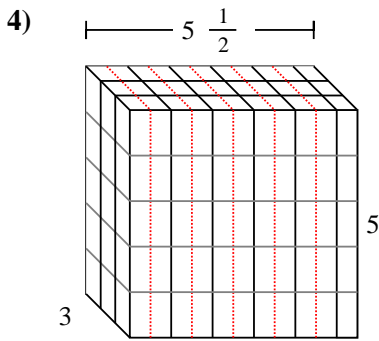
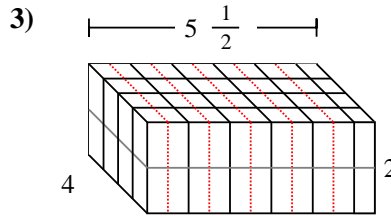
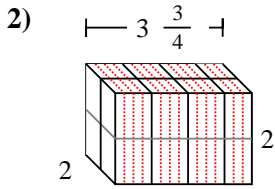
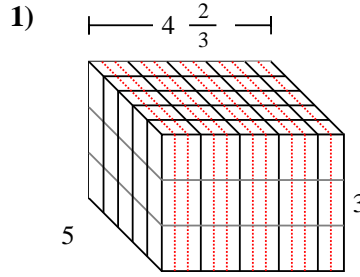
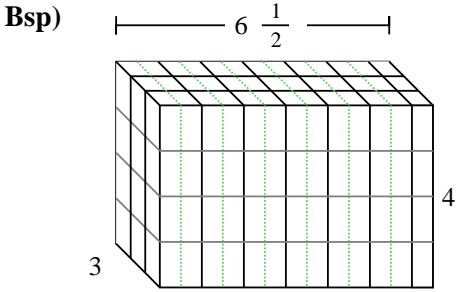
5. \_\_\_\_\_

6. \_\_\_\_\_

7. \_\_\_\_\_



Fülle jede rechteckige Figur mit Würfeln um das Volumen zu bestimmen. Jede Figureinheit ist in cm gemessen (nicht maßstabsgerecht).



Antworten

Bsp. 78 cm<sup>3</sup>

1. 70 cm<sup>3</sup>

2. 15 cm<sup>3</sup>

3. 44 cm<sup>3</sup>

4. 82 1/2 cm<sup>3</sup>

5. 28 cm<sup>3</sup>

6. 33 cm<sup>3</sup>

7. 39 cm<sup>3</sup>