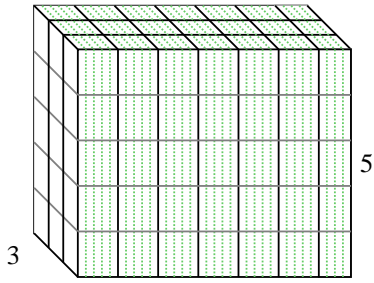


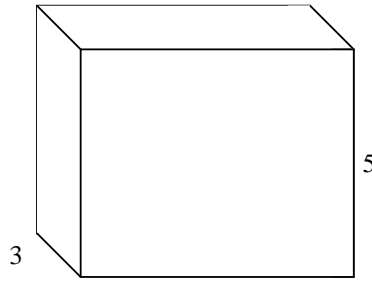


Fülle jede rechteckige Figur mit Würfeln um das Volumen zu bestimmen. Jede Figureinheit ist in cm gemessen (nicht maßstabsgerecht).

Bsp) $6 \frac{4}{5}$



1) $6 \frac{1}{2}$



Antworten

Bsp. 102 cm³

1. _____

2. _____

3. _____

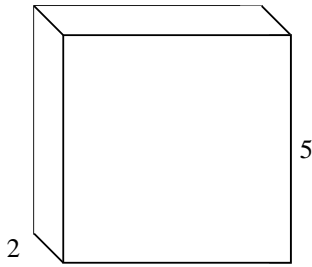
4. _____

5. _____


6. _____

7. _____

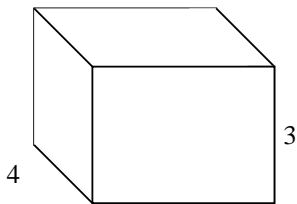
2) $5 \frac{1}{2}$



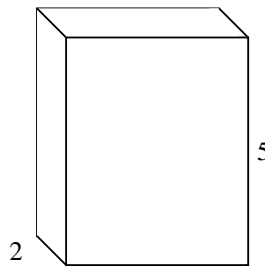
3) $6 \frac{1}{3}$



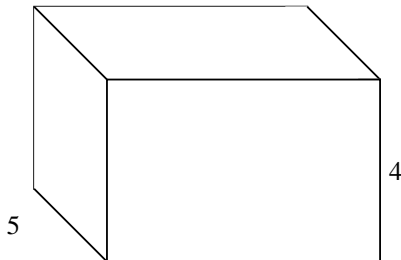
4) $4 \frac{2}{3}$




5) $4 \frac{1}{5}$



6) $6 \frac{1}{2}$



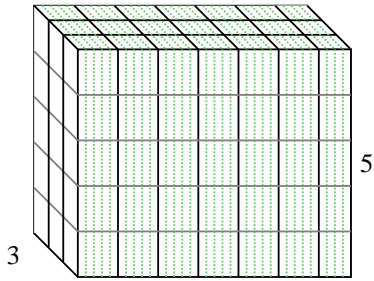
7) $5 \frac{1}{2}$



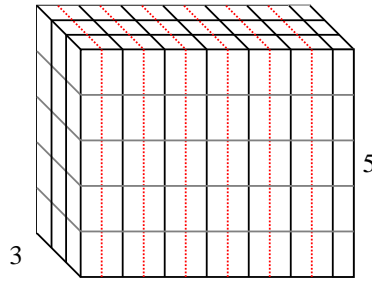


Fülle jede rechteckige Figur mit Würfeln um das Volumen zu bestimmen. Jede Figureinheit ist in cm gemessen (nicht maßstabsgerecht).

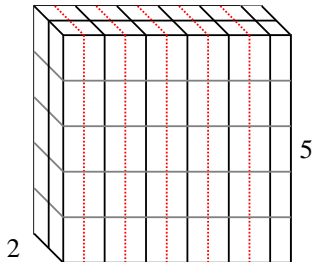
Bsp) $6 \frac{4}{5}$



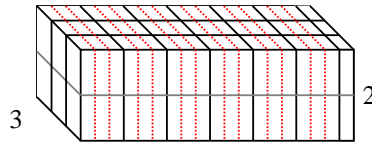
1) $6 \frac{1}{2}$



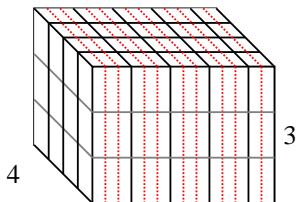
2) $5 \frac{1}{2}$



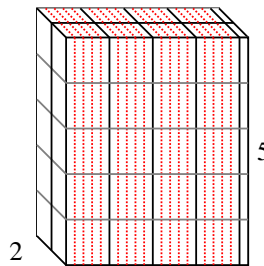
3) $6 \frac{1}{3}$



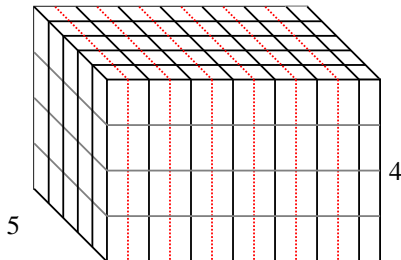
4) $4 \frac{2}{3}$



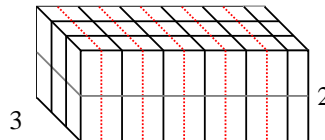
5) $4 \frac{1}{5}$



6) $6 \frac{1}{2}$



7) $5 \frac{1}{2}$



Antworten

Bsp. **102 cm³**

1. **97 1/2 cm³**

2. **55 cm³**

3. **38 cm³**

4. **56 cm³**

5. **42 cm³**

6. **130 cm³**

7. **33 cm³**