



Bestimme die Anzahl der kleinen Teilstücke, die aus dem größeren Stück gemacht werden können.

Bsp) $6\frac{1}{5}$

Bsp. 31

1) $3\frac{1}{4}$

1. _____

2) $5\frac{1}{2}$

2. _____

3) $1\frac{1}{3}$

3. _____

4) $2\frac{1}{4}$

4. _____

5) $6\frac{1}{2}$

5. _____

6) $6\frac{1}{3}$

6. _____

7) $8\frac{4}{5}$

7. _____

8) $5\frac{4}{5}$

8. _____

9) $3\frac{1}{2}$

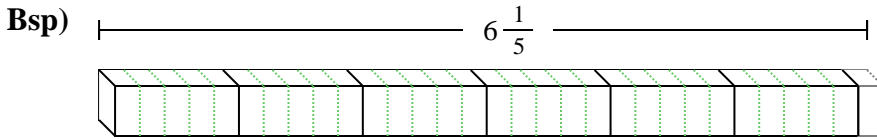
9. _____

10) $5\frac{4}{5}$

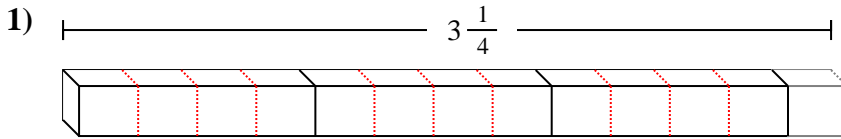
10. _____



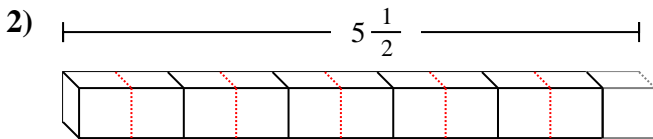
Bestimme die Anzahl der kleinen Teilstücke, die aus dem größeren Stück gemacht werden können.



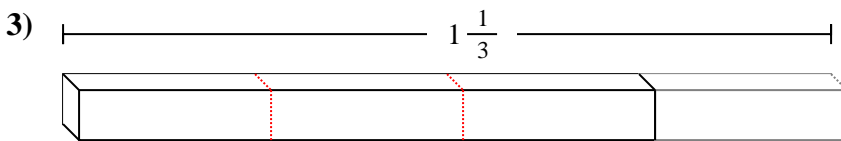
Bsp. 31



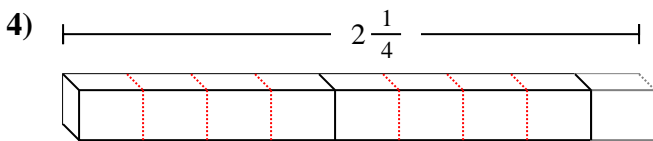
1. 13



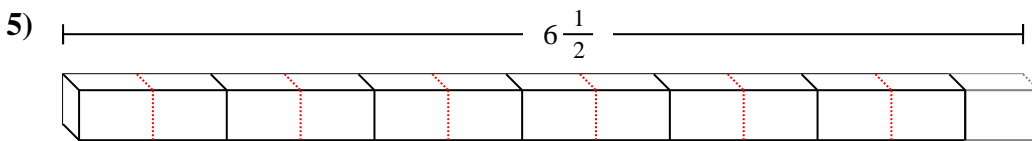
2. 11



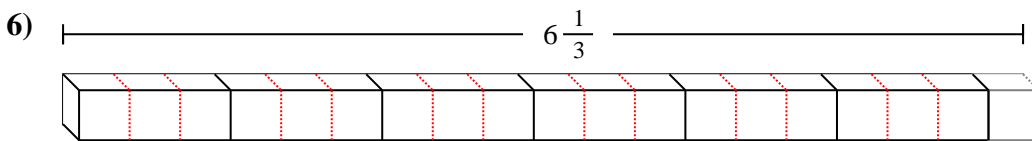
3. 4



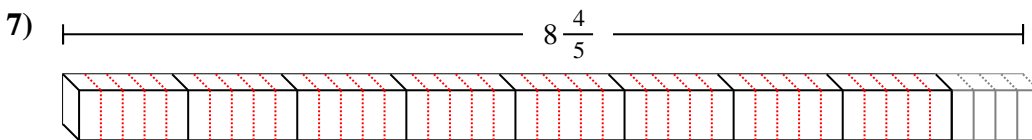
4. 9



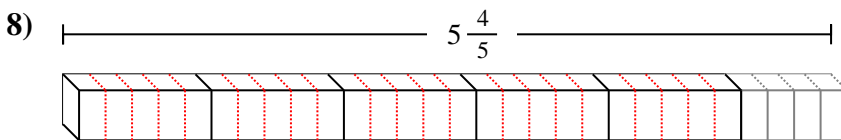
5. 13



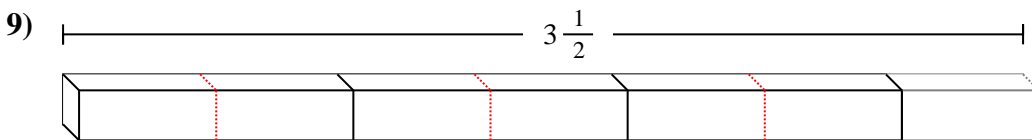
6. 19



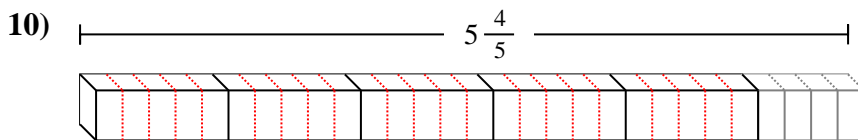
7. 44



8. 29



9. 7



10. 29