

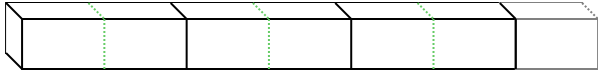


Bestimme die Anzahl der kleinen Teilstücke, die aus dem größeren Stück gemacht werden können.

Antworten

Bsp) $3\frac{1}{2}$


Bsp. 7



1. _____

1) $2\frac{1}{2}$

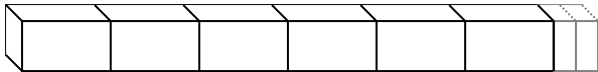
2. _____



3. _____

2) $6\frac{2}{4}$

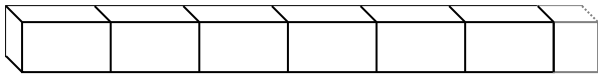
4. _____



5. _____

3) $6\frac{1}{2}$

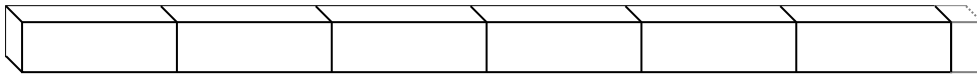
6. _____



7. _____


4) $6\frac{1}{5}$

8. _____



5) $7\frac{1}{3}$

9. _____




10. _____

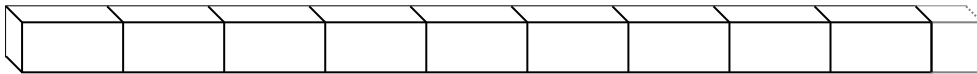
6) $2\frac{1}{5}$



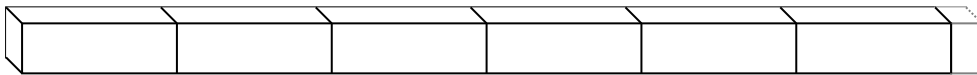
7) $1\frac{3}{4}$



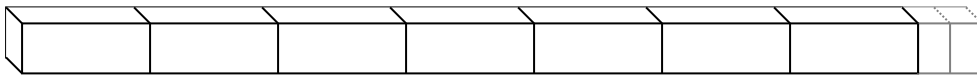
8) $9\frac{1}{2}$



9) $6\frac{1}{5}$



10) $7\frac{2}{4}$





Bestimme die Anzahl der kleinen Teilstücke, die aus dem größeren Stück gemacht werden können.

Bsp) $3\frac{1}{2}$

Bsp. 7

1) $2\frac{1}{2}$

1. 5

2) $6\frac{2}{4}$

2. 26

3) $6\frac{1}{2}$

3. 13

4) $6\frac{1}{5}$

4. 31

5) $7\frac{1}{3}$

5. 22

6) $2\frac{1}{5}$

6. 11

7) $1\frac{3}{4}$

7. 7

8) $9\frac{1}{2}$

8. 19

9) $6\frac{1}{5}$

9. 31

10) $7\frac{2}{4}$

10. 30