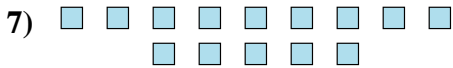
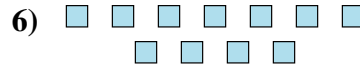
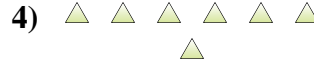
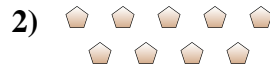




Bestimme, ob die Anzahl der Formen im Feld gerade oder ungerade ist.



Antworten

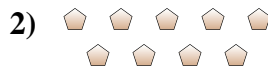
- 1. _____
- 2. _____
- 3. _____
- 4. _____
- 5. _____
- 6. _____
- 7. _____
- 8. _____
- 9. _____
- 10. _____



Bestimme, ob die Anzahl der Formen im Feld gerade oder ungerade ist.



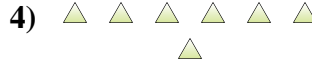
9



9



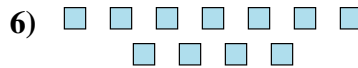
7



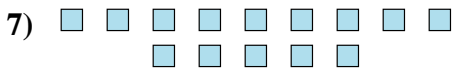
7



17



11



14



7



8



16

Antworten

1. ungerade

2. ungerade

3. ungerade

4. ungerade

5. ungerade

6. ungerade

7. gerade

8. ungerade

9. gerade

10. gerade