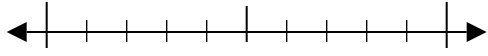




Benutze den Zahlenstrahl um jede Zahl auf die nächste Zehnerstelle zu runden.

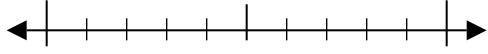
Antworten

Bsp) 25



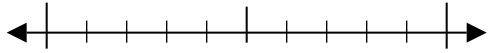
Bsp. 30

1) 91



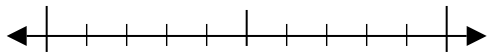
1. _____

2) 25



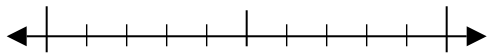
2. _____

3) 26



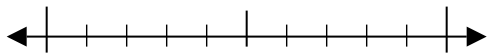
3. _____

4) 433



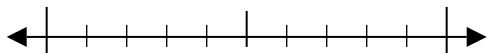
4. _____

5) 701



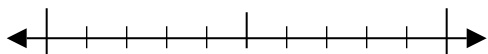
5. _____

6) 451



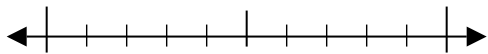
6. _____

7) 557



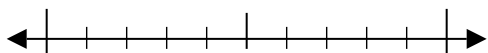
7. _____

8) 3.976



8. _____

9) 6.248

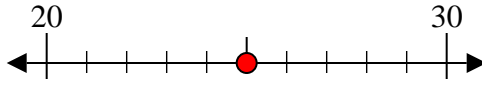


9. _____

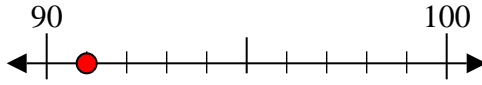


Benutze den Zahlenstrahl um jede Zahl auf die nächste Zehnerstelle zu runden.

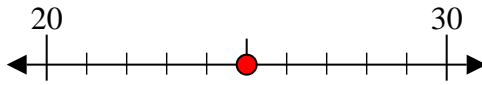
Bsp) 25



1) 91



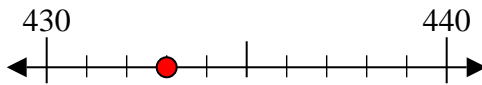
2) 25



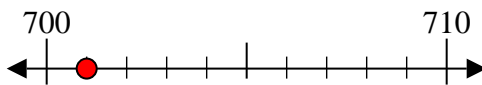
3) 26



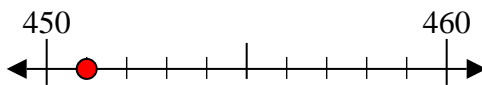
4) 433



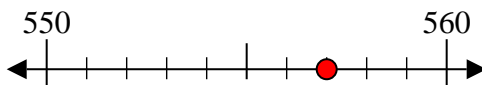
5) 701



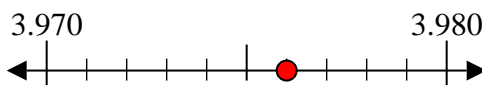
6) 451



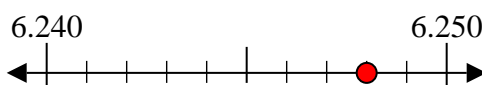
7) 557



8) 3.976



9) 6.248

**Antworten**Bsp. 301. 902. 303. 304. 4305. 7006. 4507. 5608. 3.9809. 6.250