





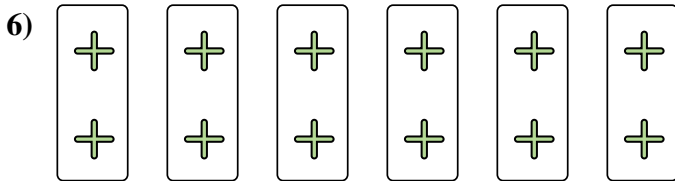
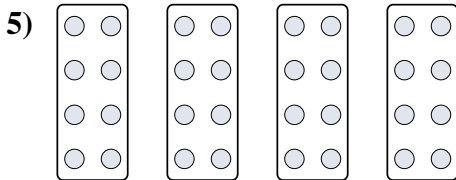
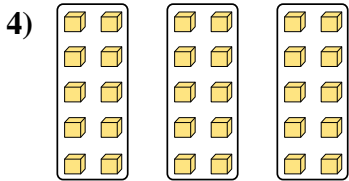

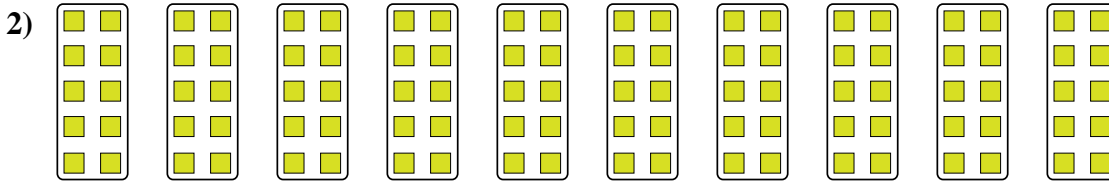
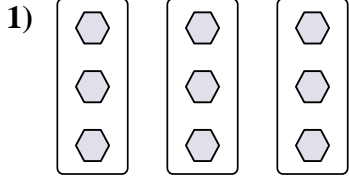
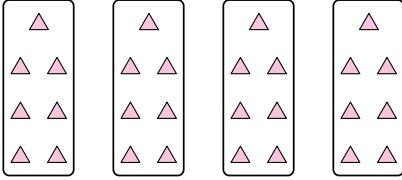
Stelle fest, wie man die gezeigten Gruppen als eine Multiplikationsaufgabe ausdrücken könnte.

Antworten

Bsp)

Bsp. $4 \cdot 7 = 28$

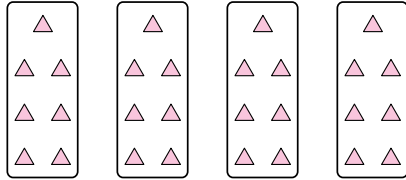
- 1. _____
- 2. _____
- 3. _____
- 4. _____
- 5. _____
- 6. _____
- 7. _____
- 8. _____



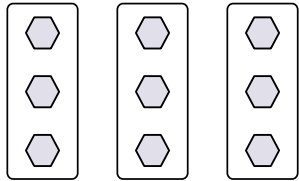


Stelle fest, wie man die gezeigten Gruppen als eine Multiplikationsaufgabe ausdrücken könnte.

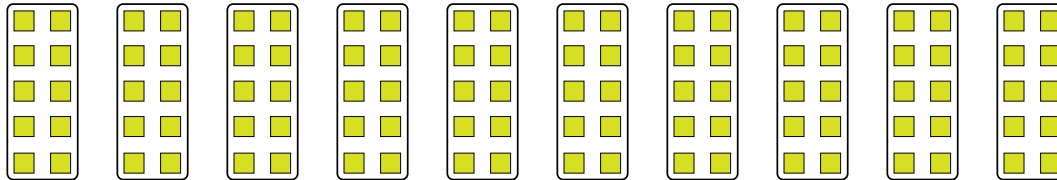
Bsp)




1)



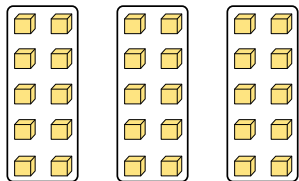
2)



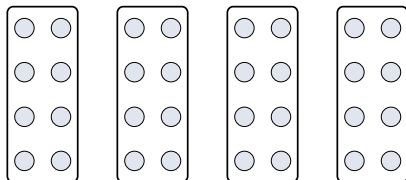
3)



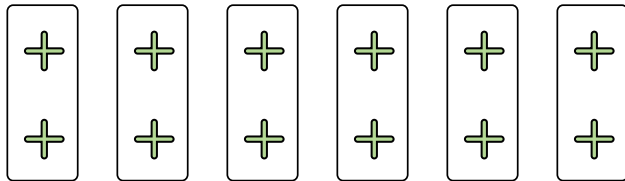
4)




5)




6)



7)



8)



Antworten

Bsp. 4•7=28

1. 3•3=9

2. 10•10=100

3. 8•9=72

4. 3•10=30

5. 4•8=32

6. 6•2=12

7. 6•7=42

8. 2•7=14