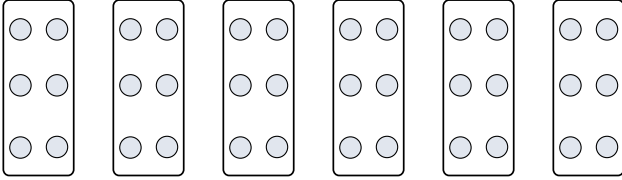




Stelle fest, wie man die gezeigten Gruppen als eine Multiplikationsaufgabe ausdrücken könnte.


Antworten

Bsp)



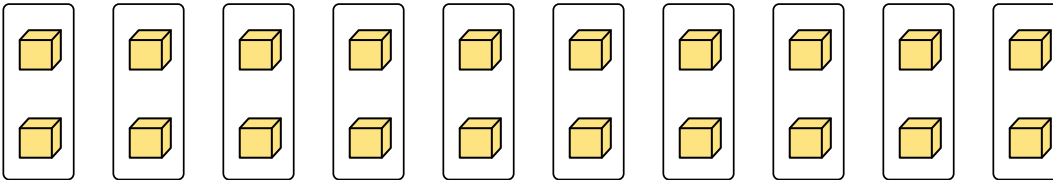
Bsp. $6 \cdot 6 = 36$

1)



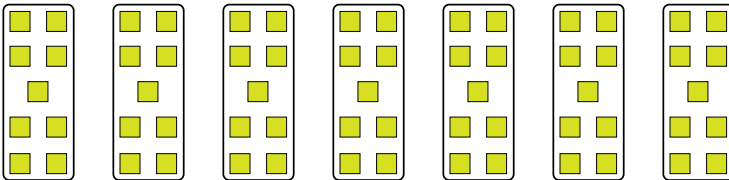
1. _____

2)




2. _____

3)



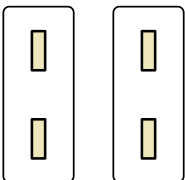
3. _____

4)



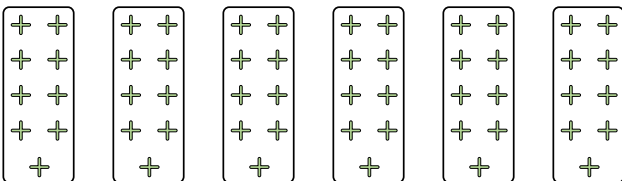
4. _____

5)




5. _____

6)



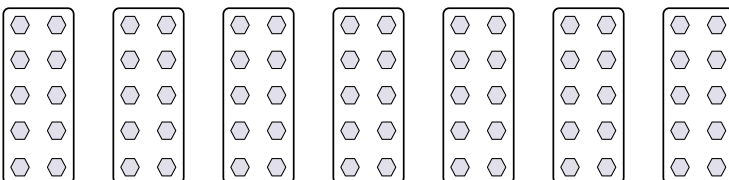
6. _____

7)



7. _____

8)

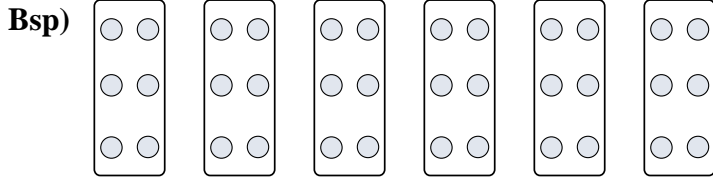


8. _____




Stelle fest, wie man die gezeigten Gruppen als eine Multiplikationsaufgabe ausdrücken könnte.

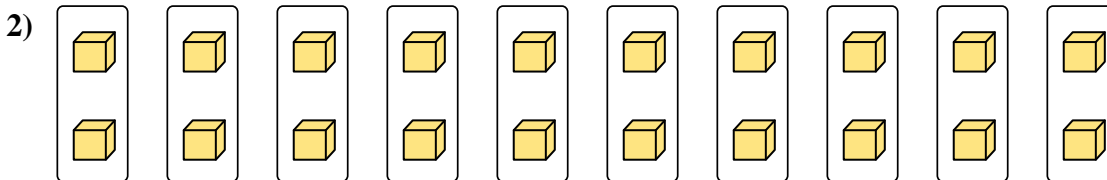
Antworten




Bsp. $6 \cdot 3 = 18$



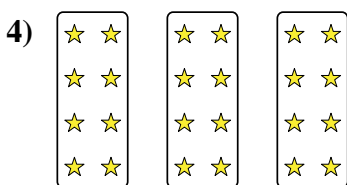
1. $2 \cdot 5 = 10$




2. $10 \cdot 2 = 20$



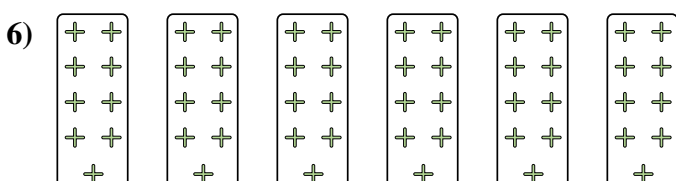
3. $7 \cdot 9 = 63$




4. $3 \cdot 8 = 24$



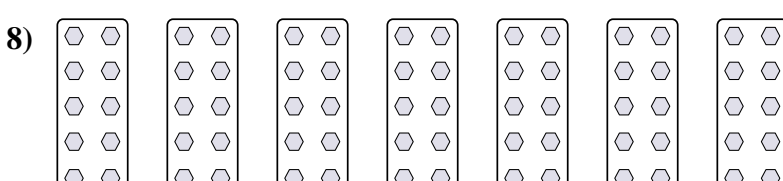
5. $2 \cdot 2 = 4$



6. $6 \cdot 9 = 54$



7. $3 \cdot 7 = 21$



8. $7 \cdot 10 = 70$