
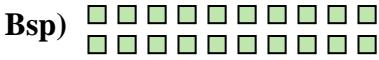




Schreibe jede Anordnung als eine Multiplikationsaufgabe um und löse sie.



Antworten

Bsp. 2 • 10 = 20

1. 9 • 2 = 18

2. 3 • 10 = 30

3. 7 • 5 = 35

4. 8 • 8 = 64

5. 3 • 8 = 24

6. 10 • 5 = 50





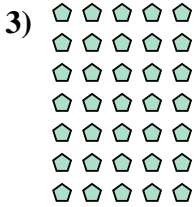
7. 5 • 9 = 45

8. 8 • 5 = 40

9. 9 • 10 = 90

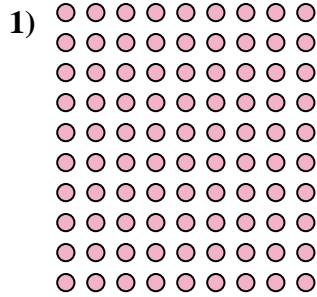
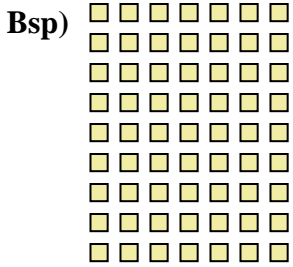
10. 9 • 3 = 27

11. 3 • 9 = 27





Schreibe jede Anordnung als eine Multiplikationsaufgabe um und löse sie.



Antworten
Bsp. 9 • 7 = 63

1. 10 • 9 = 90

2. 3 • 2 = 6

3. 2 • 7 = 14

4. 3 • 9 = 27

5. 9 • 3 = 27

6. 10 • 6 = 60

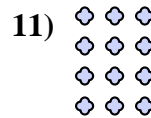
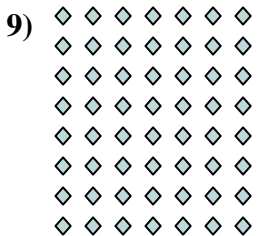

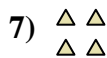
7. 2 • 2 = 4

8. 8 • 3 = 24

9. 8 • 7 = 56

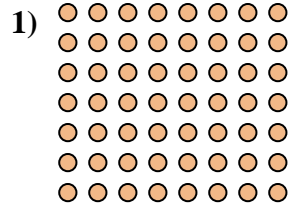
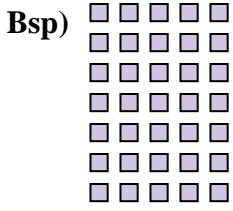
10. 2 • 3 = 6

11. 4 • 3 = 12





Schreibe jede Anordnung als eine Multiplikationsaufgabe um und löse sie.



Antworten

Bsp. 7 • 5 = 35

1. _____

2. _____

3. _____

4. _____

5. _____

6. _____

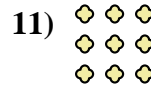
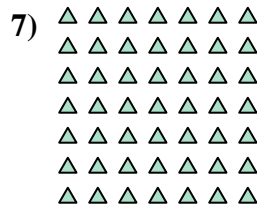
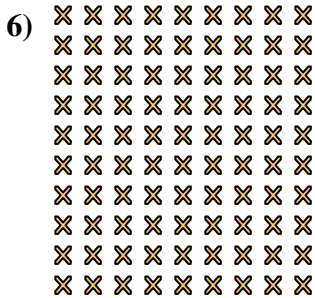

7. _____

8. _____

9. _____

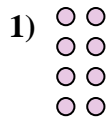
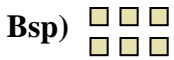
10. _____

11. _____





Schreibe jede Anordnung als eine Multiplikationsaufgabe um und löse sie.



Antworten

Bsp. 2 • 3 = 6

1. _____

2. _____

3. _____

4. _____

5. _____

6. _____

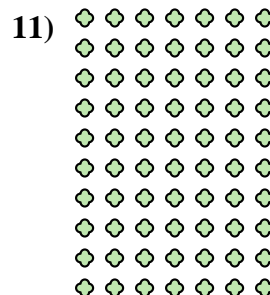
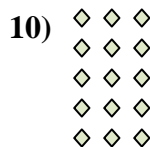

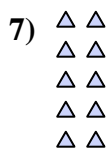
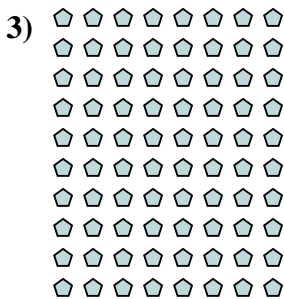
7. _____

8. _____

9. _____

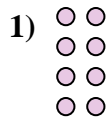
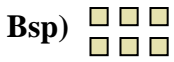
10. _____

11. _____





Schreibe jede Anordnung als eine Multiplikationsaufgabe um und löse sie.



Antworten

Bsp. 2 • 3 = 6

1. 4 • 2 = 8

2. 3 • 2 = 6

3. 10 • 8 = 80

4. 4 • 10 = 40

5. 7 • 8 = 56

6. 8 • 3 = 24

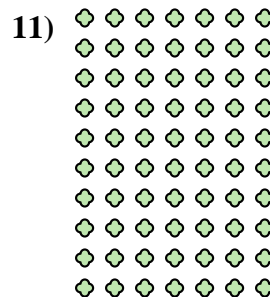
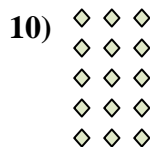

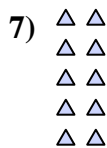
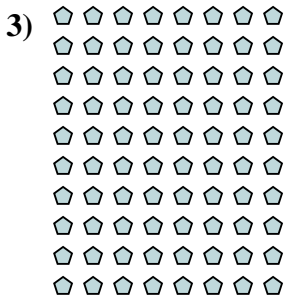
7. 5 • 2 = 10

8. 4 • 8 = 32

9. 9 • 7 = 63

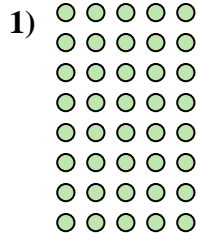

10. 5 • 3 = 15

11. 10 • 7 = 70





Schreibe jede Anordnung als eine Multiplikationsaufgabe um und löse sie.



Antworten

Bsp. 4 • 9 = 36

1. _____

2. _____

3. _____

4. _____

5. _____

6. _____

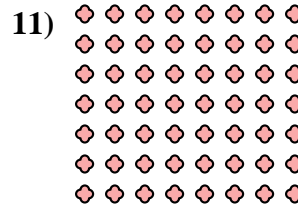





7. _____

8. _____

9. _____

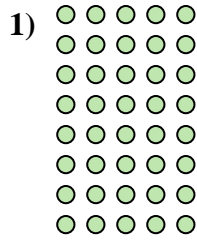

10. _____

11. _____





Schreibe jede Anordnung als eine Multiplikationsaufgabe um und löse sie.



Antworten

Bsp. 4 • 9 = 36

1. 8 • 5 = 40

2. 6 • 6 = 36

3. 8 • 4 = 32

4. 7 • 6 = 42

5. 6 • 9 = 54

6. 9 • 4 = 36

7. 4 • 3 = 12

8. 3 • 8 = 24

9. 7 • 2 = 14

10. 9 • 6 = 54

11. 7 • 8 = 56

