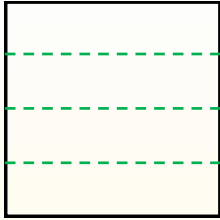




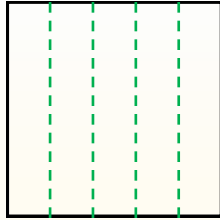
Teile die Form wie beschrieben auf und zähle dann die Anzahl der Felder.

Antworten

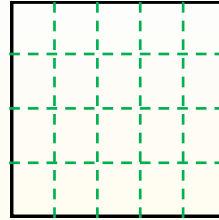
Reihen gehen von links nach rechts.



Spalten gehen von oben nach unten.




Dieses Quadrat hat 4 **Reihen** und 5 **Spalten**.
Es gibt insgesamt **20** Quadrate.




- 1. _____
- 2. _____
- 3. _____
- 4. _____
- 5. _____
- 6. _____
- 7. _____
- 8. _____
- 9. _____


1) 4 Reihen
3 Spalten




2) 4 Reihen
2 Spalten




3) 5 Reihen
2 Spalten




4) 2 Reihen
5 Spalten




5) 3 Reihen
2 Spalten




6) 5 Reihen
3 Spalten




7) 5 Reihen
4 Spalten



8) 3 Reihen
4 Spalten



9) 4 Reihen
4 Spalten





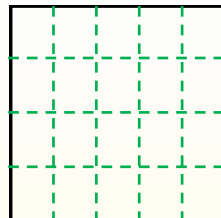
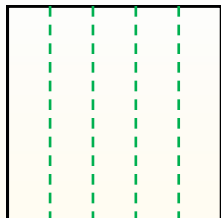
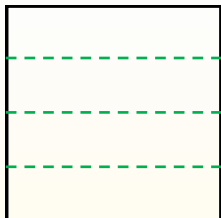
Teile die Form wie beschrieben auf und zähle dann die Anzahl der Felder.

Antworten

Reihen gehen von links nach rechts.

Spalten gehen von oben nach unten.

Dieses Quadrat hat 4 **Reihen** und 5 **Spalten**.
Es gibt insgesamt **20** Quadrate.



1. 12

2. 8

3. 10

4. 10

5. 6


6. 15

7. 20

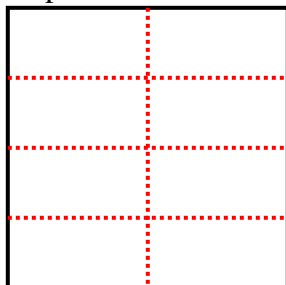
8. 12

9. 16

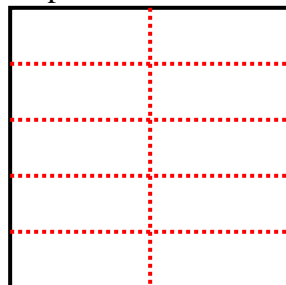
1) 4 Reihen
3 Spalten



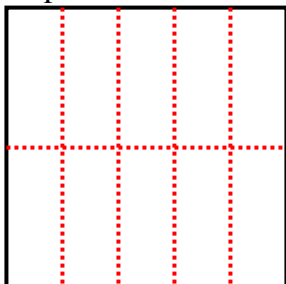
2) 4 Reihen
2 Spalten



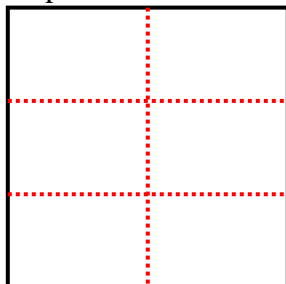
3) 5 Reihen
2 Spalten



4) 2 Reihen
5 Spalten




5) 3 Reihen
2 Spalten




6) 5 Reihen
3 Spalten



7) 5 Reihen
4 Spalten



8) 3 Reihen
4 Spalten



9) 4 Reihen
4 Spalten

