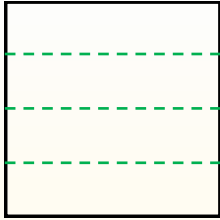




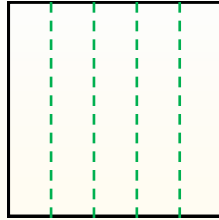
Teile die Form wie beschrieben auf und zähle dann die Anzahl der Felder.

Antworten

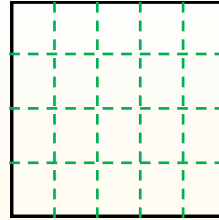
Reihen gehen von links nach rechts.



Spalten gehen von oben nach unten.




Dieses Quadrat hat 4 Reihen und 5 Spalten.
Es gibt insgesamt 20 Quadrate.




1. _____
2. _____
3. _____
4. _____
5. _____
6. _____
7. _____
8. _____
9. _____


1) 5 Reihen
2 Spalten




2) 2 Reihen
4 Spalten




3) 4 Reihen
4 Spalten




4) 3 Reihen
3 Spalten




5) 3 Reihen
2 Spalten




6) 2 Reihen
3 Spalten




7) 4 Reihen
3 Spalten



8) 5 Reihen
5 Spalten



9) 3 Reihen
4 Spalten





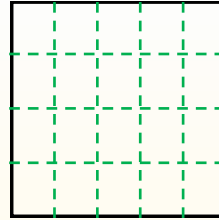
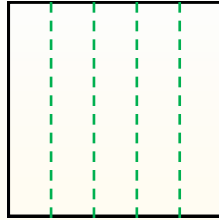
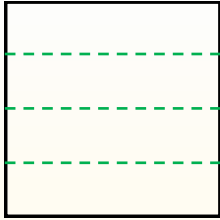
Teile die Form wie beschrieben auf und zähle dann die Anzahl der Felder.

Antworten

Reihen gehen von links nach rechts.

Spalten gehen von oben nach unten.

Dieses Quadrat hat 4 **Reihen** und 5 **Spalten**.
Es gibt insgesamt **20** Quadrate.



1. 10

2. 8

3. 16

4. 9

5. 6

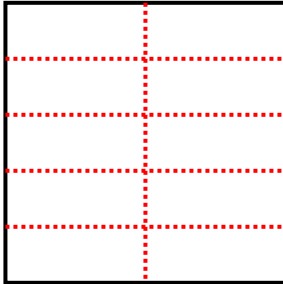
6. 6

7. 12

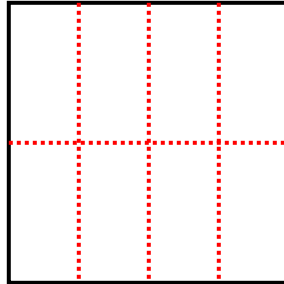
8. 25

9. 12

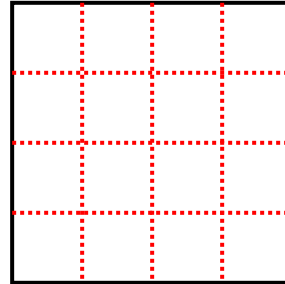
1) 5 Reihen
2 Spalten



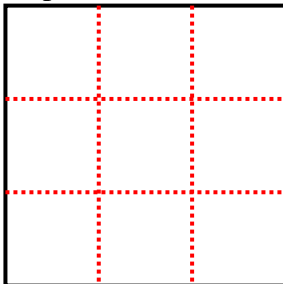
2) 2 Reihen
4 Spalten



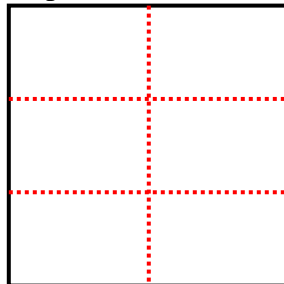
3) 4 Reihen
4 Spalten



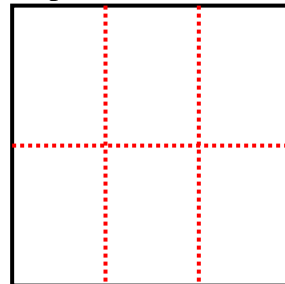
4) 3 Reihen
3 Spalten




5) 3 Reihen
2 Spalten




6) 2 Reihen
3 Spalten



7) 4 Reihen
3 Spalten



8) 5 Reihen
5 Spalten



9) 3 Reihen
4 Spalten

