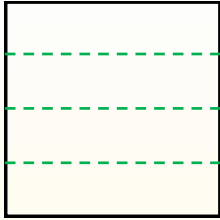




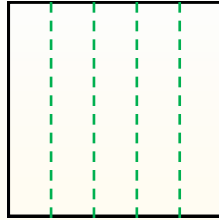
Teile die Form wie beschrieben auf und zähle dann die Anzahl der Felder.

Antworten

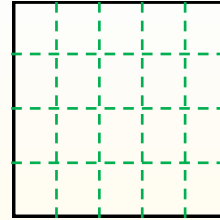
Reihen gehen von links nach rechts.



Spalten gehen von oben nach unten.




Dieses Quadrat hat 4 **Reihen** und 5 **Spalten**.
Es gibt insgesamt **20** Quadrate.




1. _____
2. _____
3. _____
4. _____
5. _____
6. _____
7. _____
8. _____
9. _____


1) 2 Reihen
2 Spalten




2) 2 Reihen
5 Spalten




3) 5 Reihen
5 Spalten




4) 3 Reihen
5 Spalten




5) 3 Reihen
3 Spalten




6) 5 Reihen
3 Spalten




7) 4 Reihen
2 Spalten



8) 2 Reihen
4 Spalten



9) 3 Reihen
2 Spalten





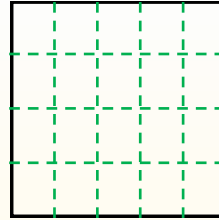
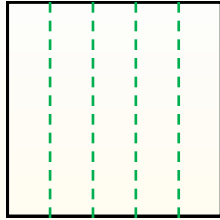
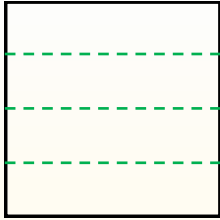
Teile die Form wie beschrieben auf und zähle dann die Anzahl der Felder.

Antworten

Reihen gehen von links nach rechts.

Spalten gehen von oben nach unten.

Dieses Quadrat hat 4 Reihen und 5 Spalten.
Es gibt insgesamt 20 Quadrate.



1. 4

2. 10

3. 25

4. 15

5. 9

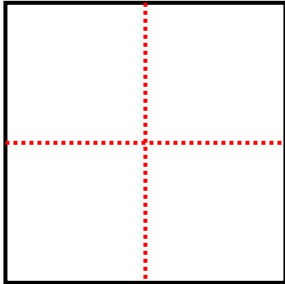
6. 15

7. 8

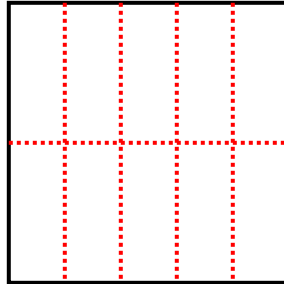
8. 8

9. 6

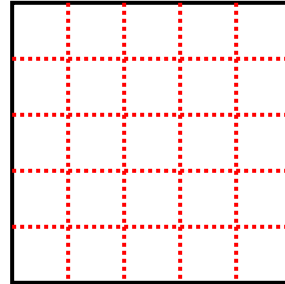
1) 2 Reihen
2 Spalten



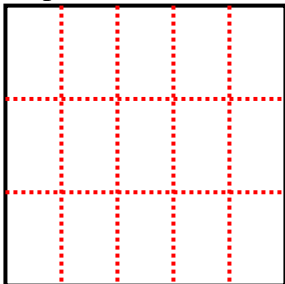
2) 2 Reihen
5 Spalten



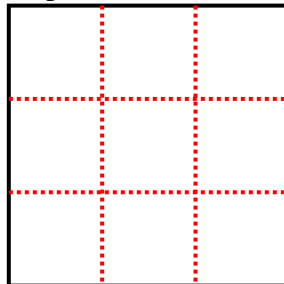
3) 5 Reihen
5 Spalten



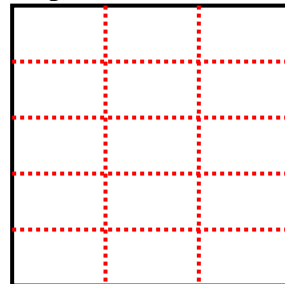
4) 3 Reihen
5 Spalten



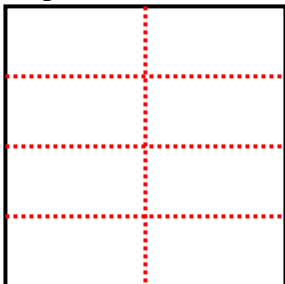
5) 3 Reihen
3 Spalten



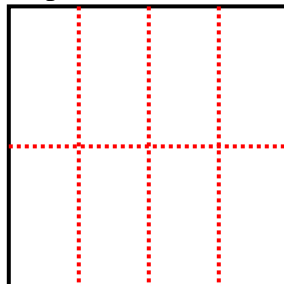
6) 5 Reihen
3 Spalten



7) 4 Reihen
2 Spalten



8) 2 Reihen
4 Spalten



9) 3 Reihen
2 Spalten

