


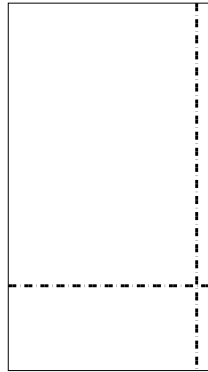


Benutze die vorgegebene Anordnung um jede Aufgabe zu lösen.


1) $43 \cdot 23 =$



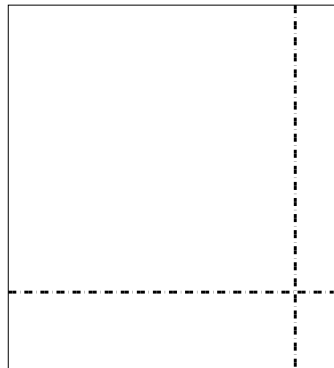
2) $39 \cdot 22 =$




3) $38 \cdot 25 =$




4) $38 \cdot 35 =$



5) $32 \cdot 44 =$



6) $33 \cdot 16 =$



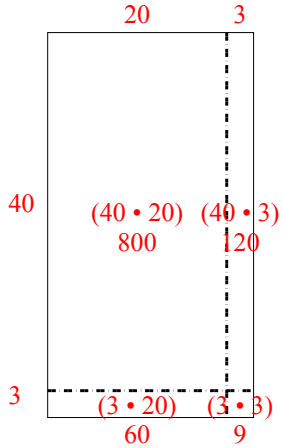
Antworten

- 1. _____
- 2. _____
- 3. _____
- 4. _____
- 5. _____
- 6. _____

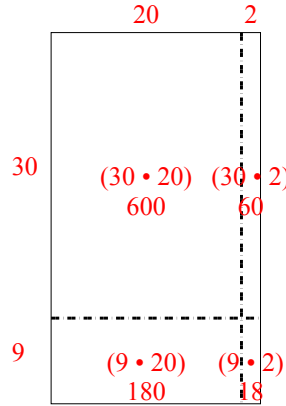


Benutze die vorgegebene Anordnung um jede Aufgabe zu lösen.

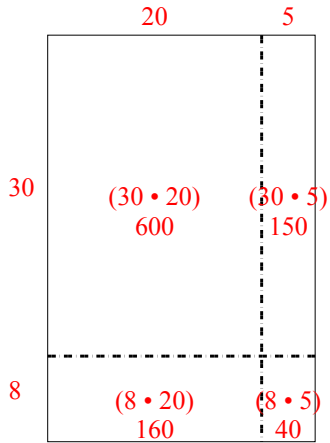
1) $43 \cdot 23 =$



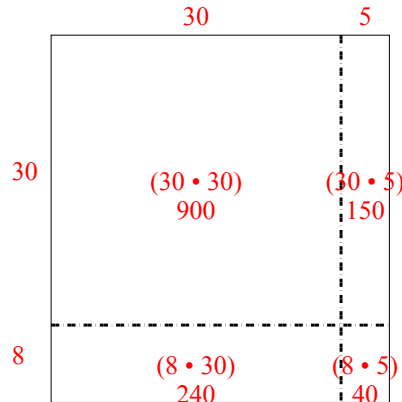
2) $39 \cdot 22 =$



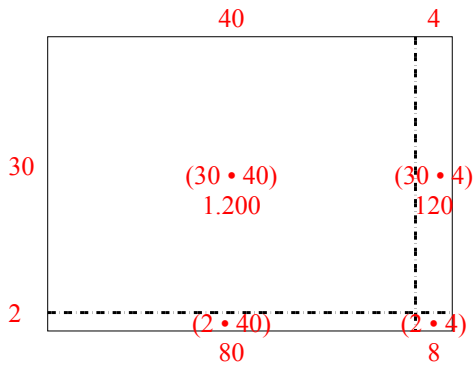
3) $38 \cdot 25 =$



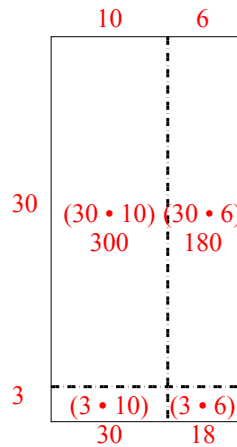
4) $38 \cdot 35 =$



5) $32 \cdot 44 =$



6) $33 \cdot 16 =$



Antworten

1. 989

2. 858

3. 950

4. 1.330

5. 1.408

6. 528