





Benutze die vorgegebene Anordnung um jede Aufgabe zu lösen.


1) $39 \cdot 22 =$



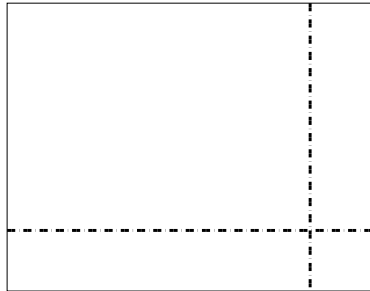
2) $38 \cdot 14 =$




3) $36 \cdot 28 =$




4) $38 \cdot 49 =$



5) $48 \cdot 64 =$



6) $46 \cdot 55 =$



Antworten

1. _____

2. _____

3. _____

4. _____

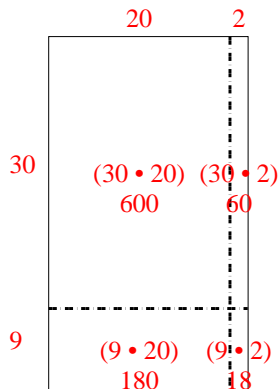
5. _____

6. _____

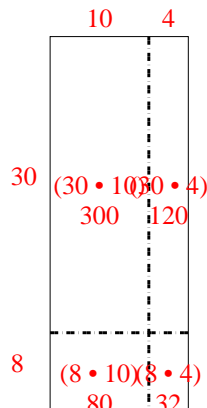


Benutze die vorgegebene Anordnung um jede Aufgabe zu lösen.

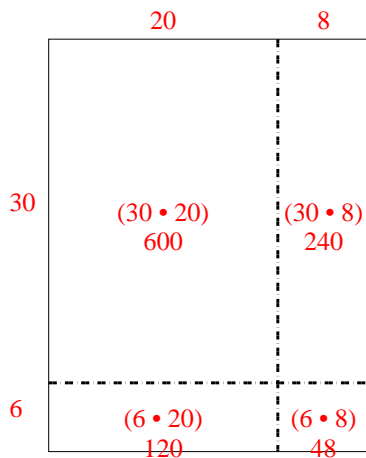
1) $39 \cdot 22 =$



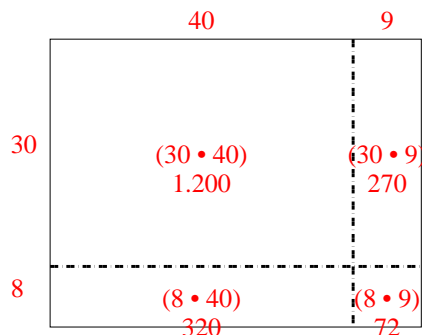
2) $38 \cdot 14 =$



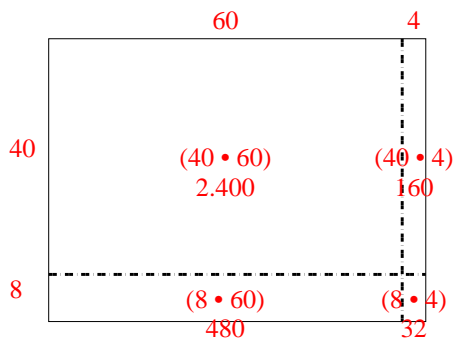
3) $36 \cdot 28 =$



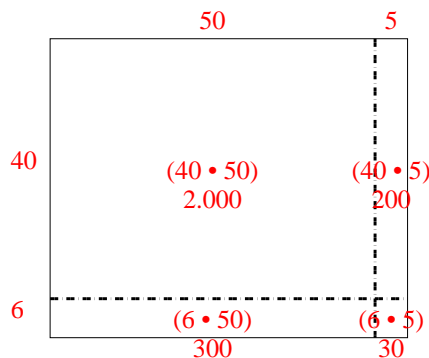
4) $38 \cdot 49 =$



5) $48 \cdot 64 =$



6) $46 \cdot 55 =$

Antworten1. 8582. 5323. 1.0084. 1.8625. 3.0726. 2.530