





Benutze die vorgegebene Anordnung um jede Aufgabe zu lösen.


1)  $55 \cdot 59 =$



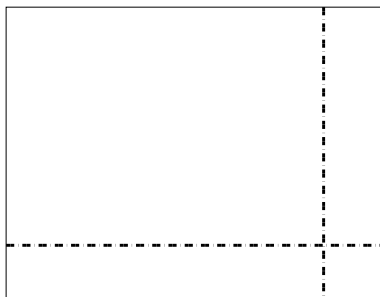
2)  $44 \cdot 46 =$




3)  $35 \cdot 24 =$




4)  $37 \cdot 48 =$



5)  $35 \cdot 47 =$



6)  $35 \cdot 35 =$



Antworten

1. \_\_\_\_\_

2. \_\_\_\_\_

3. \_\_\_\_\_

4. \_\_\_\_\_

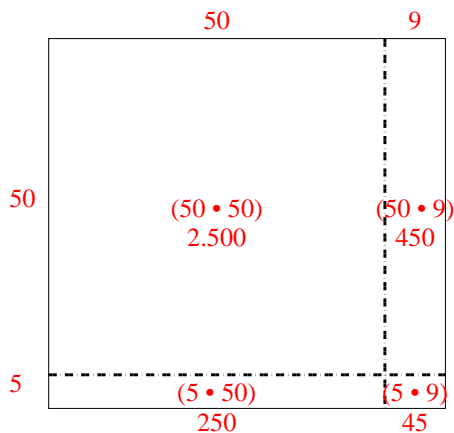
5. \_\_\_\_\_

6. \_\_\_\_\_

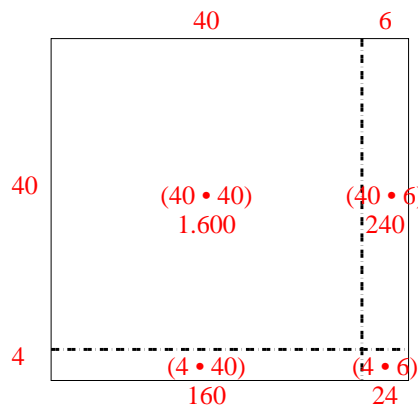


Benutze die vorgegebene Anordnung um jede Aufgabe zu lösen.

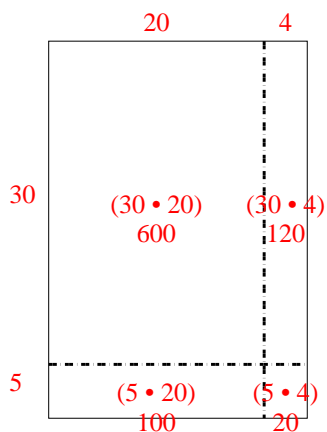
1)  $55 \cdot 59 =$



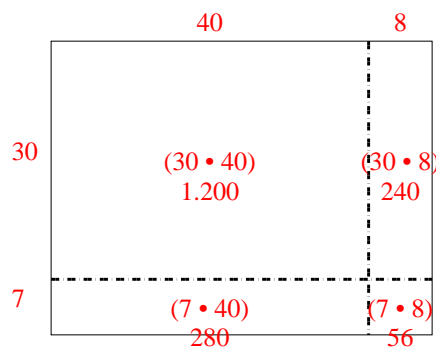
2)  $44 \cdot 46 =$



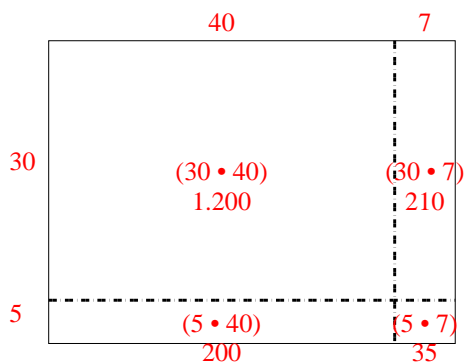
3)  $35 \cdot 24 =$



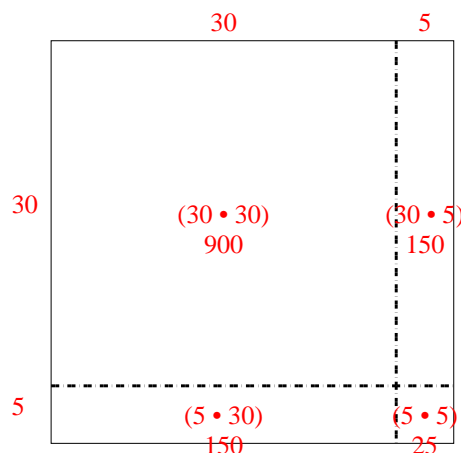
4)  $37 \cdot 48 =$



5)  $35 \cdot 47 =$



6)  $35 \cdot 35 =$

Antworten1. 3.2452. 2.0243. 8404. 1.7765. 1.6456. 1.225